


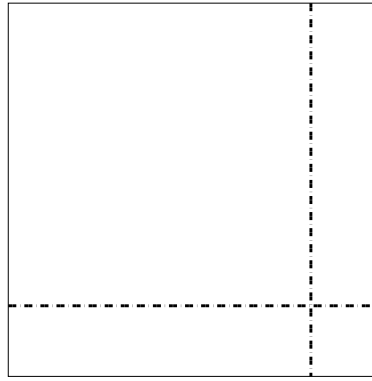


Utilisez les rectangles pour résoudre chaque problème.

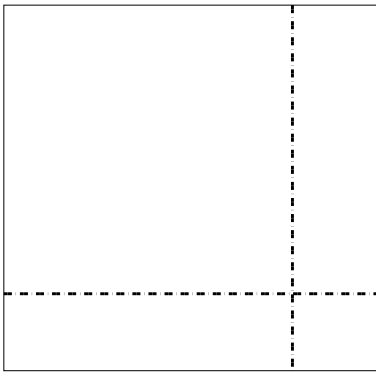
1)  $33 \times 14 =$



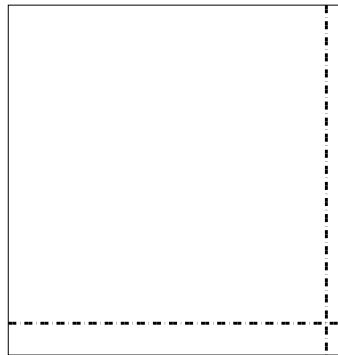
2)  $37 \times 37 =$




3)  $38 \times 39 =$



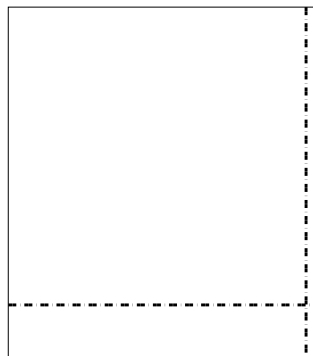
4)  $33 \times 32 =$



5)  $39 \times 43 =$



6)  $47 \times 42 =$



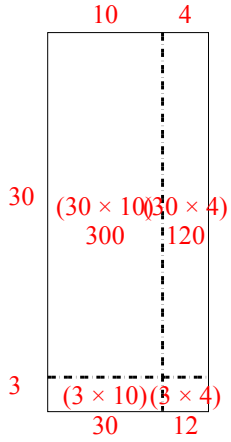
**Réponses**

- 1. \_\_\_\_\_
- 2. \_\_\_\_\_
- 3. \_\_\_\_\_
- 4. \_\_\_\_\_
- 5. \_\_\_\_\_
- 6. \_\_\_\_\_

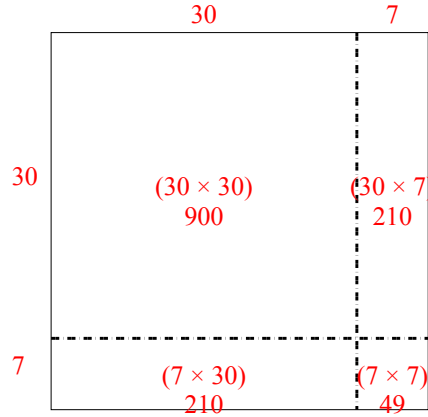


Utilisez les rectangles pour résoudre chaque problème.

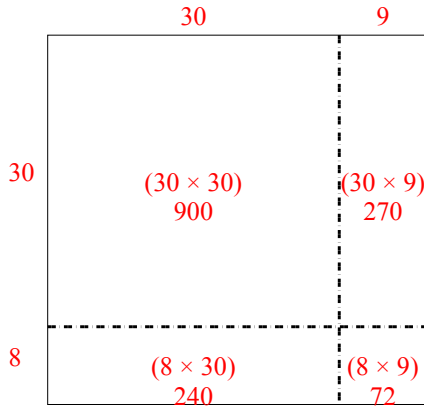
1)  $33 \times 14 =$



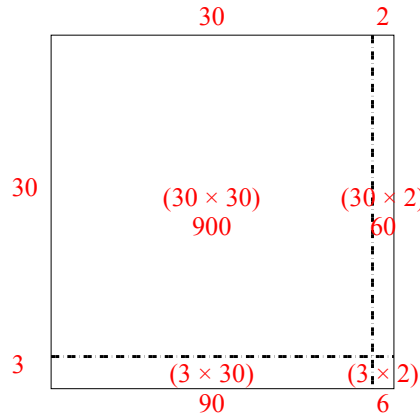
2)  $37 \times 37 =$



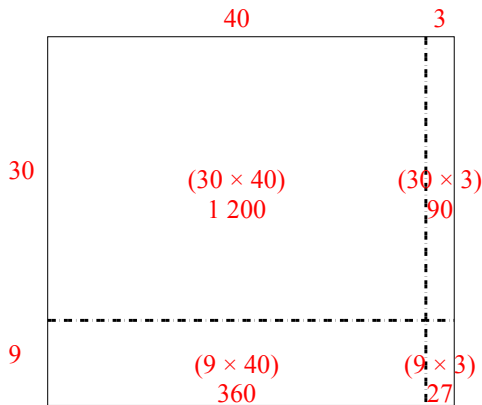
3)  $38 \times 39 =$



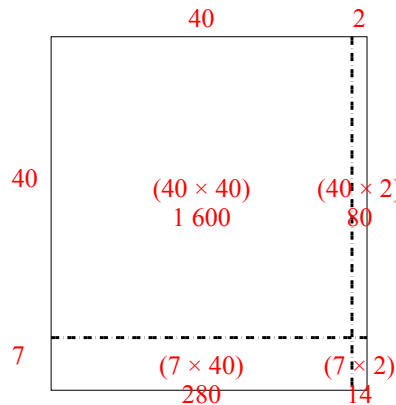
4)  $33 \times 32 =$



5)  $39 \times 43 =$



6)  $47 \times 42 =$



**Réponses**

1. 462
2. 1 369
3. 1 482
4. 1 056
5. 1 677
6. 1 974