





Utilisez les rectangles pour résoudre chaque problème.


1) $45 \times 35 =$




2) $44 \times 34 =$




3) $45 \times 32 =$




4) $39 \times 12 =$



5) $34 \times 42 =$



6) $32 \times 14 =$



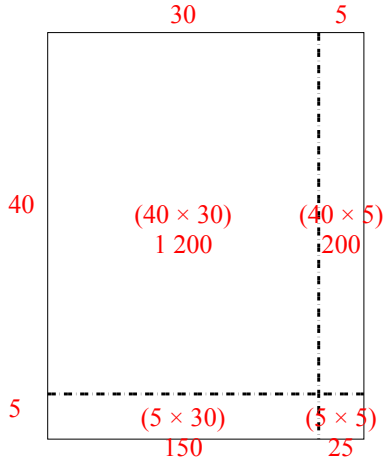
Réponses

- 1. _____
- 2. _____
- 3. _____
- 4. _____
- 5. _____
- 6. _____

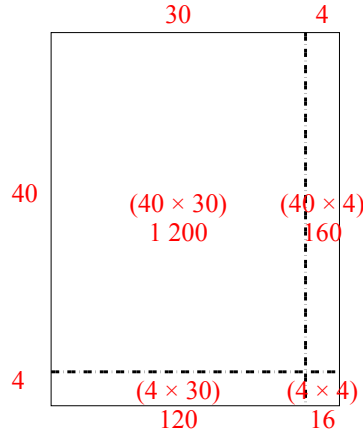


Utilisez les rectangles pour résoudre chaque problème.

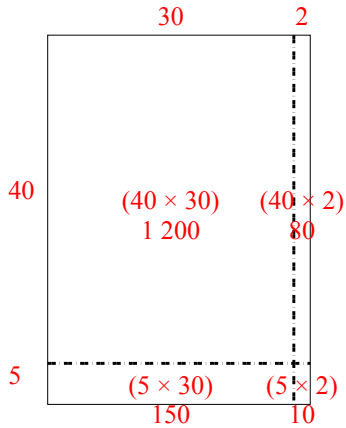
1) $45 \times 35 =$



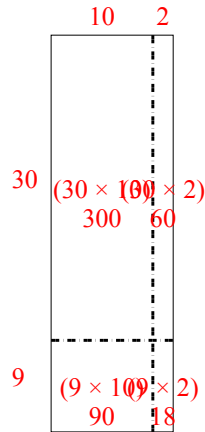
2) $44 \times 34 =$



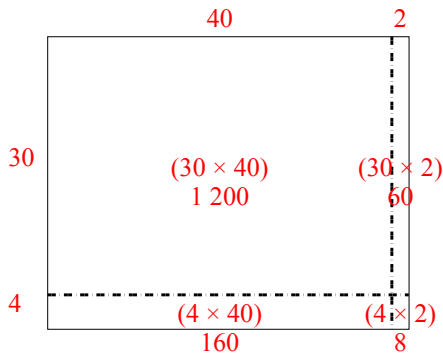
3) $45 \times 32 =$



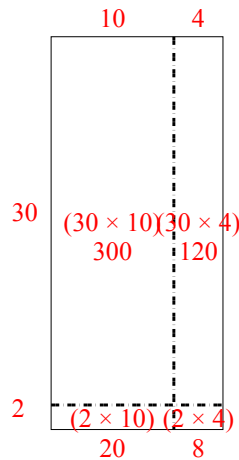
4) $39 \times 12 =$



5) $34 \times 42 =$



6) $32 \times 14 =$



Réponses

1. 1 575
2. 1 496
3. 1 440
4. 468
5. 1 428
6. 448