





Utilisez les rectangles pour résoudre chaque problème.


1) $49 \times 35 =$




2) $37 \times 29 =$




3) $33 \times 49 =$




4) $35 \times 18 =$



5) $33 \times 15 =$



6) $35 \times 28 =$



Réponses

1. _____

2. _____

3. _____

4. _____

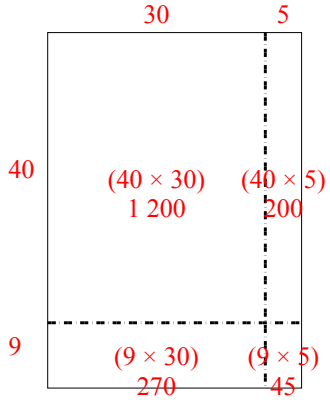
5. _____

6. _____

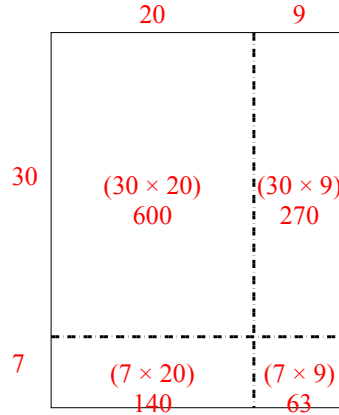


Utilisez les rectangles pour résoudre chaque problème.

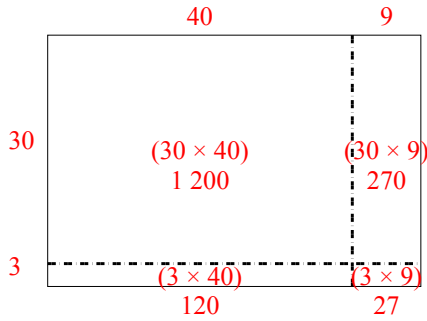
1) $49 \times 35 =$



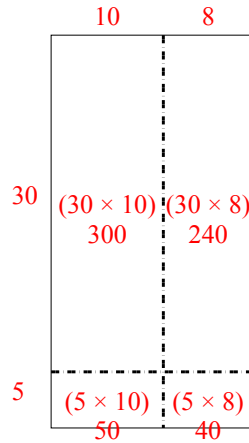
2) $37 \times 29 =$



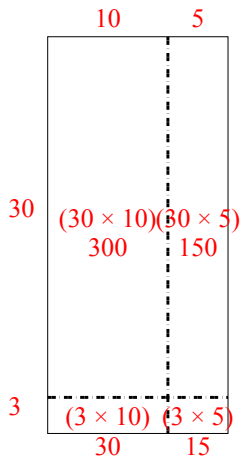
3) $33 \times 49 =$



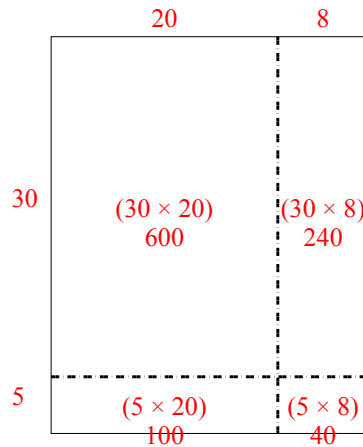
4) $35 \times 18 =$



5) $33 \times 15 =$



6) $35 \times 28 =$



Réponses

1. 1 715
2. 1 073
3. 1 617
4. 630
5. 495
6. 980