





Utilisez les rectangles pour résoudre chaque problème.


1) $47 \times 26 =$




2) $35 \times 13 =$




3) $32 \times 44 =$




4) $44 \times 56 =$



5) $54 \times 39 =$



6) $37 \times 26 =$



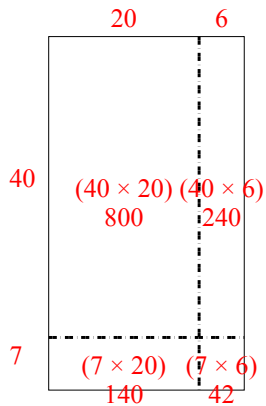
Réponses

- 1. _____
- 2. _____
- 3. _____
- 4. _____
- 5. _____
- 6. _____

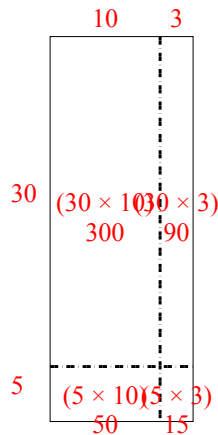


Utilisez les rectangles pour résoudre chaque problème.

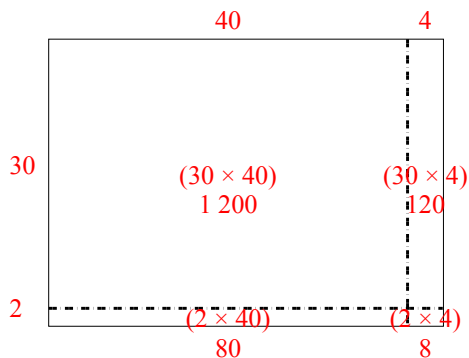
1) $47 \times 26 =$



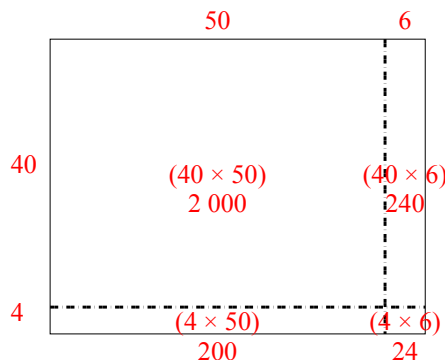
2) $35 \times 13 =$



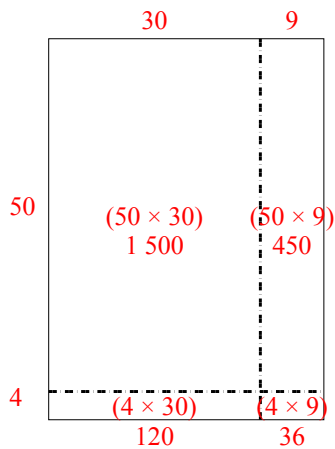
3) $32 \times 44 =$



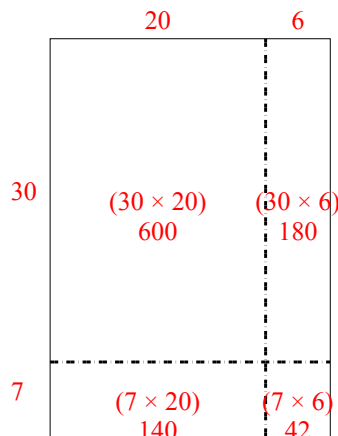
4) $44 \times 56 =$



5) $54 \times 39 =$



6) $37 \times 26 =$



Réponses

1. 1 222
2. 455
3. 1 408
4. 2 464
5. 2 106
6. 962