


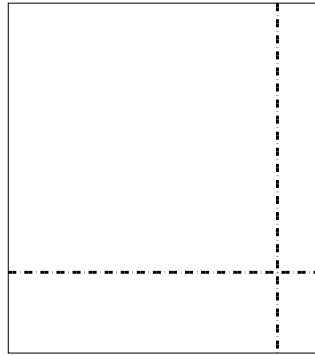


Utilisez les rectangles pour résoudre chaque problème.


1) $43 \times 54 =$



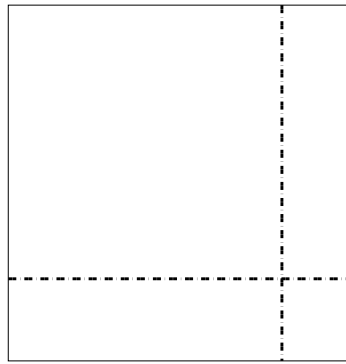
2) $39 \times 35 =$



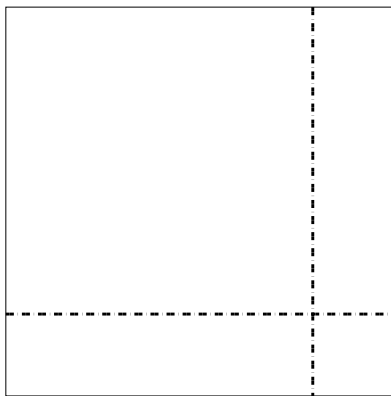
3) $33 \times 35 =$




4) $39 \times 38 =$



5) $38 \times 38 =$



6) $32 \times 45 =$



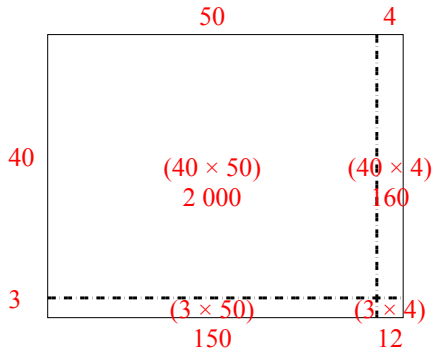
Réponses

- 1. _____
- 2. _____
- 3. _____
- 4. _____
- 5. _____
- 6. _____

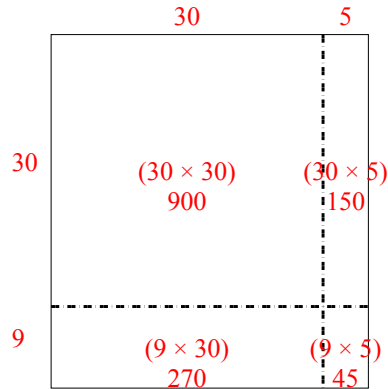


Utilisez les rectangles pour résoudre chaque problème.

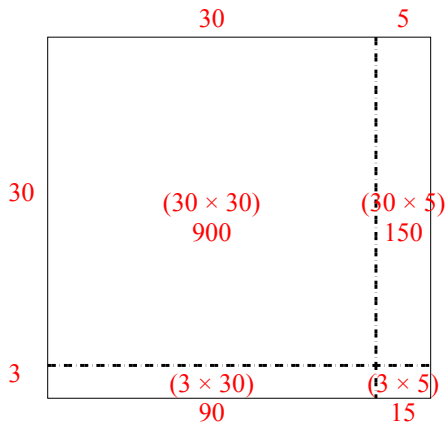
1) $43 \times 54 =$



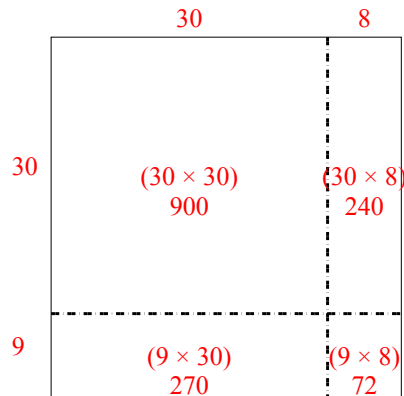
2) $39 \times 35 =$



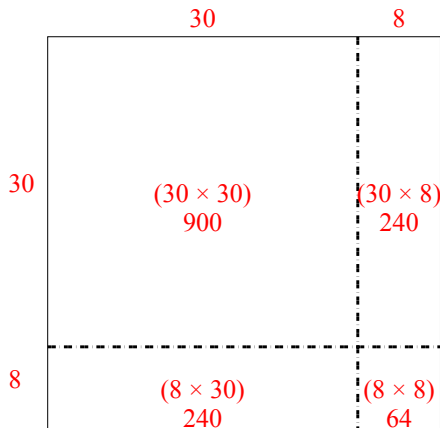
3) $33 \times 35 =$



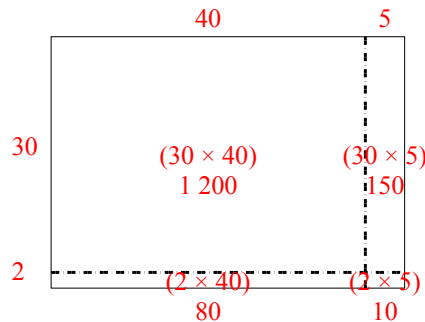
4) $39 \times 38 =$



5) $38 \times 38 =$



6) $32 \times 45 =$



Réponses

1. 2 322

2. 1 365

3. 1 155

4. 1 482

5. 1 444

6. 1 440