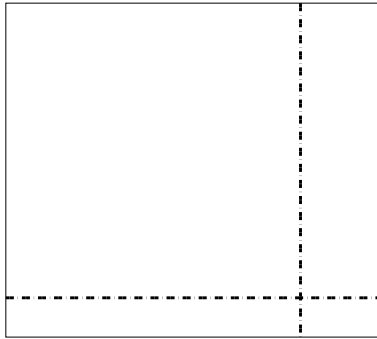


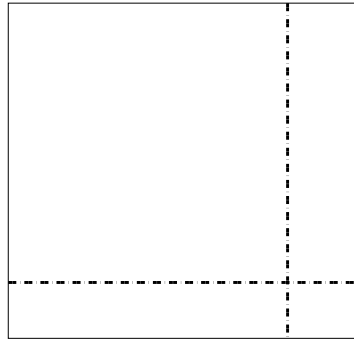


Utilisez les rectangles pour résoudre chaque problème.


1)  $34 \times 38 =$



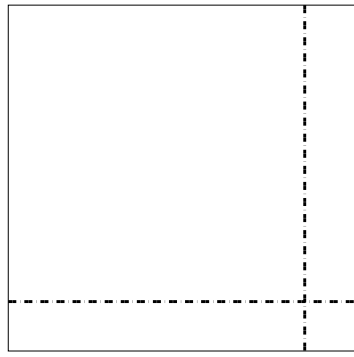
2)  $36 \times 38 =$




3)  $38 \times 26 =$




4)  $35 \times 36 =$



5)  $32 \times 24 =$



6)  $38 \times 32 =$



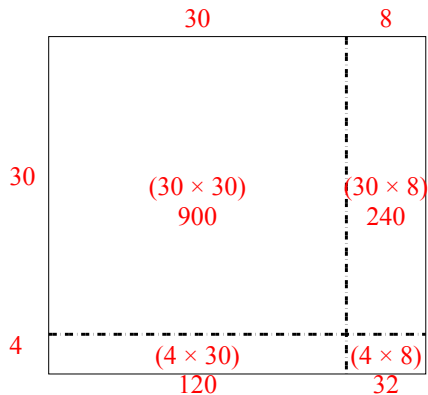
**Réponses**

- 1. \_\_\_\_\_
- 2. \_\_\_\_\_
- 3. \_\_\_\_\_
- 4. \_\_\_\_\_
- 5. \_\_\_\_\_
- 6. \_\_\_\_\_

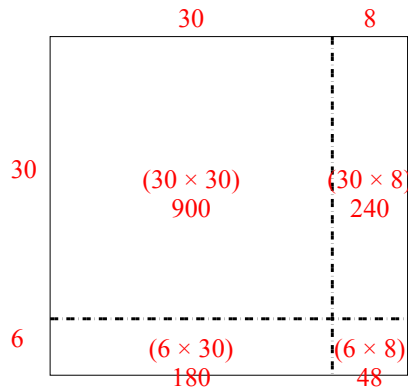


Utilisez les rectangles pour résoudre chaque problème.

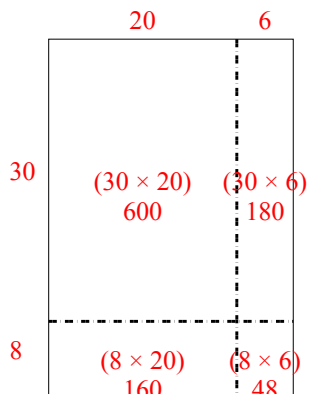
1)  $34 \times 38 =$



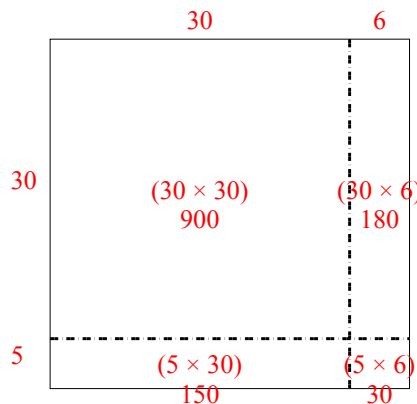
2)  $36 \times 38 =$



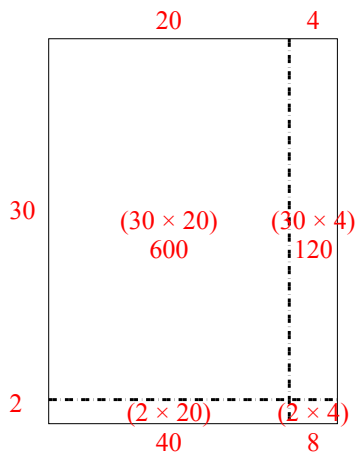
3)  $38 \times 26 =$



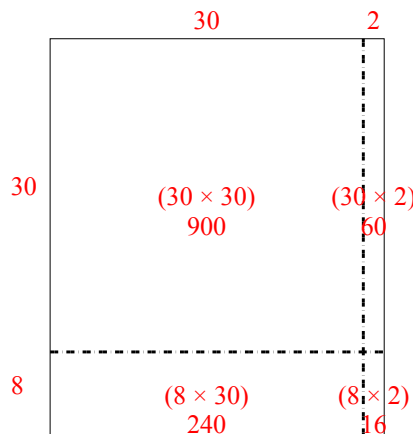
4)  $35 \times 36 =$



5)  $32 \times 24 =$



6)  $38 \times 32 =$



**Réponses**

1. 1 292
2. 1 368
3. 988
4. 1 260
5. 768
6. 1 216