





Utilisez les rectangles pour résoudre chaque problème.

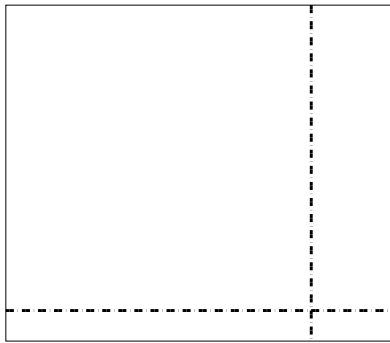
1)  $47 \times 44 =$




2)  $44 \times 47 =$




3)  $33 \times 38 =$




4)  $33 \times 24 =$



5)  $34 \times 18 =$



6)  $32 \times 24 =$



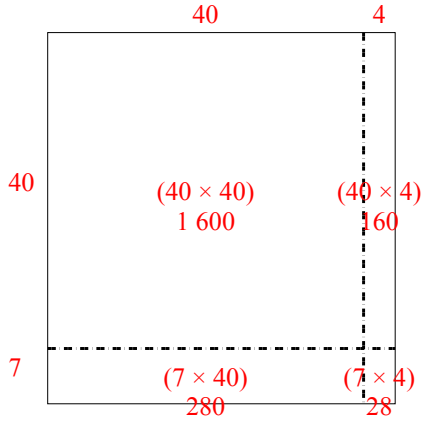
**Réponses**

- 1. \_\_\_\_\_
- 2. \_\_\_\_\_
- 3. \_\_\_\_\_
- 4. \_\_\_\_\_
- 5. \_\_\_\_\_
- 6. \_\_\_\_\_

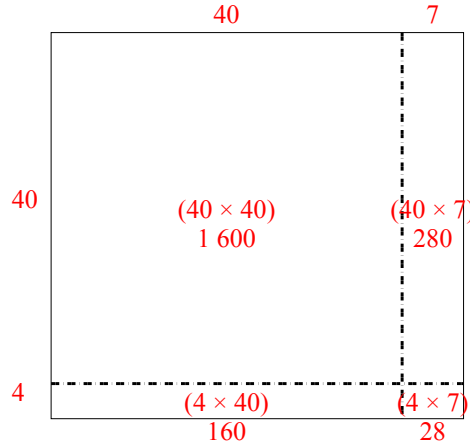


Utilisez les rectangles pour résoudre chaque problème.

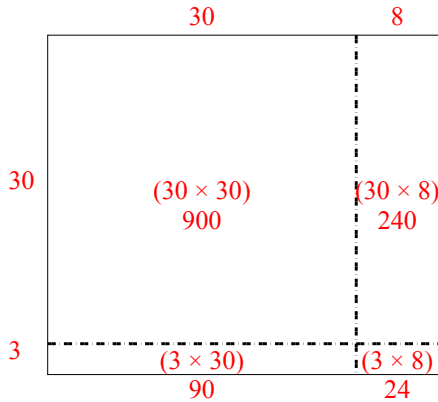
1)  $47 \times 44 =$



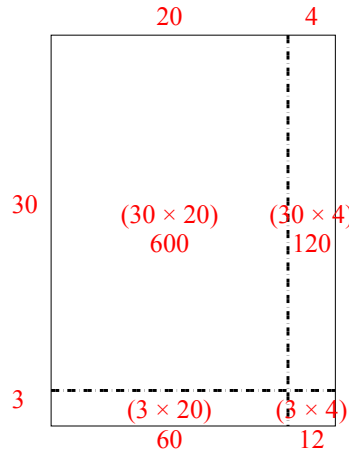
2)  $44 \times 47 =$



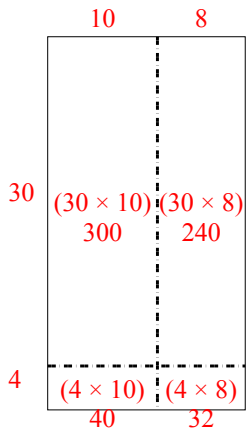
3)  $33 \times 38 =$



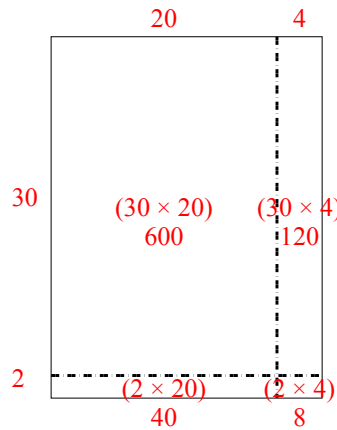
4)  $33 \times 24 =$



5)  $34 \times 18 =$



6)  $32 \times 24 =$



**Réponses**

1. 2 068
2. 2 068
3. 1 254
4. 792
5. 612
6. 768