





Utilisez les rectangles pour résoudre chaque problème.


1) $44 \times 32 =$




2) $36 \times 33 =$




3) $36 \times 16 =$




4) $34 \times 42 =$



5) $38 \times 34 =$



6) $34 \times 47 =$



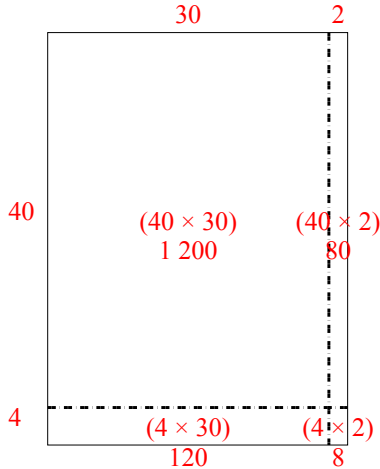
Réponses

- 1. _____
- 2. _____
- 3. _____
- 4. _____
- 5. _____
- 6. _____

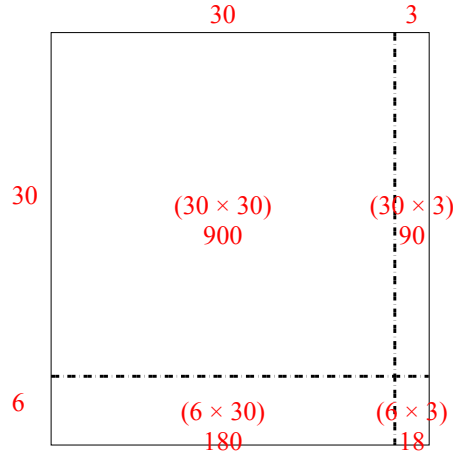


Utilisez les rectangles pour résoudre chaque problème.

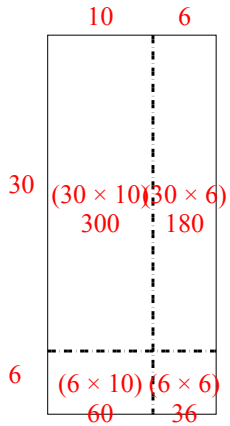
1) $44 \times 32 =$



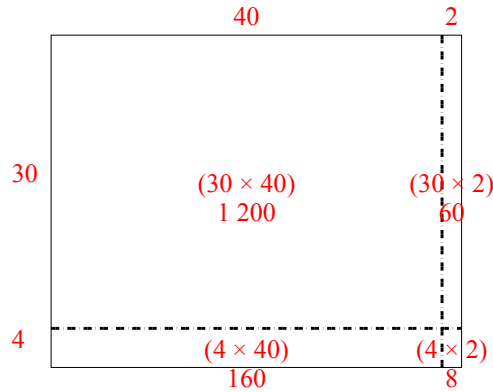
2) $36 \times 33 =$



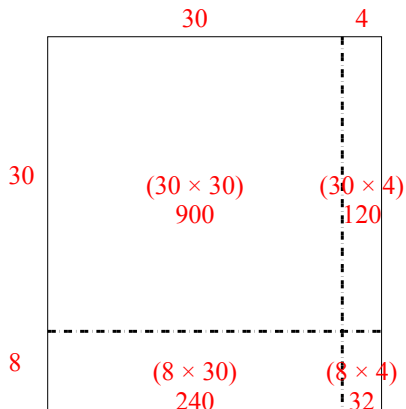
3) $36 \times 16 =$



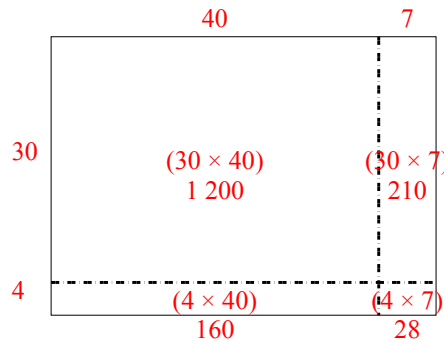
4) $34 \times 42 =$



5) $38 \times 34 =$



6) $34 \times 47 =$



Réponses

1. 1 408
2. 1 188
3. 576
4. 1 428
5. 1 292
6. 1 598