





Utilisez les rectangles pour résoudre chaque problème.


1)  $67 \times 75 =$



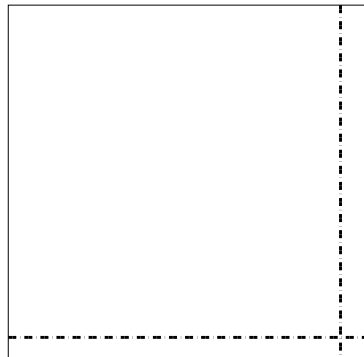
2)  $46 \times 27 =$



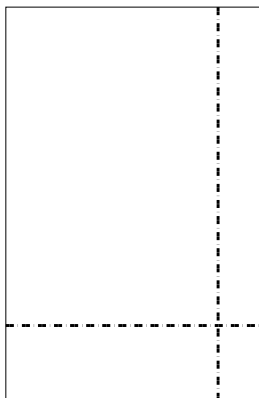
3)  $34 \times 32 =$




4)  $32 \times 33 =$



5)  $37 \times 24 =$



6)  $37 \times 15 =$



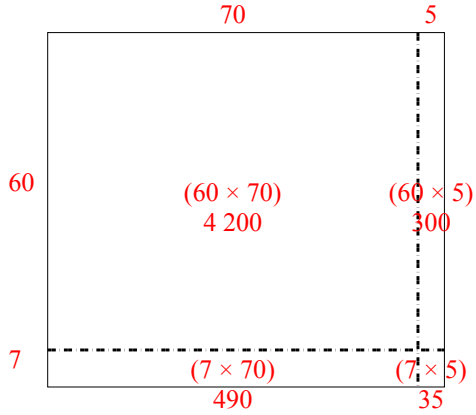
**Réponses**

- 1. \_\_\_\_\_
- 2. \_\_\_\_\_
- 3. \_\_\_\_\_
- 4. \_\_\_\_\_
- 5. \_\_\_\_\_
- 6. \_\_\_\_\_

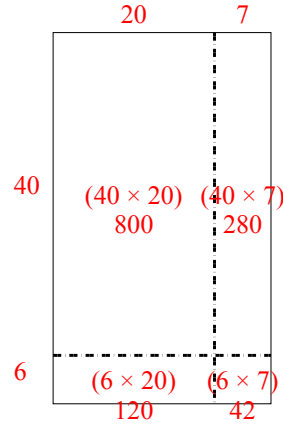


Utilisez les rectangles pour résoudre chaque problème.

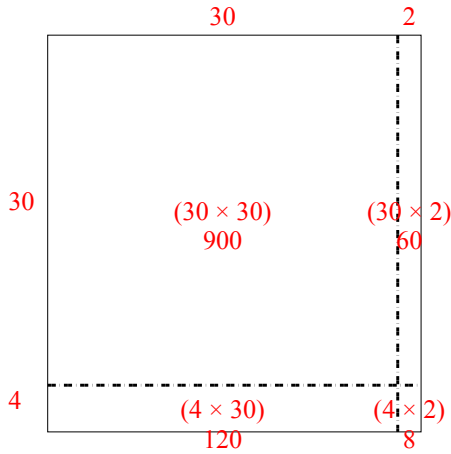
1)  $67 \times 75 =$



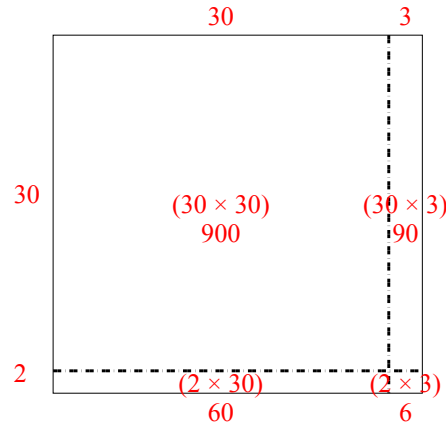
2)  $46 \times 27 =$



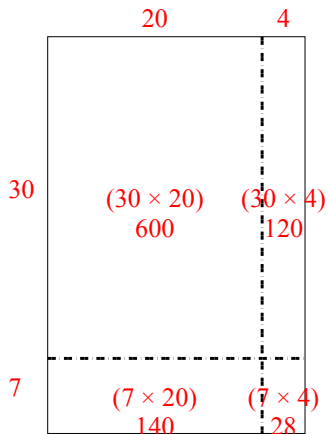
3)  $34 \times 32 =$



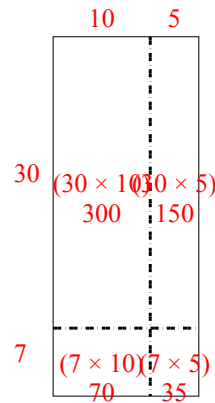
4)  $32 \times 33 =$



5)  $37 \times 24 =$



6)  $37 \times 15 =$



**Réponses**

1. 5 025
2. 1 242
3. 1 088
4. 1 056
5. 888
6. 555