





Utilisez les rectangles pour résoudre chaque problème.


1) $72 \times 76 =$




2) $34 \times 32 =$




3) $35 \times 24 =$




4) $37 \times 44 =$



5) $45 \times 46 =$



6) $34 \times 15 =$



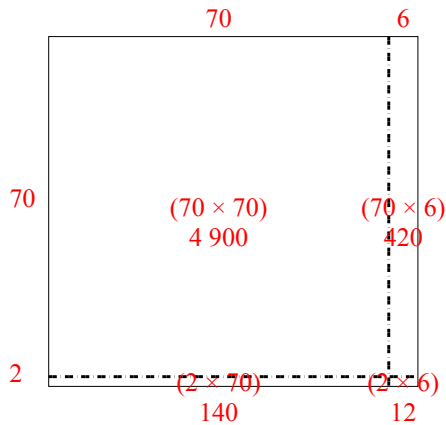
Réponses

- 1. _____
- 2. _____
- 3. _____
- 4. _____
- 5. _____
- 6. _____

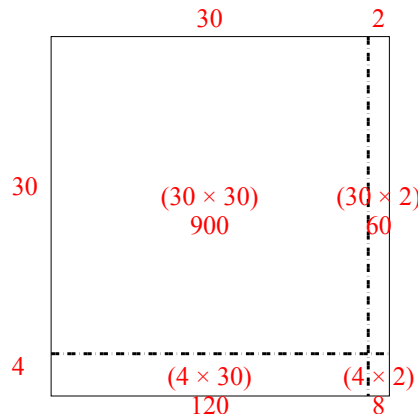


Utilisez les rectangles pour résoudre chaque problème.

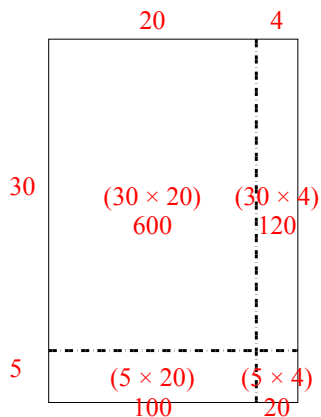
1) $72 \times 76 =$



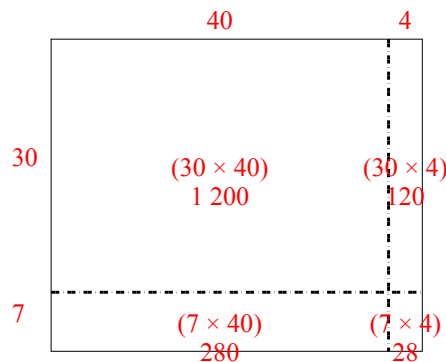
2) $34 \times 32 =$



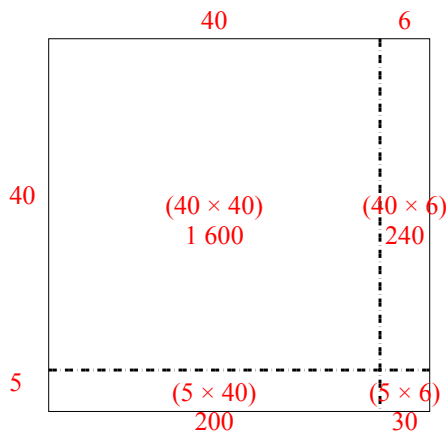
3) $35 \times 24 =$



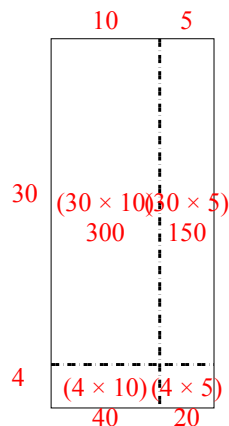
4) $37 \times 44 =$



5) $45 \times 46 =$



6) $34 \times 15 =$



Réponses

1. 5 472
2. 1 088
3. 840
4. 1 628
5. 2 070
6. 510