





Utilisez les rectangles pour résoudre chaque problème.


1)  $57 \times 56 =$



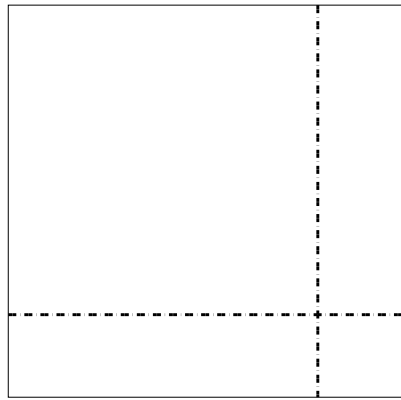
2)  $56 \times 34 =$




3)  $36 \times 15 =$




4)  $38 \times 39 =$



5)  $34 \times 49 =$



6)  $44 \times 36 =$



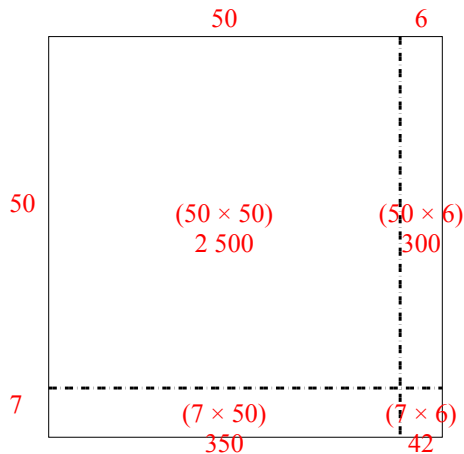
**Réponses**

- 1. \_\_\_\_\_
- 2. \_\_\_\_\_
- 3. \_\_\_\_\_
- 4. \_\_\_\_\_
- 5. \_\_\_\_\_
- 6. \_\_\_\_\_

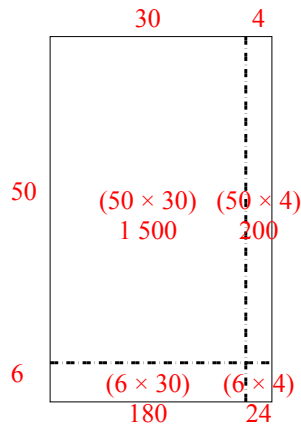


Utilisez les rectangles pour résoudre chaque problème.

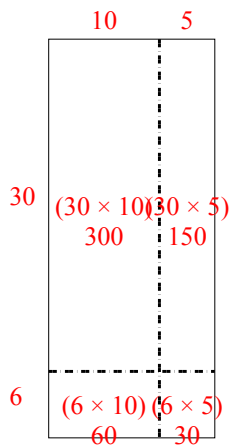
1)  $57 \times 56 =$



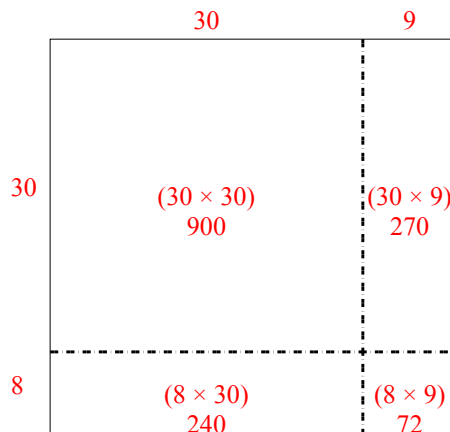
2)  $56 \times 34 =$



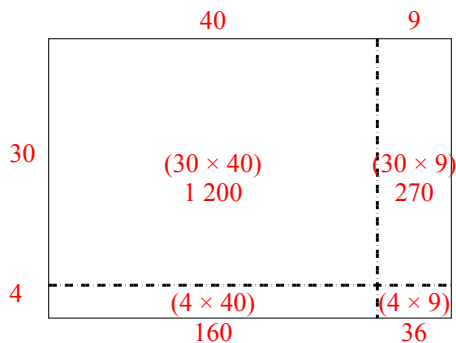
3)  $36 \times 15 =$



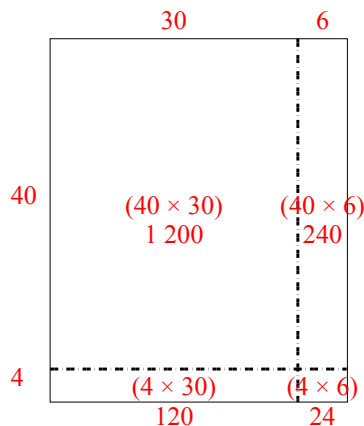
4)  $38 \times 39 =$



5)  $34 \times 49 =$



6)  $44 \times 36 =$



**Réponses**

1. 3 192
2. 1 904
3. 540
4. 1 482
5. 1 666
6. 1 584