





Utilisez les rectangles pour résoudre chaque problème.

1) $48 \times 30 =$




2) $23 \times 20 =$




3) $20 \times 21 =$




4) $20 \times 22 =$



5) $20 \times 29 =$



6) $26 \times 20 =$



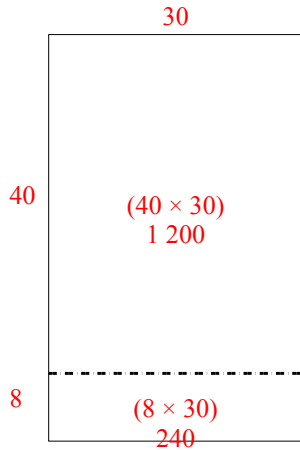
Réponses

- 1. _____
- 2. _____
- 3. _____
- 4. _____
- 5. _____
- 6. _____

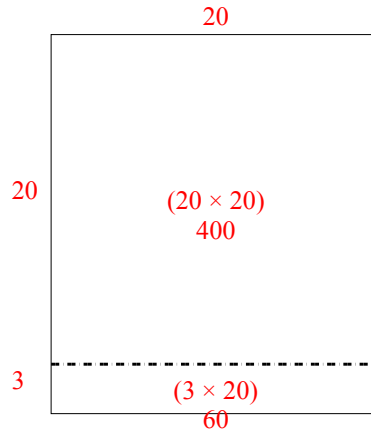


Utilisez les rectangles pour résoudre chaque problème.

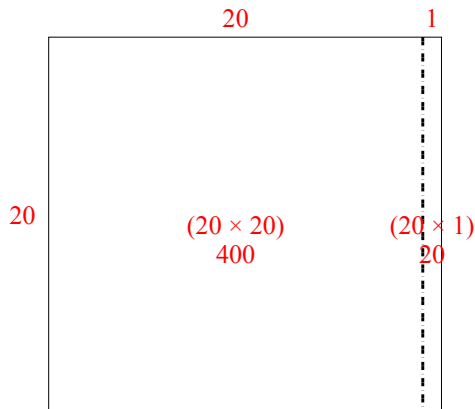
1) $48 \times 30 =$



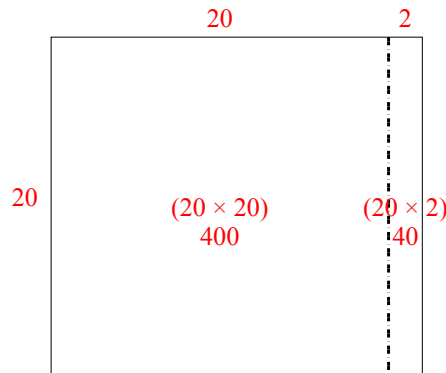
2) $23 \times 20 =$



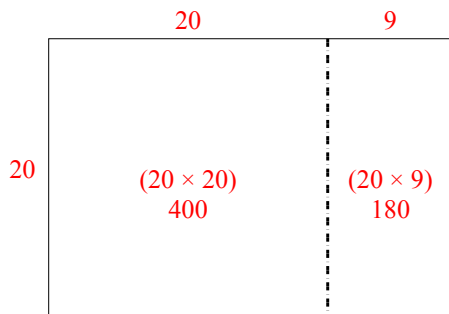
3) $20 \times 21 =$



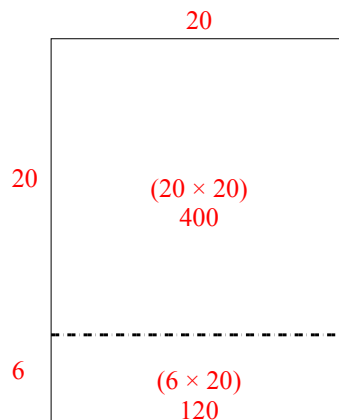
4) $20 \times 22 =$



5) $20 \times 29 =$



6) $26 \times 20 =$



Réponses

1. 1 440
2. 460
3. 420
4. 440
5. 580
6. 520