





Utilisez les rectangles pour résoudre chaque problème.


1) $46 \times 20 =$




2) $24 \times 40 =$




3) $32 \times 30 =$




4) $20 \times 22 =$



5) $20 \times 24 =$



6) $28 \times 20 =$



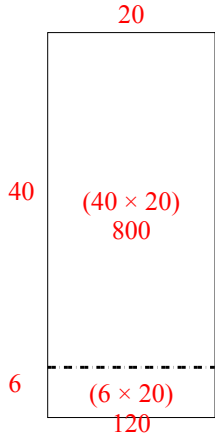
Réponses

- 1. _____
- 2. _____
- 3. _____
- 4. _____
- 5. _____
- 6. _____

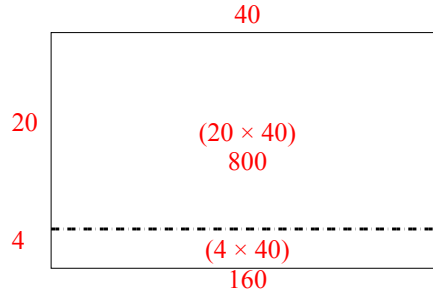


Utilisez les rectangles pour résoudre chaque problème.

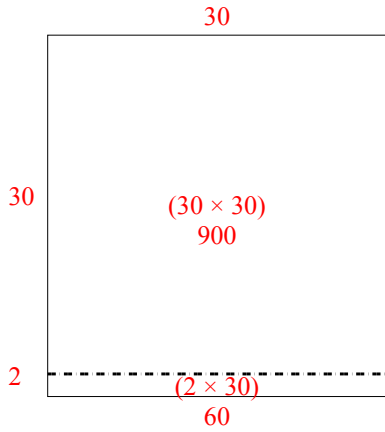
1) $46 \times 20 =$



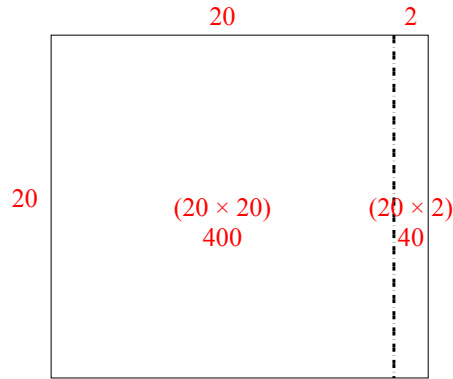
2) $24 \times 40 =$



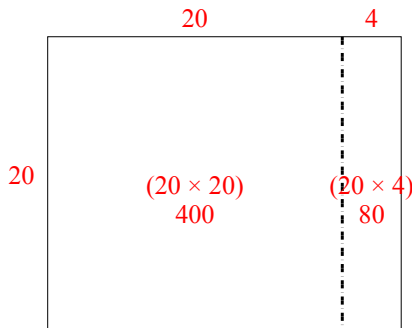
3) $32 \times 30 =$



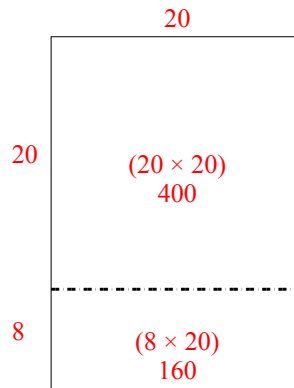
4) $20 \times 22 =$



5) $20 \times 24 =$



6) $28 \times 20 =$



Réponses

1. 920
2. 960
3. 960
4. 440
5. 480
6. 560