





Utilisez les rectangles pour résoudre chaque problème.


1)  $37 \times 20 =$




2)  $24 \times 20 =$




3)  $20 \times 22 =$




4)  $20 \times 24 =$



5)  $20 \times 28 =$



6)  $20 \times 23 =$



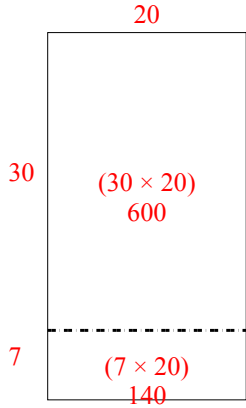
**Réponses**

- 1. \_\_\_\_\_
- 2. \_\_\_\_\_
- 3. \_\_\_\_\_
- 4. \_\_\_\_\_
- 5. \_\_\_\_\_
- 6. \_\_\_\_\_

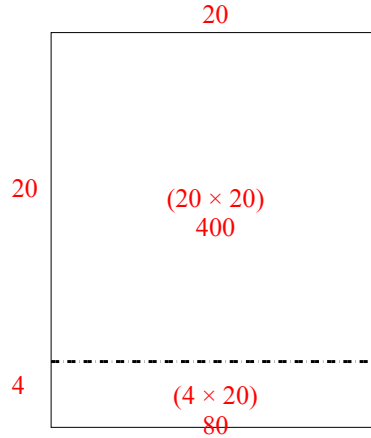


Utilisez les rectangles pour résoudre chaque problème.

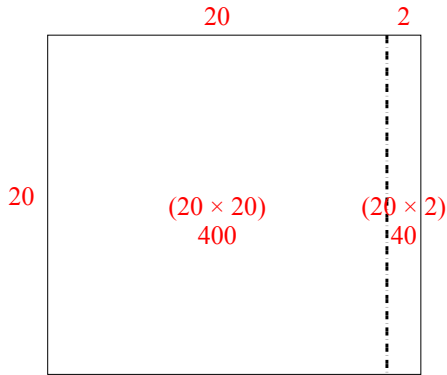
1)  $37 \times 20 =$



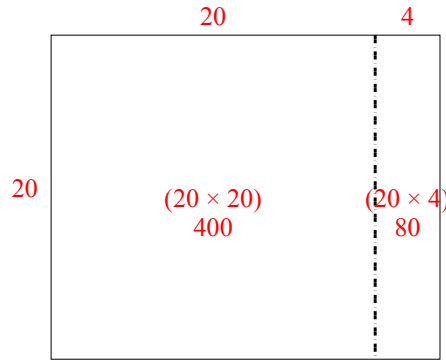
2)  $24 \times 20 =$



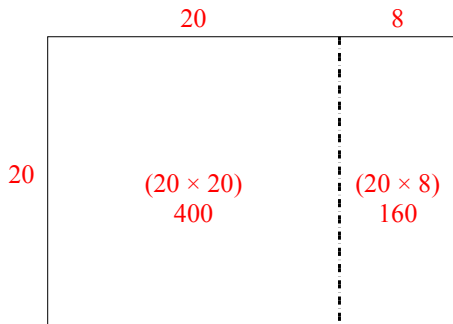
3)  $20 \times 22 =$



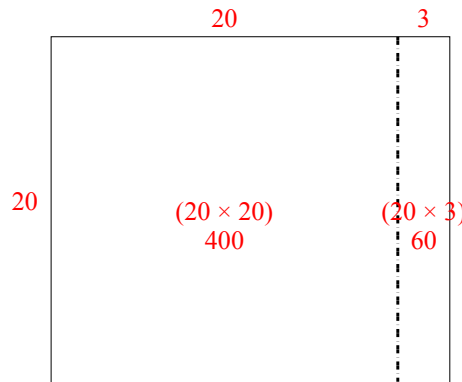
4)  $20 \times 24 =$



5)  $20 \times 28 =$



6)  $20 \times 23 =$



**Réponses**

1. 740
2. 480
3. 440
4. 480
5. 560
6. 460