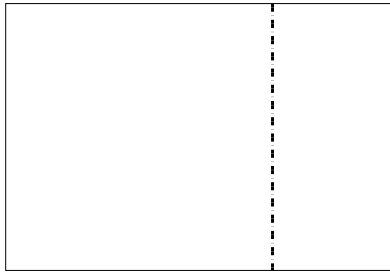





Utilisez les rectangles pour résoudre chaque problème.


1)  $20 \times 29 =$




2)  $20 \times 26 =$




3)  $29 \times 20 =$




4)  $20 \times 24 =$



5)  $22 \times 20 =$



6)  $20 \times 23 =$



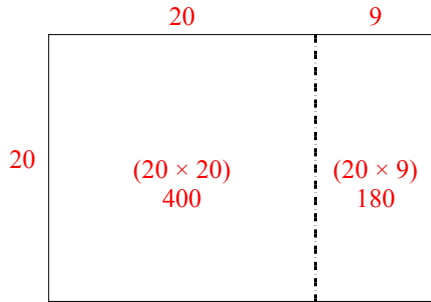
**Réponses**

1. \_\_\_\_\_
2. \_\_\_\_\_
3. \_\_\_\_\_
4. \_\_\_\_\_
5. \_\_\_\_\_
6. \_\_\_\_\_

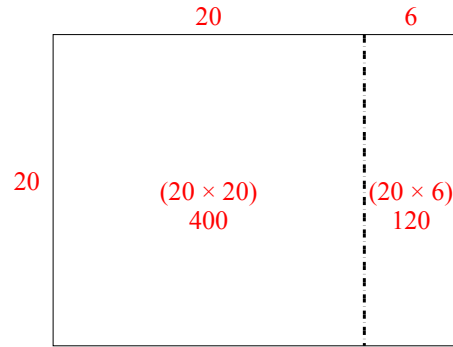


Utilisez les rectangles pour résoudre chaque problème.

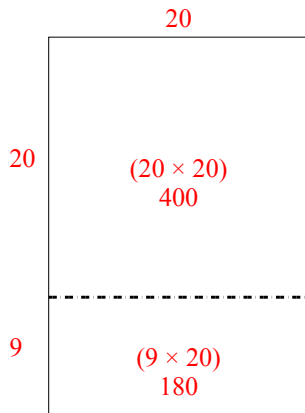
1)  $20 \times 29 =$



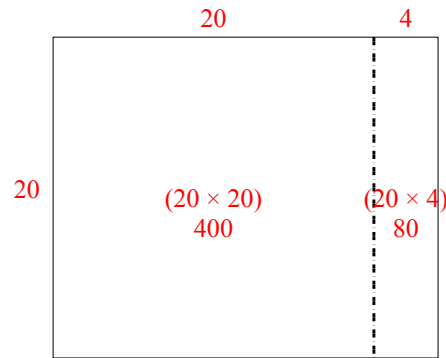
2)  $20 \times 26 =$



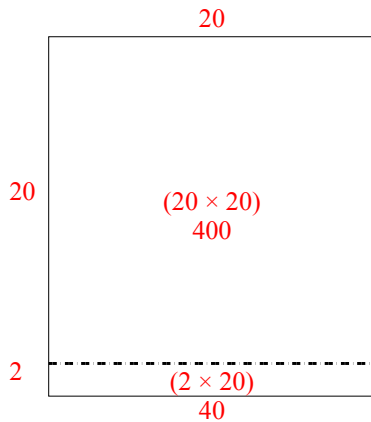
3)  $29 \times 20 =$



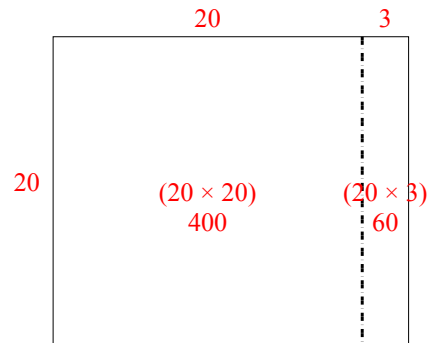
4)  $20 \times 24 =$



5)  $22 \times 20 =$



6)  $20 \times 23 =$



**Réponses**

1. 580

2. 520

3. 580

4. 480

5. 440

6. 460