





Utilisez les rectangles pour résoudre chaque problème.


1) $22 \times 20 =$




2) $21 \times 20 =$




3) $20 \times 26 =$




4) $20 \times 21 =$



5) $24 \times 20 =$



6) $25 \times 20 =$



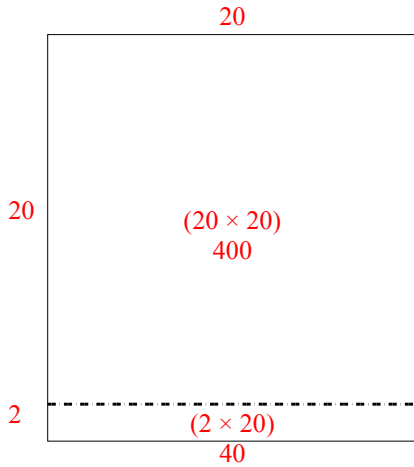
Réponses

1. _____
2. _____
3. _____
4. _____
5. _____
6. _____

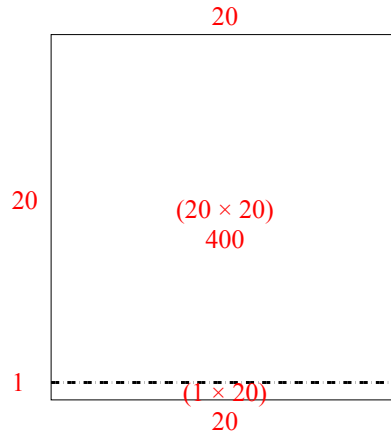


Utilisez les rectangles pour résoudre chaque problème.

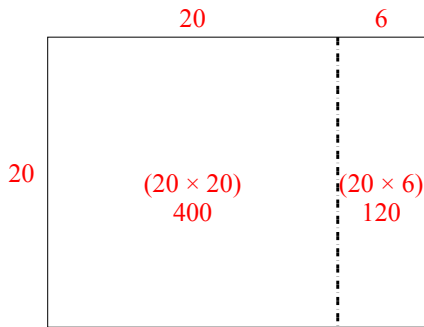
1) $22 \times 20 =$



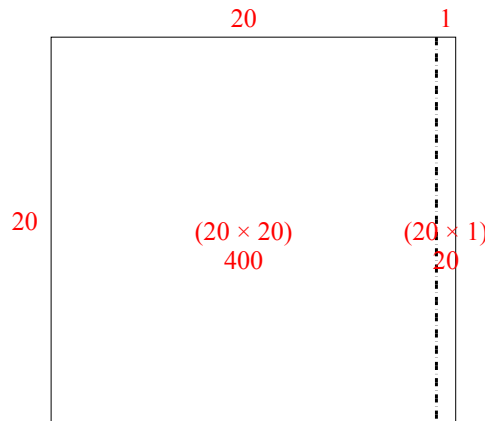
2) $21 \times 20 =$



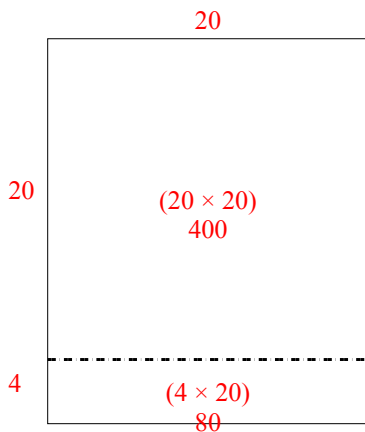
3) $20 \times 26 =$



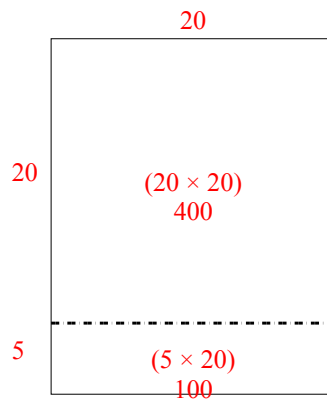
4) $20 \times 21 =$



5) $24 \times 20 =$



6) $25 \times 20 =$



Réponses

1. 440
2. 420
3. 520
4. 420
5. 480
6. 500