




Utilisez les rectangles pour résoudre chaque problème.


1)  $35 \times 30 =$




2)  $37 \times 20 =$




3)  $30 \times 21 =$




4)  $20 \times 25 =$



5)  $20 \times 22 =$



6)  $23 \times 20 =$



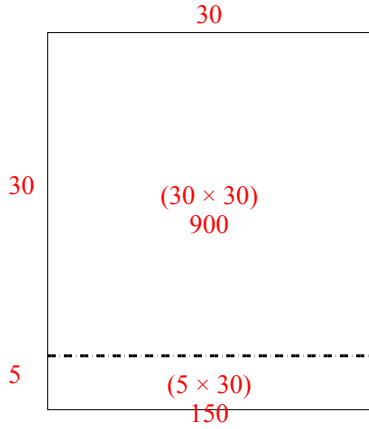
**Réponses**

- 1. \_\_\_\_\_
- 2. \_\_\_\_\_
- 3. \_\_\_\_\_
- 4. \_\_\_\_\_
- 5. \_\_\_\_\_
- 6. \_\_\_\_\_

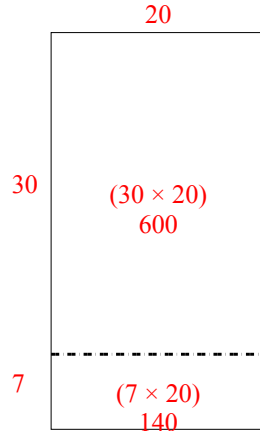


Utilisez les rectangles pour résoudre chaque problème.

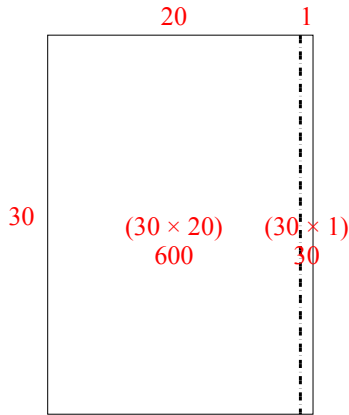
1)  $35 \times 30 =$



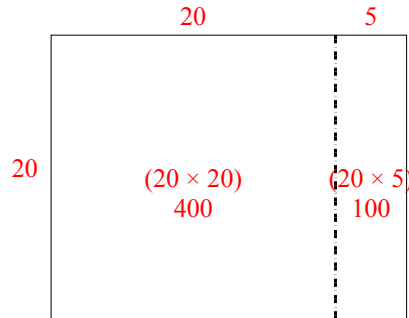
2)  $37 \times 20 =$



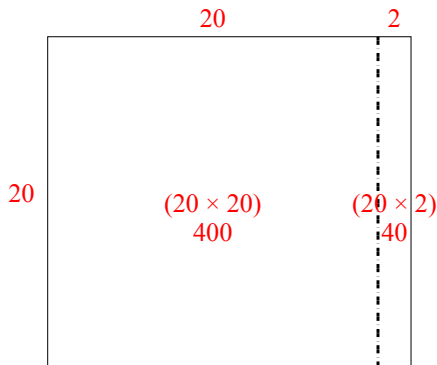
3)  $30 \times 21 =$



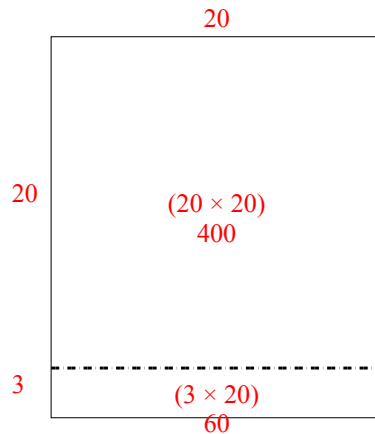
4)  $20 \times 25 =$



5)  $20 \times 22 =$



6)  $23 \times 20 =$



**Réponses**

1. 1 050
2. 740
3. 630
4. 500
5. 440
6. 460