




Utilisez les rectangles pour résoudre chaque problème.


1)  $20 \times 35 =$




2)  $21 \times 20 =$




3)  $20 \times 23 =$




4)  $22 \times 20 =$



5)  $29 \times 20 =$



6)  $20 \times 27 =$



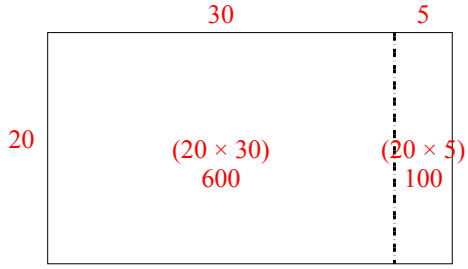
**Réponses**

- 1. \_\_\_\_\_
- 2. \_\_\_\_\_
- 3. \_\_\_\_\_
- 4. \_\_\_\_\_
- 5. \_\_\_\_\_
- 6. \_\_\_\_\_

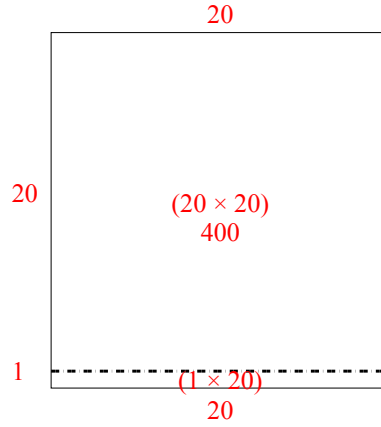


Utilisez les rectangles pour résoudre chaque problème.

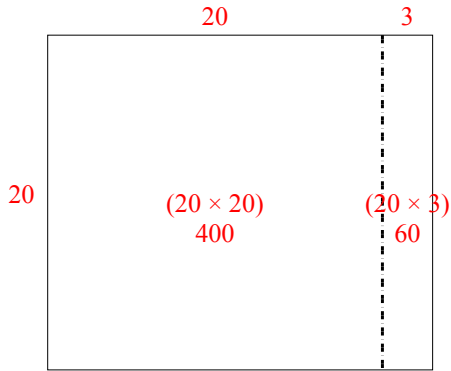
1)  $20 \times 35 =$



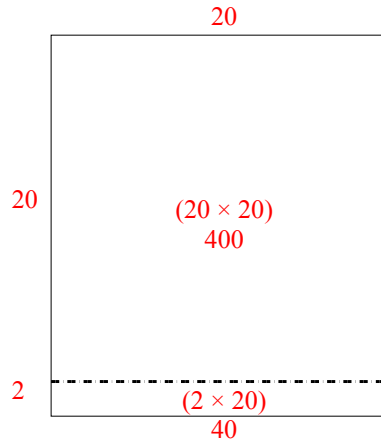
2)  $21 \times 20 =$



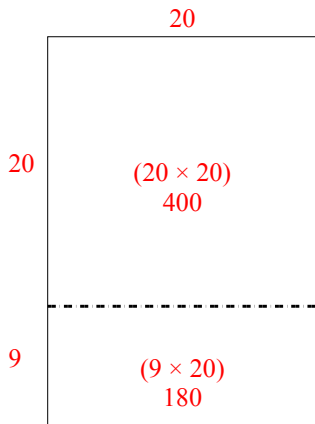
3)  $20 \times 23 =$



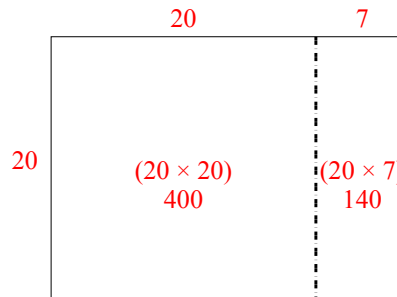
4)  $22 \times 20 =$



5)  $29 \times 20 =$



6)  $20 \times 27 =$



**Réponses**

1. 700
2. 420
3. 460
4. 440
5. 580
6. 540