





Utilisez les rectangles pour résoudre chaque problème.


1)  $22 \times 20 =$




2)  $23 \times 20 =$




3)  $29 \times 20 =$




4)  $20 \times 29 =$



5)  $20 \times 23 =$



6)  $20 \times 28 =$



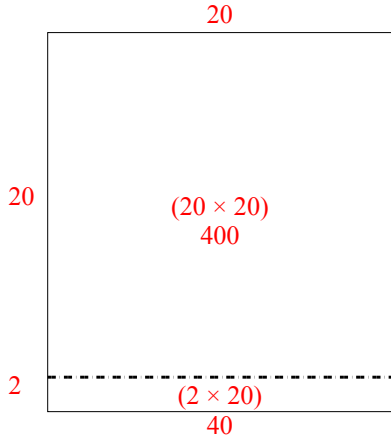
**Réponses**

1. \_\_\_\_\_
2. \_\_\_\_\_
3. \_\_\_\_\_
4. \_\_\_\_\_
5. \_\_\_\_\_
6. \_\_\_\_\_

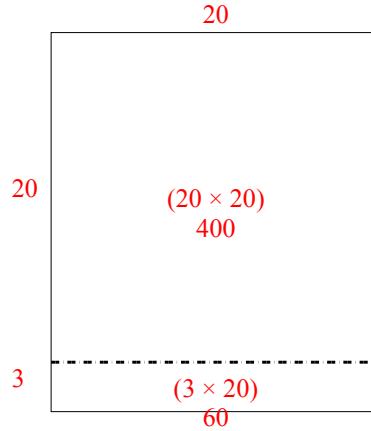


Utilisez les rectangles pour résoudre chaque problème.

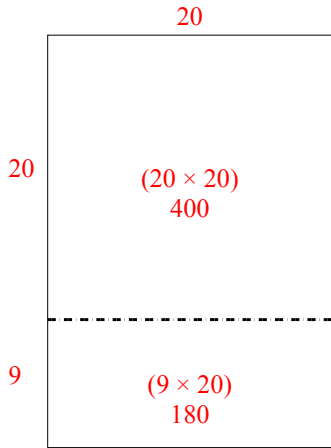
1)  $22 \times 20 =$



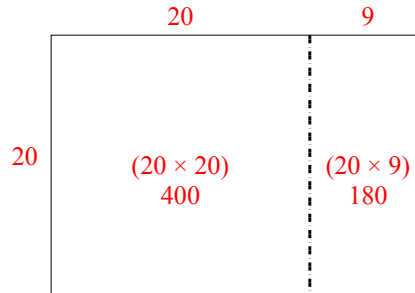
2)  $23 \times 20 =$



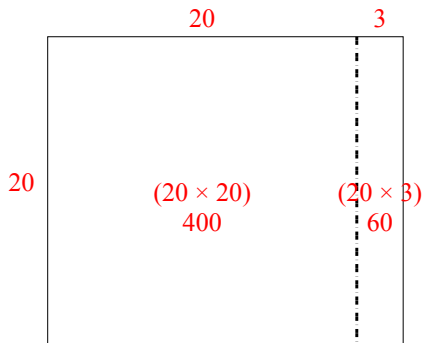
3)  $29 \times 20 =$



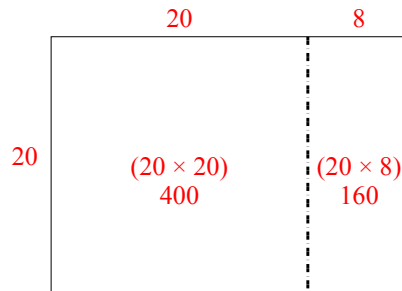
4)  $20 \times 29 =$



5)  $20 \times 23 =$



6)  $20 \times 28 =$



**Réponses**

1. 440
2. 460
3. 580
4. 580
5. 460
6. 560