





Utilisez les rectangles pour résoudre chaque problème.

1) $39 \times 20 =$




2) $20 \times 34 =$




3) $20 \times 21 =$




4) $20 \times 27 =$



5) $25 \times 20 =$



6) $27 \times 20 =$



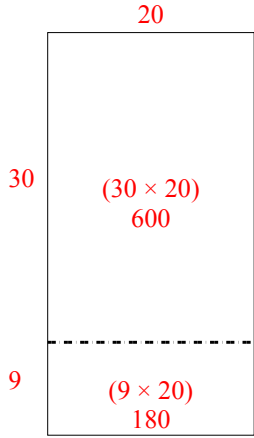
Réponses

- 1. _____
- 2. _____
- 3. _____
- 4. _____
- 5. _____
- 6. _____

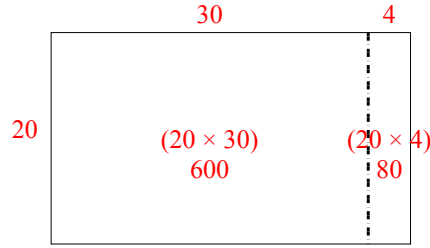


Utilisez les rectangles pour résoudre chaque problème.

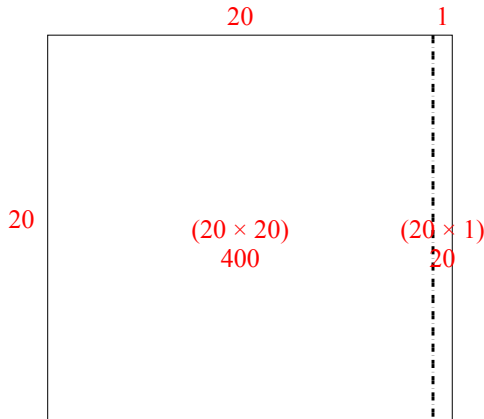
1) $39 \times 20 =$



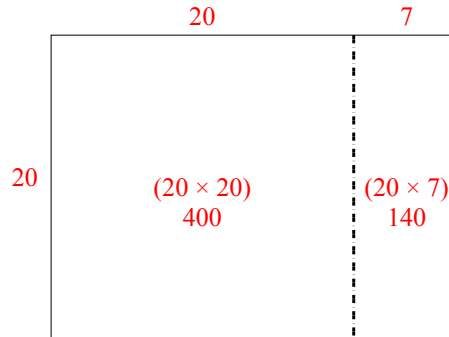
2) $20 \times 34 =$



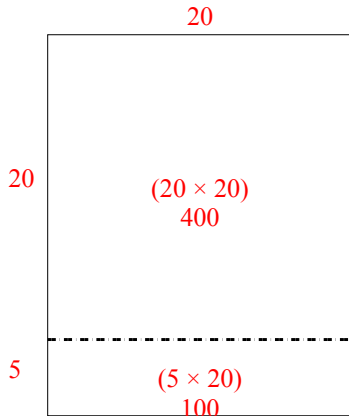
3) $20 \times 21 =$



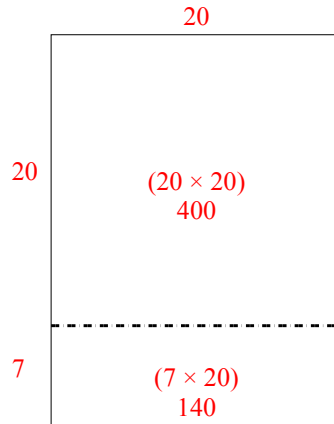
4) $20 \times 27 =$



5) $25 \times 20 =$



6) $27 \times 20 =$



Réponses

1. 780
2. 680
3. 420
4. 540
5. 500
6. 540