

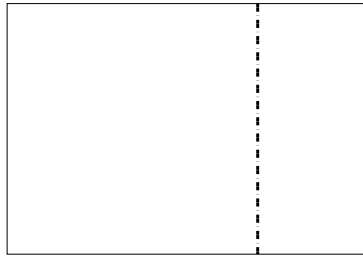


Utilisez les rectangles pour résoudre chaque problème.


1)  $20 \times 28 =$




2)  $20 \times 29 =$




3)  $21 \times 20 =$




4)  $24 \times 20 =$



5)  $20 \times 27 =$



6)  $20 \times 26 =$



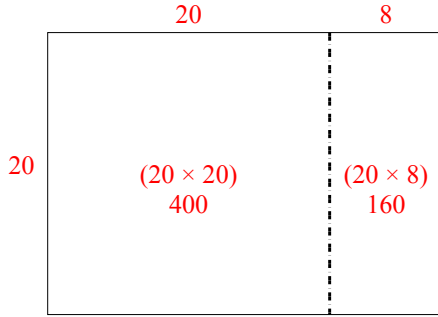
**Réponses**

- 1. \_\_\_\_\_
- 2. \_\_\_\_\_
- 3. \_\_\_\_\_
- 4. \_\_\_\_\_
- 5. \_\_\_\_\_
- 6. \_\_\_\_\_

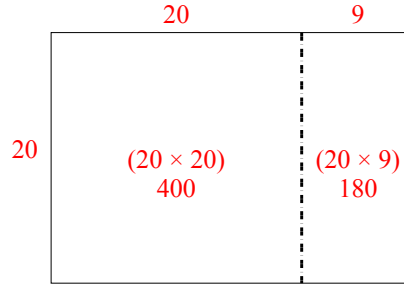


Utilisez les rectangles pour résoudre chaque problème.

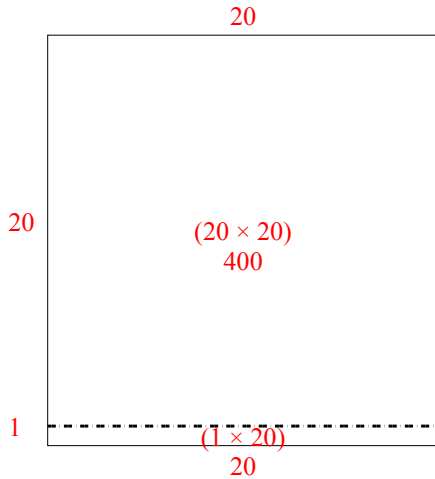
1)  $20 \times 28 =$



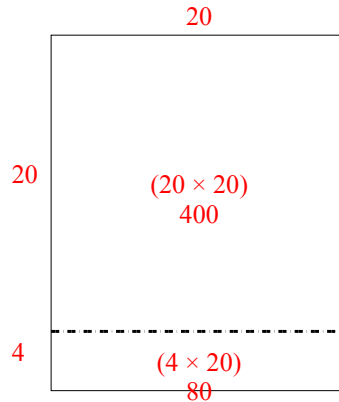
2)  $20 \times 29 =$



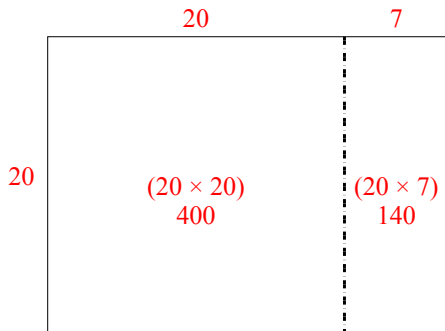
3)  $21 \times 20 =$



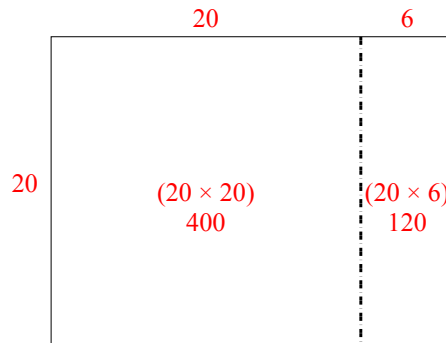
4)  $24 \times 20 =$



5)  $20 \times 27 =$



6)  $20 \times 26 =$



**Réponses**

1. 560
2. 580
3. 420
4. 480
5. 540
6. 520