

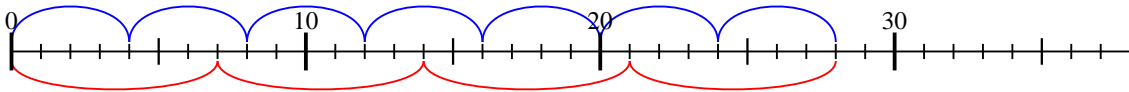


A l'aide de la droite numérique résoudre chaque problème.

Réponses

1) $4 \times 7 =$

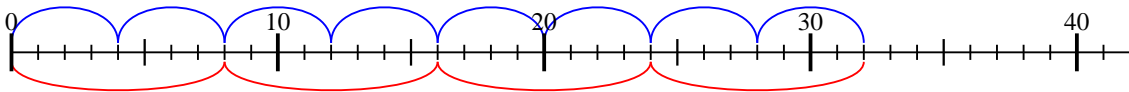
$7 \times 4 =$



1. 28

2) $4 \times 8 =$

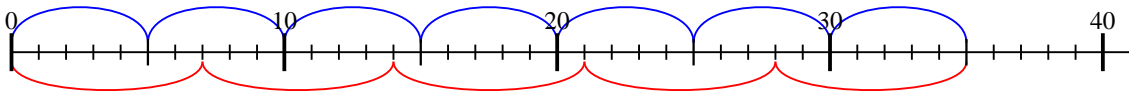
$8 \times 4 =$



2. 32

3) $5 \times 7 =$

$7 \times 5 =$

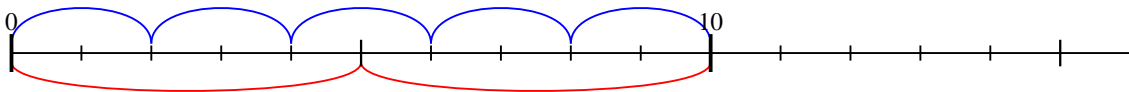


3. 35

4. 10

4) $2 \times 5 =$

$5 \times 2 =$

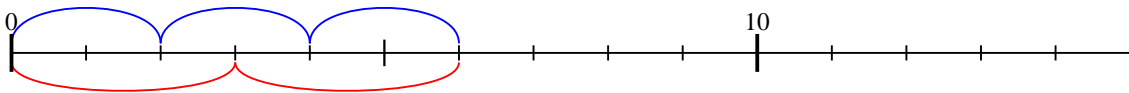


5. 6

6. 24

5) $2 \times 3 =$

$3 \times 2 =$

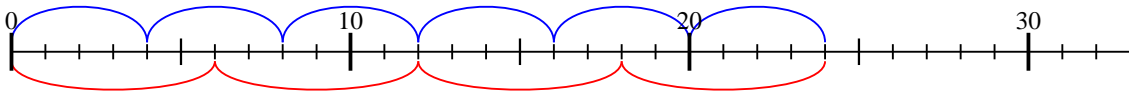


7. 40

8. 14

6) $4 \times 6 =$

$6 \times 4 =$

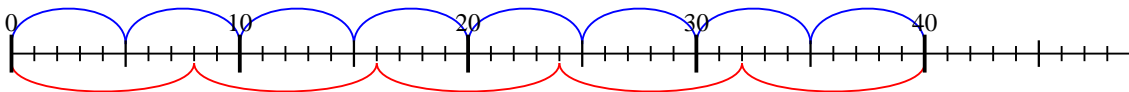


9. 16

10. 15

7) $5 \times 8 =$

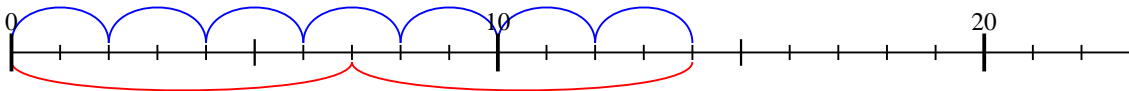
$8 \times 5 =$



11. 36

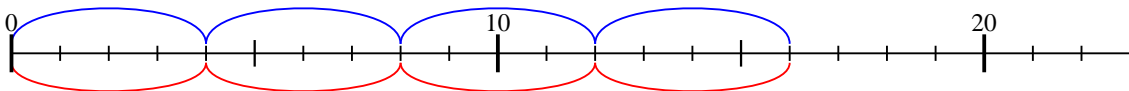
8) $2 \times 7 =$

$7 \times 2 =$



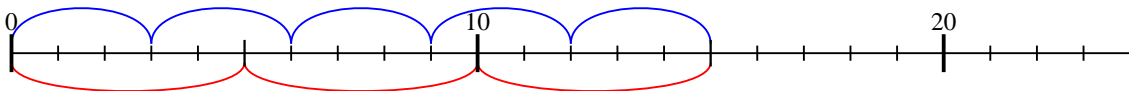
9) $4 \times 4 =$

$4 \times 4 =$



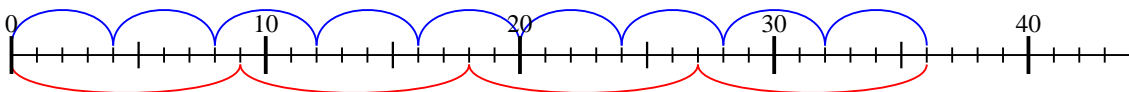
10) $3 \times 5 =$

$5 \times 3 =$



11) $4 \times 9 =$

$9 \times 4 =$



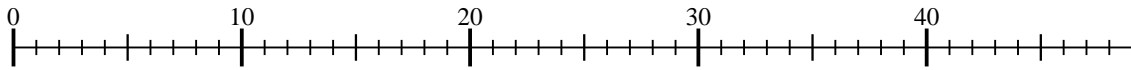


A l'aide de la droite numérique résoudre chaque problème.

Réponses

1) $5 \times 8 =$

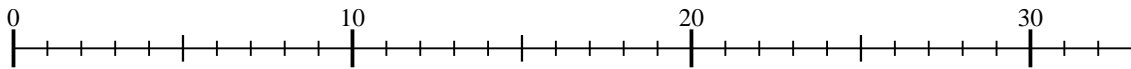
$8 \times 5 =$



1. _____

2) $5 \times 5 =$

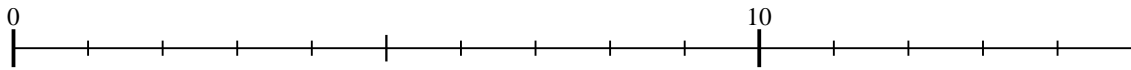
$5 \times 5 =$



2. _____

3) $3 \times 2 =$

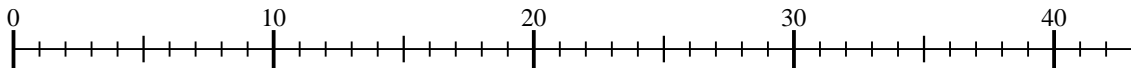
$2 \times 3 =$



4. _____

4) $5 \times 7 =$

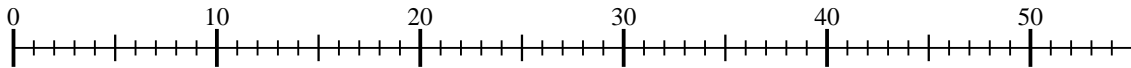
$7 \times 5 =$



6. _____

5) $5 \times 9 =$

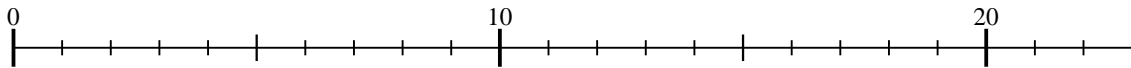
$9 \times 5 =$



7. _____

6) $2 \times 9 =$

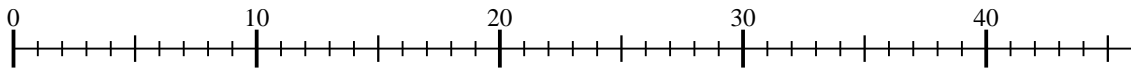
$9 \times 2 =$



9. _____

7) $4 \times 9 =$

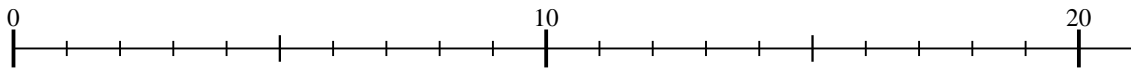
$9 \times 4 =$



10. _____

8) $2 \times 8 =$

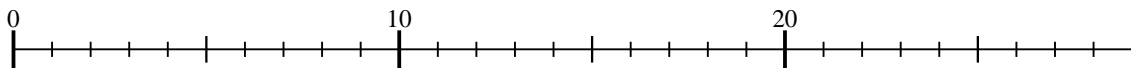
$8 \times 2 =$



11. _____

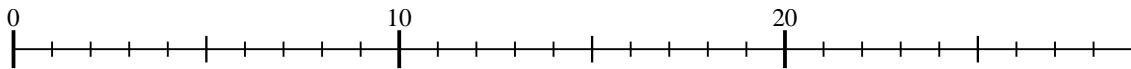
9) $5 \times 4 =$

$4 \times 5 =$



10) $3 \times 8 =$

$8 \times 3 =$



11) $5 \times 3 =$

$3 \times 5 =$

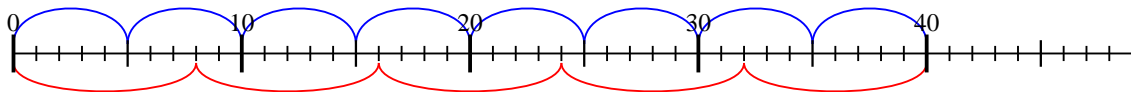




A l'aide de la droite numérique résoudre chaque problème.

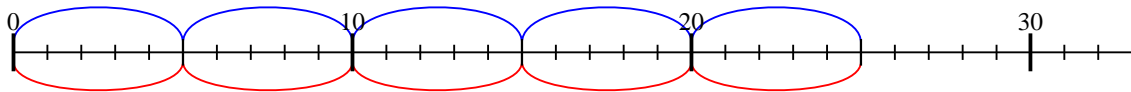
Réponses

1) $5 \times 8 =$
 $8 \times 5 =$



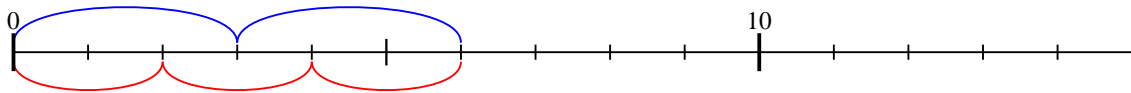
1. 40

2) $5 \times 5 =$
 $5 \times 5 =$



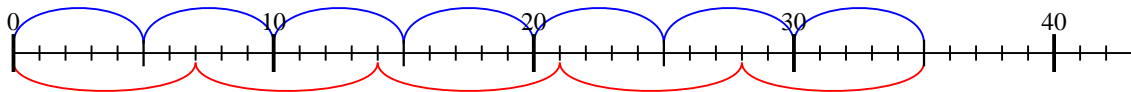
2. 25

3) $3 \times 2 =$
 $2 \times 3 =$



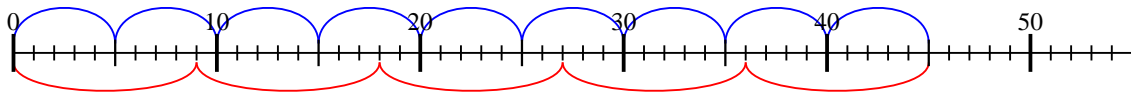
3. 6

4) $5 \times 7 =$
 $7 \times 5 =$



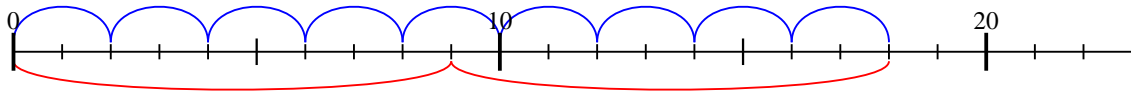
4. 35

5) $5 \times 9 =$
 $9 \times 5 =$



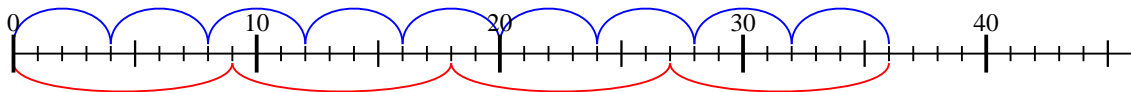
5. 45

6) $2 \times 9 =$
 $9 \times 2 =$



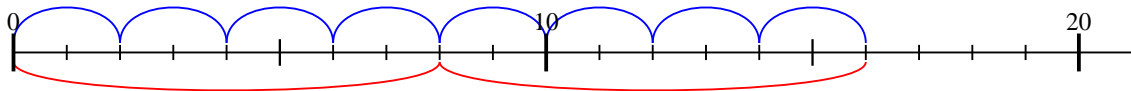
6. 18

7) $4 \times 9 =$
 $9 \times 4 =$



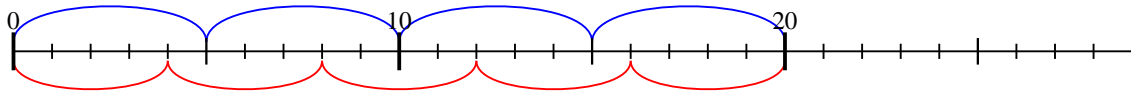
7. 36

8) $2 \times 8 =$
 $8 \times 2 =$



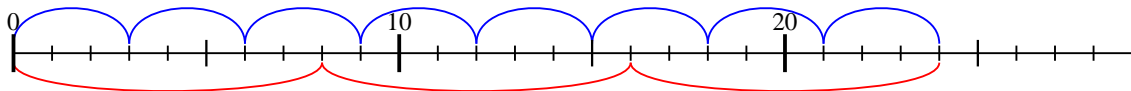
8. 16

9) $5 \times 4 =$
 $4 \times 5 =$



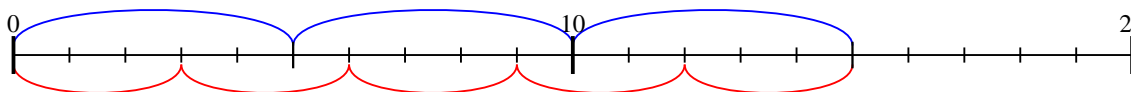
9. 20

10) $3 \times 8 =$
 $8 \times 3 =$



10. 24

11) $5 \times 3 =$
 $3 \times 5 =$



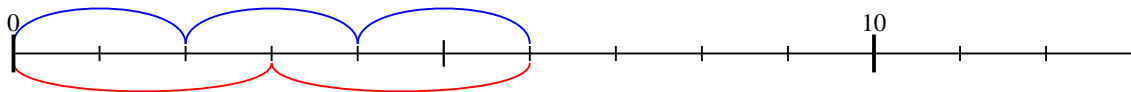
11. 15



A l'aide de la droite numérique résoudre chaque problème.

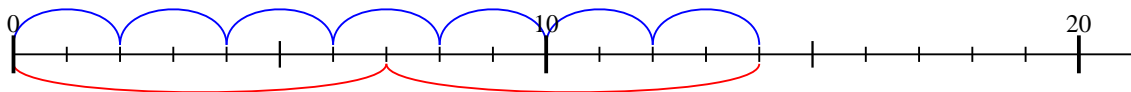
Réponses

1) $2 \times 3 =$
 $3 \times 2 =$



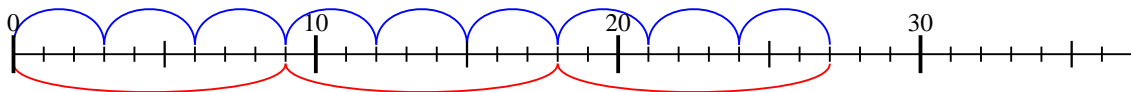
1. 6

2) $2 \times 7 =$
 $7 \times 2 =$



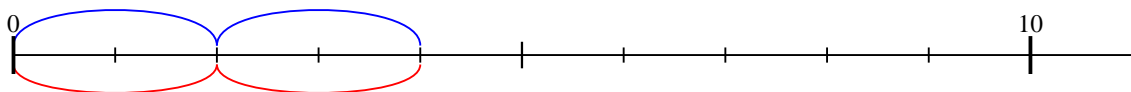
2. 14

3) $3 \times 9 =$
 $9 \times 3 =$



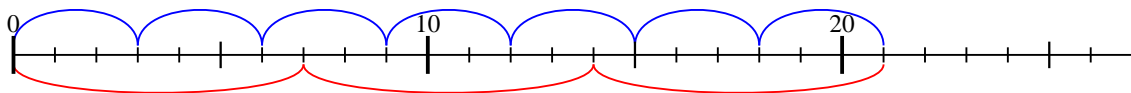
3. 27

4) $2 \times 2 =$
 $2 \times 2 =$



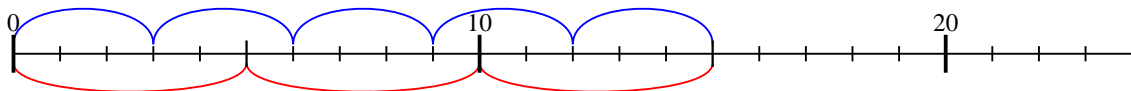
4. 4

5) $3 \times 7 =$
 $7 \times 3 =$



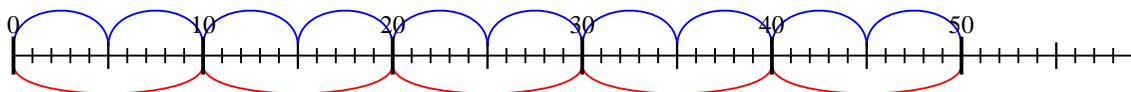
5. 21

6) $3 \times 5 =$
 $5 \times 3 =$



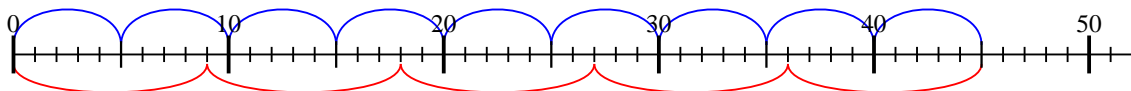
6. 15

7) $5 \times 10 =$
 $10 \times 5 =$



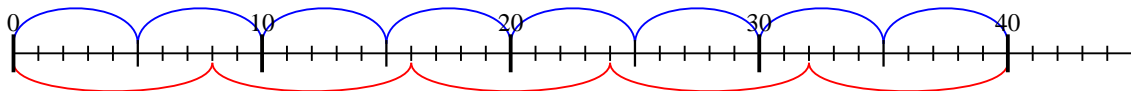
7. 50

8) $5 \times 9 =$
 $9 \times 5 =$



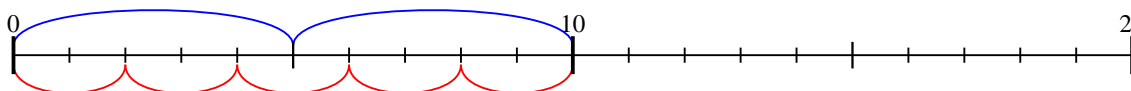
8. 45

9) $5 \times 8 =$
 $8 \times 5 =$



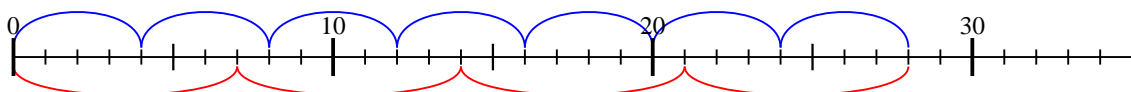
9. 40

10) $5 \times 2 =$
 $2 \times 5 =$



10. 10

11) $4 \times 7 =$
 $7 \times 4 =$



11. 28