

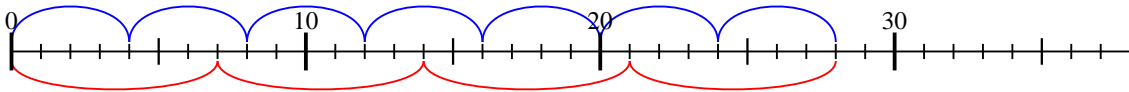


A l'aide de la droite numérique résoudre chaque problème.

Réponses

1) $4 \times 7 =$

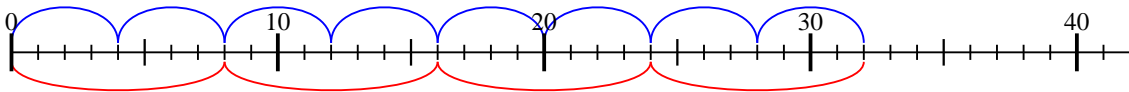
$7 \times 4 =$



1. 28

2) $4 \times 8 =$

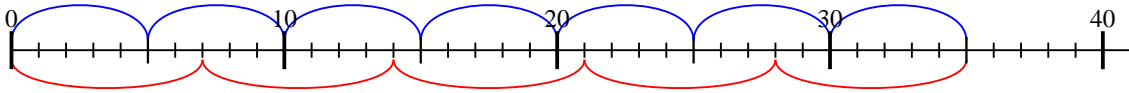
$8 \times 4 =$



2. 32

3) $5 \times 7 =$

$7 \times 5 =$

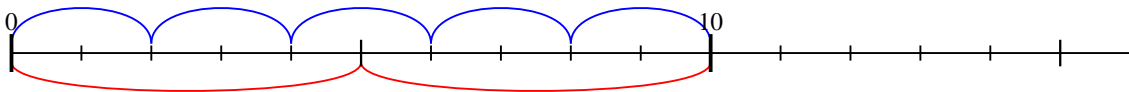


3. 35

4. 10

4) $2 \times 5 =$

$5 \times 2 =$

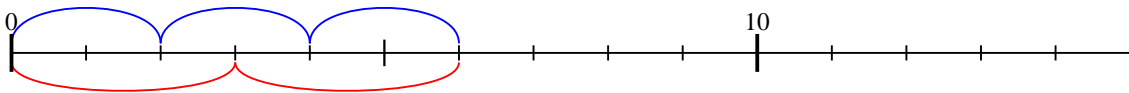


5. 6

6. 24

5) $2 \times 3 =$

$3 \times 2 =$

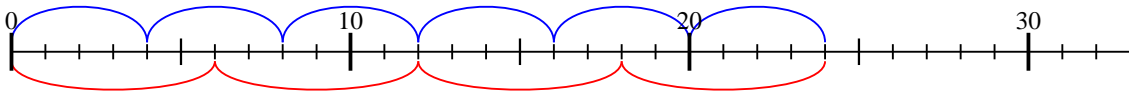


7. 40

8. 14

6) $4 \times 6 =$

$6 \times 4 =$

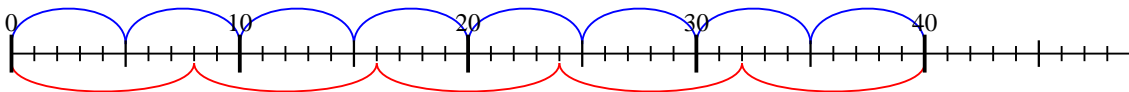


9. 16

10. 15

7) $5 \times 8 =$

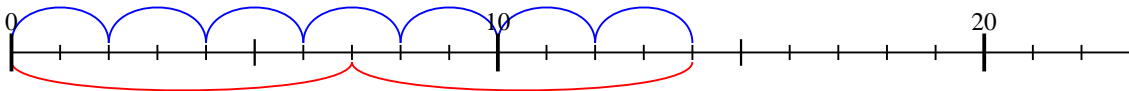
$8 \times 5 =$



11. 36

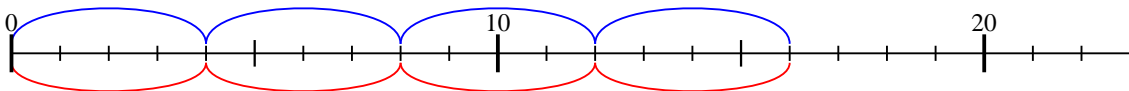
8) $2 \times 7 =$

$7 \times 2 =$



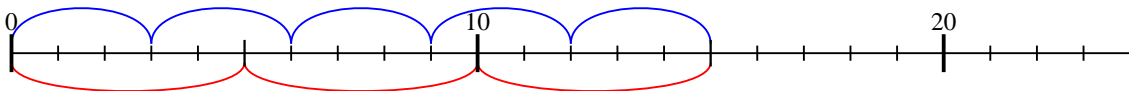
9) $4 \times 4 =$

$4 \times 4 =$



10) $3 \times 5 =$

$5 \times 3 =$



11) $4 \times 9 =$

$9 \times 4 =$

