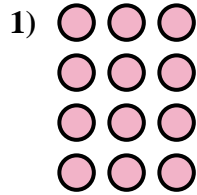
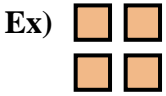




Ecrivez l'équation qui représente la matrice et enfin trouvez le nombre de figures.



Réponses

Ex. 2 × 2 = 4

1. _____

2. _____

3. _____

4. _____

5. _____

6. _____

7. _____

8. _____

9. _____



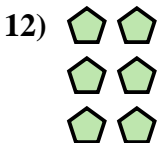


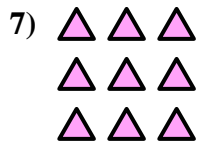



10. _____

11. _____

12. _____

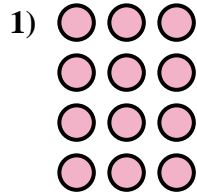
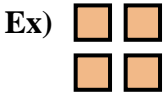
13. _____

14. _____





Ecrivez l'équation qui représente la matrice et enfin trouvez le nombre de figures.



Réponses

Ex. 2 × 2 = 4

1. 4 × 3 = 12

2. 2 × 3 = 6

3. 3 × 4 = 12

4. 5 × 5 = 25

5. 5 × 2 = 10

6. 4 × 5 = 20

7. 3 × 3 = 9

8. 2 × 5 = 10

9. 5 × 3 = 15

10. 2 × 4 = 8

11. 3 × 5 = 15

12. 3 × 2 = 6

13. 5 × 4 = 20

14. 4 × 4 = 16

