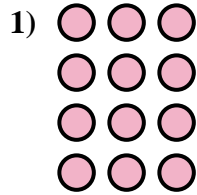
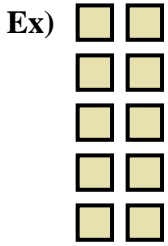




Ecrivez l'équation qui représente la matrice et enfin trouvez le nombre de figures.



**Réponses**

Ex. 5 × 2 = 10

1. \_\_\_\_\_

2. \_\_\_\_\_

3. \_\_\_\_\_

4. \_\_\_\_\_

5. \_\_\_\_\_

6. \_\_\_\_\_

7. \_\_\_\_\_

8. \_\_\_\_\_

9. \_\_\_\_\_

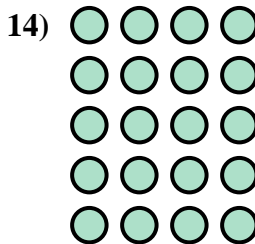
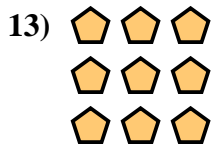
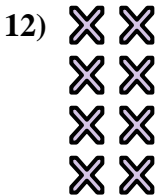
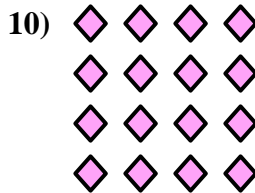

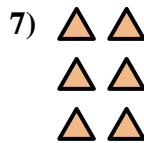



10. \_\_\_\_\_

11. \_\_\_\_\_

12. \_\_\_\_\_

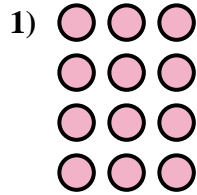
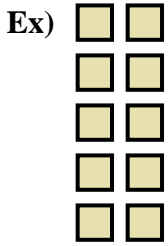
13. \_\_\_\_\_

14. \_\_\_\_\_





Ecrivez l'équation qui représente la matrice et enfin trouvez le nombre de figures.

**Réponses**

Ex.  $5 \times 2 = 10$

1.  $4 \times 3 = 12$

2.  $2 \times 2 = 4$

3.  $4 \times 5 = 20$

4.  $3 \times 5 = 15$

5.  $5 \times 5 = 25$

6.  $2 \times 4 = 8$

7.  $3 \times 2 = 6$

8.  $2 \times 5 = 10$

9.  $5 \times 3 = 15$

10.  $4 \times 4 = 16$

11.  $2 \times 3 = 6$

12.  $4 \times 2 = 8$

13.  $3 \times 3 = 9$

14.  $5 \times 4 = 20$

