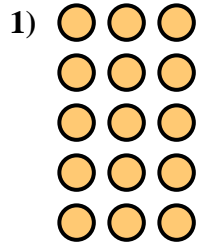
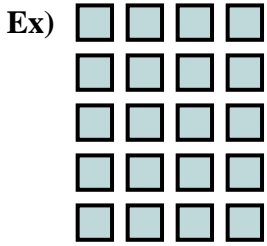




Ecrivez l'équation qui représente la matrice et enfin trouvez le nombre de figures.



Réponses

Ex. 5 × 4 = 20

1. _____

2. _____

3. _____

4. _____

5. _____

6. _____

7. _____

8. _____

9. _____

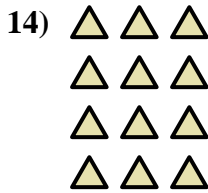

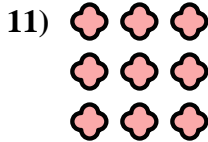
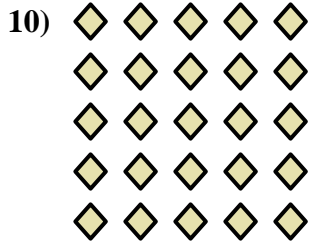




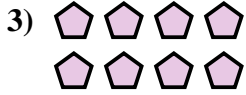
10. _____

11. _____

12. _____

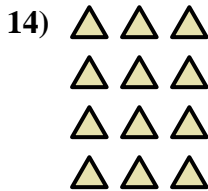

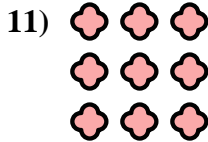
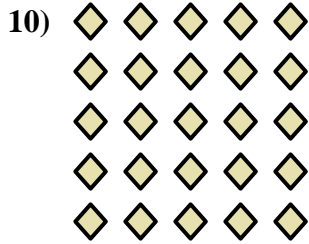


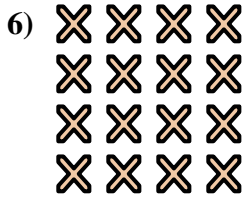
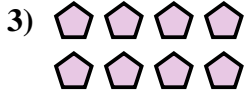
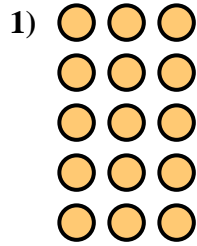
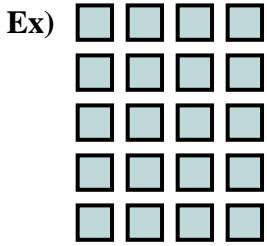
13. _____

14. _____





Ecrivez l'équation qui représente la matrice et enfin trouvez le nombre de figures.

**Réponses**

Ex. $5 \times 4 = 20$

1. $5 \times 3 = 15$

2. $2 \times 3 = 6$

3. $2 \times 4 = 8$

4. $2 \times 2 = 4$

5. $2 \times 5 = 10$

6. $4 \times 4 = 16$

7. $4 \times 5 = 20$

8. $3 \times 5 = 15$

9. $3 \times 2 = 6$

10. $5 \times 5 = 25$

11. $3 \times 3 = 9$

12. $3 \times 4 = 12$

13. $5 \times 2 = 10$

14. $4 \times 3 = 12$