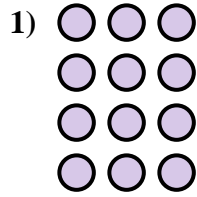





Ecrivez l'équation qui représente la matrice et enfin trouvez le nombre de figures.



Réponses

Ex. 4 × 5 = 20

1. _____

2. _____

3. _____

4. _____

5. _____

6. _____

7. _____

8. _____

9. _____

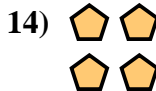
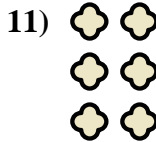

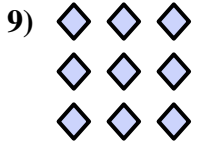



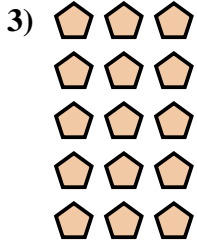
10. _____

11. _____

12. _____

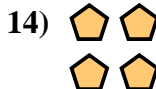

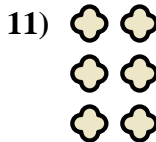

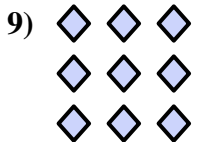



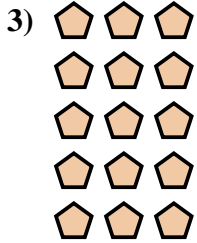
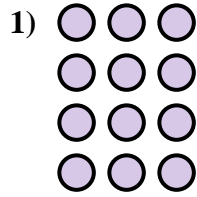

13. _____

14. _____





Ecrivez l'équation qui représente la matrice et enfin trouvez le nombre de figures.

**Réponses**

Ex. $4 \times 5 = 20$

1. $4 \times 3 = 12$

2. $5 \times 5 = 25$

3. $5 \times 3 = 15$

4. $4 \times 2 = 8$

5. $3 \times 5 = 15$

6. $2 \times 4 = 8$

7. $3 \times 4 = 12$

8. $5 \times 2 = 10$

9. $3 \times 3 = 9$

10. $2 \times 5 = 10$

11. $3 \times 2 = 6$

12. $2 \times 3 = 6$

13. $5 \times 4 = 20$

14. $2 \times 2 = 4$