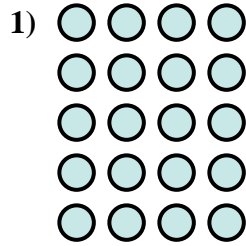
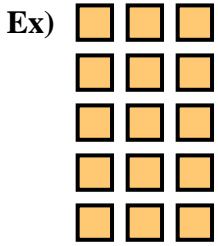




Ecrivez l'équation qui représente la matrice et enfin trouvez le nombre de figures.



Réponses

Ex. 5 × 3 = 15

1. _____

2. _____

3. _____

4. _____

5. _____

6. _____

7. _____

8. _____

9. _____


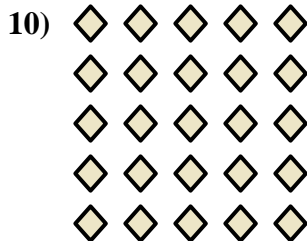




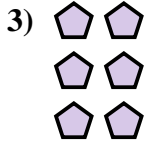
10. _____

11. _____

12. _____

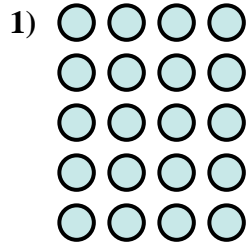
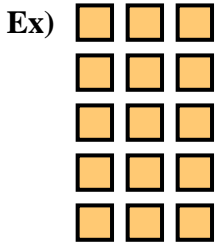
13. _____

14. _____





Ecrivez l'équation qui représente la matrice et enfin trouvez le nombre de figures.



Réponses

Ex. $5 \times 3 = 15$

1. $5 \times 4 = 20$

2. $5 \times 2 = 10$

3. $3 \times 2 = 6$

4. $3 \times 3 = 9$

5. $2 \times 3 = 6$

6. $2 \times 4 = 8$

7. $4 \times 2 = 8$

8. $3 \times 4 = 12$

9. $4 \times 5 = 20$

10. $5 \times 5 = 25$

11. $2 \times 5 = 10$

12. $2 \times 2 = 4$

13. $4 \times 4 = 16$

14. $3 \times 5 = 15$

