
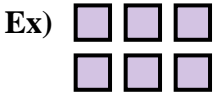




Ecrivez l'équation qui représente la matrice et enfin trouvez le nombre de figures.



Réponses

Ex. $2 \times 3 = 6$

1. _____

2. _____

3. _____

4. _____

5. _____

6. _____

7. _____

8. _____

9. _____


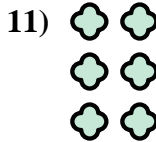



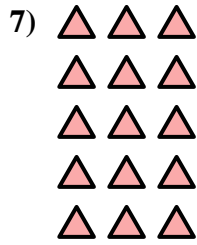



10. _____

11. _____

12. _____


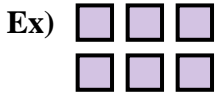
13. _____

14. _____





Ecrivez l'équation qui représente la matrice et enfin trouvez le nombre de figures.



Réponses

Ex. 2 × 3 = 6

1. 2 × 5 = 10

2. 4 × 2 = 8

3. 3 × 4 = 12

4. 4 × 4 = 16

5. 2 × 4 = 8

6. 5 × 4 = 20

7. 5 × 3 = 15

8. 5 × 5 = 25

9. 5 × 2 = 10

10. 4 × 5 = 20

11. 3 × 2 = 6

12. 2 × 2 = 4

13. 3 × 5 = 15

14. 4 × 3 = 12

