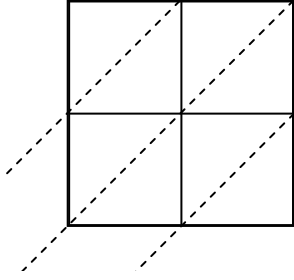


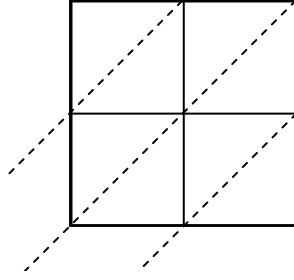


Utilisez la méthode par jalousies pour résoudre chaque problème.

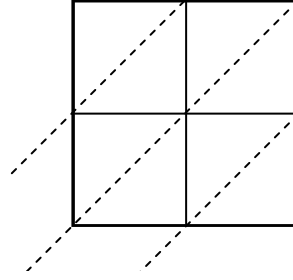
1)  $45 \times 29 =$



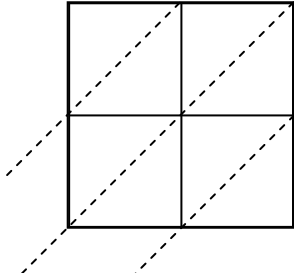
2)  $65 \times 86 =$



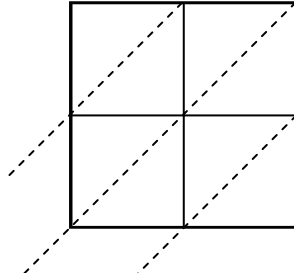
3)  $71 \times 49 =$



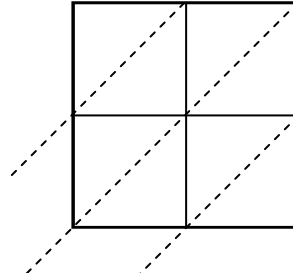
4)  $84 \times 81 =$



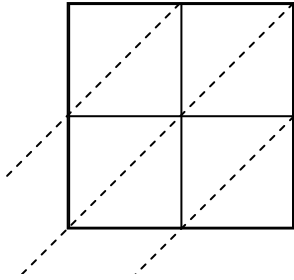
5)  $91 \times 53 =$



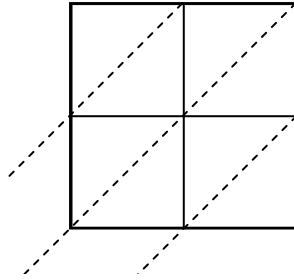
6)  $18 \times 54 =$



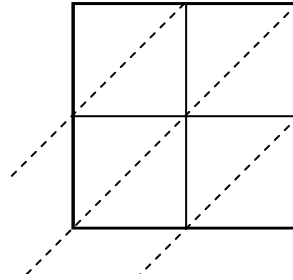
7)  $70 \times 16 =$



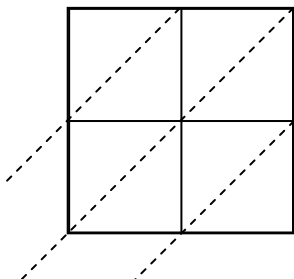
8)  $77 \times 47 =$



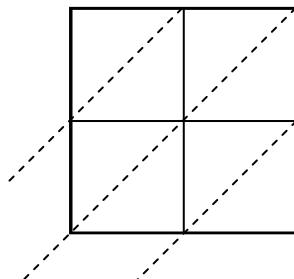
9)  $15 \times 48 =$



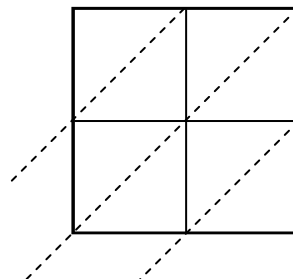
10)  $69 \times 56 =$



11)  $71 \times 34 =$



12)  $22 \times 34 =$



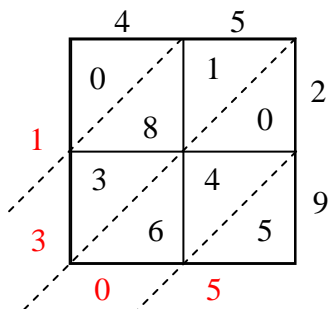
**Réponses**

1. \_\_\_\_\_
2. \_\_\_\_\_
3. \_\_\_\_\_
4. \_\_\_\_\_
5. \_\_\_\_\_
6. \_\_\_\_\_
7. \_\_\_\_\_
8. \_\_\_\_\_
9. \_\_\_\_\_
10. \_\_\_\_\_
11. \_\_\_\_\_
12. \_\_\_\_\_

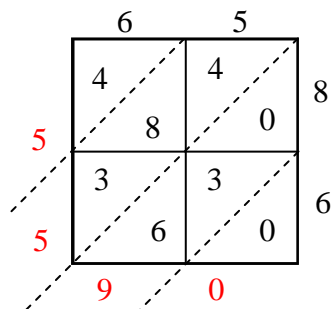


Utilisez la méthode par jalousies pour résoudre chaque problème.

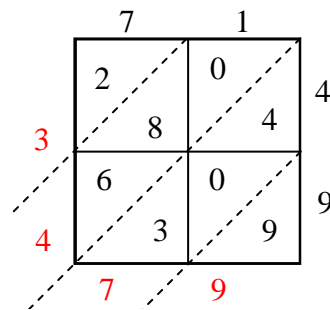
1)  $45 \times 29 =$



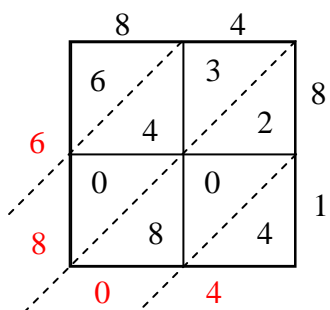
2)  $65 \times 86 =$



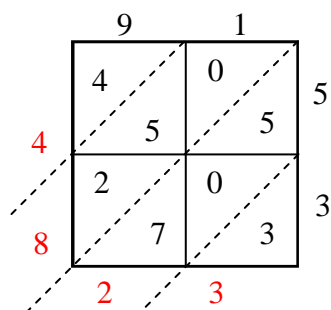
3)  $71 \times 49 =$



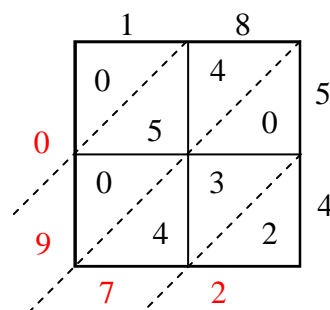
4)  $84 \times 81 =$



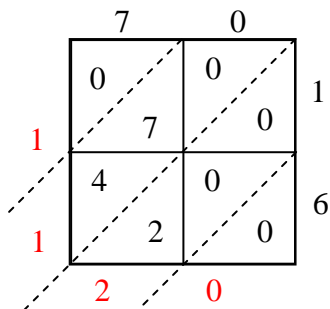
5)  $91 \times 53 =$



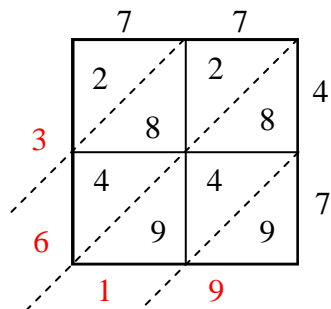
6)  $18 \times 54 =$



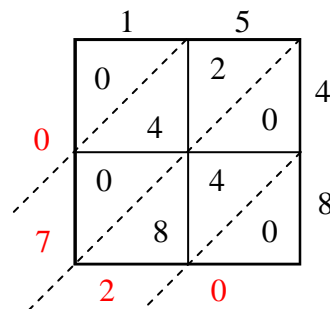
7)  $70 \times 16 =$



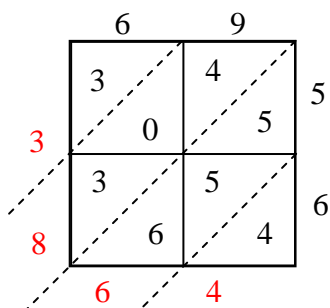
8)  $77 \times 47 =$



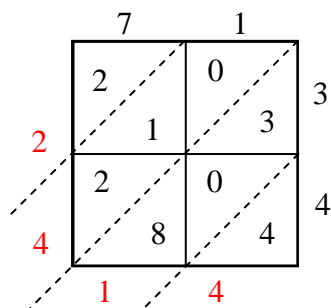
9)  $15 \times 48 =$



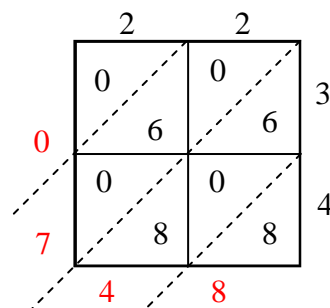
10)  $69 \times 56 =$



11)  $71 \times 34 =$



12)  $22 \times 34 =$

**Réponses**1. **1 305**2. **5 590**3. **3 479**4. **6 804**5. **4 823**6. **972**7. **1 120**8. **3 619**9. **720**10. **3 864**11. **2 414**12. **748**