



Mesurez la longueur et la largeur de chaque barre en centimètres.

Ex)



Réponses


Ex.(in-w) 5

Ex.(in-h) 1 1/2

Ex.(cm-w) 12

Ex.(cm-h) 4

1)



1.(in-w) _____

1.(in-h) _____

1.(cm-w) _____

2)




1.(cm-h) _____

2.(in-w) _____

2.(in-h) _____

2.(cm-w) _____

3)




2.(cm-h) _____

3.(in-w) _____

3.(in-h) _____

3.(cm-w) _____

4)



3.(cm-h) _____

4.(in-w) _____

4.(in-h) _____



4.(cm-w) _____

4.(cm-h) _____

In		1		2		3		4		5		6		7				
Cm	1	2	3	4	5	6	7	8	9	10	11	12	13	14	15	16	17	18
In		1		2		3		4		5		6		7				
Cm	1	2	3	4	5	6	7	8	9	10	11	12	13	14	15	16	17	18
In		1		2		3		4		5		6		7				
Cm	1	2	3	4	5	6	7	8	9	10	11	12	13	14	15	16	17	18
In		1		2		3		4		5		6		7				
Cm	1	2	3	4	5	6	7	8	9	10	11	12	13	14	15	16	17	18
In		1		2		3		4		5		6		7				
Cm	1	2	3	4	5	6	7	8	9	10	11	12	13	14	15	16	17	18
In		1		2		3		4		5		6		7				
Cm	1	2	3	4	5	6	7	8	9	10	11	12	13	14	15	16	17	18
In		1		2		3		4		5		6		7				
Cm	1	2	3	4	5	6	7	8	9	10	11	12	13	14	15	16	17	18
In		1		2		3		4		5		6		7				
Cm	1	2	3	4	5	6	7	8	9	10	11	12	13	14	15	16	17	18
In		1		2		3		4		5		6		7				
Cm	1	2	3	4	5	6	7	8	9	10	11	12	13	14	15	16	17	18



Mesurez la longueur et la largeur de chaque barre en centimètres.

**Réponses**Ex.(in-w) 5Ex.(in-h) 1 1/2Ex.(cm-w) 12Ex.(cm-h) 41.(in-w) 41.(in-h) 11.(cm-w) 10.21.(cm-h) 2.52.(in-w) 22.(in-h) 12.(cm-w) 5.12.(cm-h) 2.53.(in-w) 5 1/23.(in-h) 1 1/23.(cm-w) 143.(cm-h) 3.84.(in-w) 54.(in-h) 1 1/24.(cm-w) 12.74.(cm-h) 3.8