




Mesurez la longueur et la largeur de chaque barre en centimètres.

Ex)



**Réponses**


Ex.(in-w) 5

Ex.(in-h) 1 1/2

Ex.(cm-w) 12

Ex.(cm-h) 4

1)




1.(in-w) \_\_\_\_\_

1.(in-h) \_\_\_\_\_

1.(cm-w) \_\_\_\_\_

1.(cm-h) \_\_\_\_\_

2)



2.(in-w) \_\_\_\_\_

2.(in-h) \_\_\_\_\_

2.(cm-w) \_\_\_\_\_

2.(cm-h) \_\_\_\_\_

3)



3.(in-w) \_\_\_\_\_

3.(in-h) \_\_\_\_\_

3.(cm-w) \_\_\_\_\_

3.(cm-h) \_\_\_\_\_

4)



4.(in-w) \_\_\_\_\_

4.(in-h) \_\_\_\_\_



4.(cm-w) \_\_\_\_\_

4.(cm-h) \_\_\_\_\_

In		1		2		3		4		5		6		7				
Cm	1	2	3	4	5	6	7	8	9	10	11	12	13	14	15	16	17	18
In		1		2		3		4		5		6		7				
Cm	1	2	3	4	5	6	7	8	9	10	11	12	13	14	15	16	17	18
In		1		2		3		4		5		6		7				
Cm	1	2	3	4	5	6	7	8	9	10	11	12	13	14	15	16	17	18
In		1		2		3		4		5		6		7				
Cm	1	2	3	4	5	6	7	8	9	10	11	12	13	14	15	16	17	18
In		1		2		3		4		5		6		7				
Cm	1	2	3	4	5	6	7	8	9	10	11	12	13	14	15	16	17	18
In		1		2		3		4		5		6		7				
Cm	1	2	3	4	5	6	7	8	9	10	11	12	13	14	15	16	17	18
In		1		2		3		4		5		6		7				
Cm	1	2	3	4	5	6	7	8	9	10	11	12	13	14	15	16	17	18
In		1		2		3		4		5		6		7				
Cm	1	2	3	4	5	6	7	8	9	10	11	12	13	14	15	16	17	18
In		1		2		3		4		5		6		7				
Cm	1	2	3	4	5	6	7	8	9	10	11	12	13	14	15	16	17	18



Mesurez la longueur et la largeur de chaque barre en centimètres.



**Réponses**

Ex.(in-w) 5

Ex.(in-h) 1 1/2

Ex.(cm-w) 12

Ex.(cm-h) 4

1.(in-w) 1

1.(in-h) 1

1.(cm-w) 2.5

1.(cm-h) 2.5

2.(in-w) 3 1/2

2.(in-h) 1 1/2

2.(cm-w) 8.9

2.(cm-h) 3.8

3.(in-w) 2 1/2

3.(in-h) 0 1/2

3.(cm-w) 6.4

3.(cm-h) 1.3

4.(in-w) 0 1/2

4.(in-h) 0 1/2

4.(cm-w) 1.3

4.(cm-h) 1.3