



Mesurez la largeur de chaque barre en centimètres.




**Réponses**

Ex(in). 5

Ex(cm). 12



1(in). \_\_\_\_\_




1(cm). \_\_\_\_\_

2(in). \_\_\_\_\_



2(cm). \_\_\_\_\_

3(in). \_\_\_\_\_



3(cm). \_\_\_\_\_

4(in). \_\_\_\_\_



4(cm). \_\_\_\_\_

5(in). \_\_\_\_\_



5(cm). \_\_\_\_\_

6(in). \_\_\_\_\_



6(cm). \_\_\_\_\_

7(in). \_\_\_\_\_



7(cm). \_\_\_\_\_

8(in). \_\_\_\_\_



8(cm). \_\_\_\_\_

9(in). \_\_\_\_\_



9(cm). \_\_\_\_\_



10(in). \_\_\_\_\_

10(cm). \_\_\_\_\_

In		1		2		3		4		5		6		7				
Cm	1	2	3	4	5	6	7	8	9	10	11	12	13	14	15	16	17	18
In		1		2		3		4		5		6		7				
Cm	1	2	3	4	5	6	7	8	9	10	11	12	13	14	15	16	17	18
In		1		2		3		4		5		6		7				
Cm	1	2	3	4	5	6	7	8	9	10	11	12	13	14	15	16	17	18
In		1		2		3		4		5		6		7				
Cm	1	2	3	4	5	6	7	8	9	10	11	12	13	14	15	16	17	18
In		1		2		3		4		5		6		7				
Cm	1	2	3	4	5	6	7	8	9	10	11	12	13	14	15	16	17	18
In		1		2		3		4		5		6		7				
Cm	1	2	3	4	5	6	7	8	9	10	11	12	13	14	15	16	17	18
In		1		2		3		4		5		6		7				
Cm	1	2	3	4	5	6	7	8	9	10	11	12	13	14	15	16	17	18
In		1		2		3		4		5		6		7				
Cm	1	2	3	4	5	6	7	8	9	10	11	12	13	14	15	16	17	18
In		1		2		3		4		5		6		7				
Cm	1	2	3	4	5	6	7	8	9	10	11	12	13	14	15	16	17	18



Mesurez la largeur de chaque barre en centimètres.



**Réponses**

Ex(in). 5

Ex(cm). 12

1(in). 5

1(cm). 12 - 13

2(in). 1 1/2

2(cm). 3 - 4

3(in). 1

3(cm). 2 - 3

4(in). 5 1/2

4(cm). 13 - 14

5(in). 0 1/2

5(cm). 1 - 2

6(in). 3

6(cm). 7 - 8

7(in). 2

7(cm). 5 - 6

8(in). 4 1/2

8(cm). 11 - 12

9(in). 4

9(cm). 10 - 11

10(in). 3 1/2

10(cm). 8 - 9