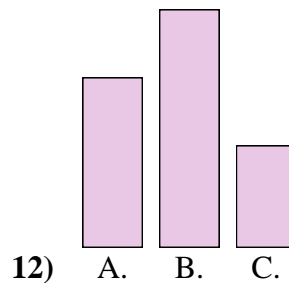
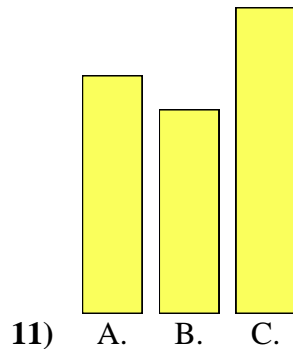
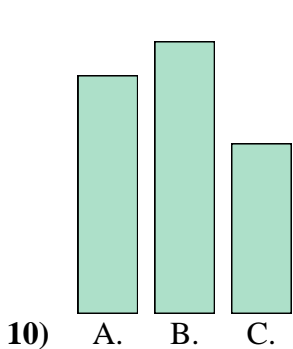
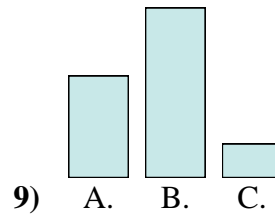
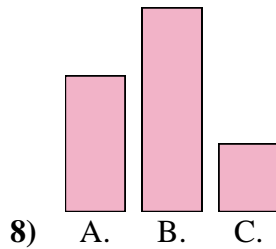
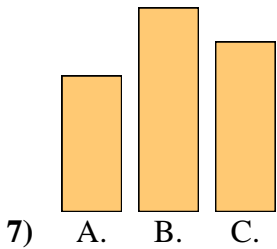
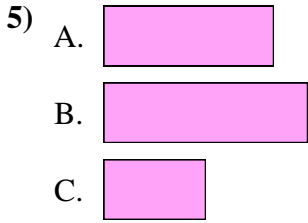
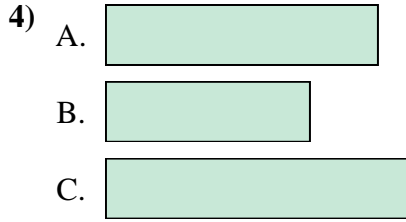
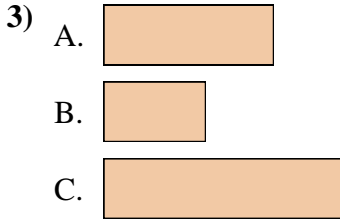
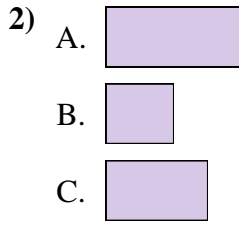
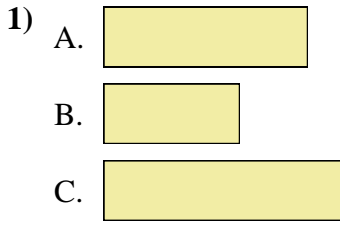




Classez les barres de la plus petite à la plus grande.

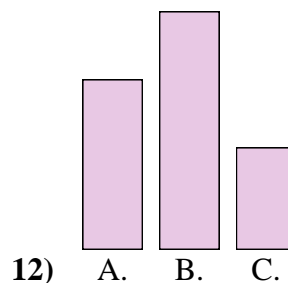
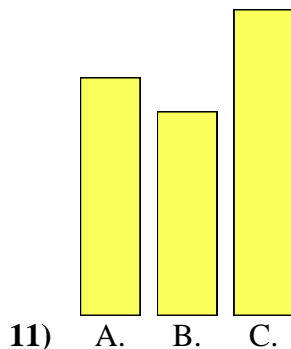
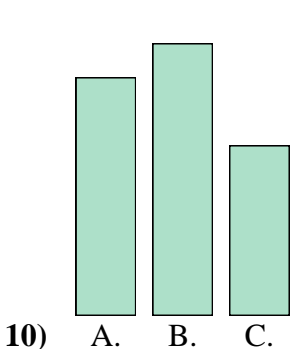
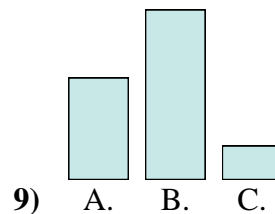
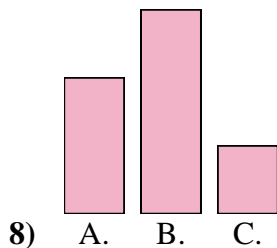
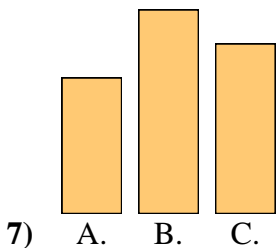
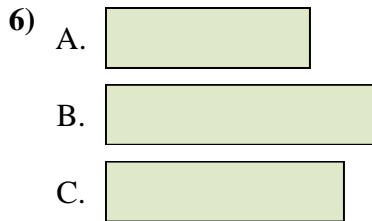
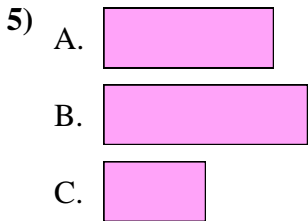
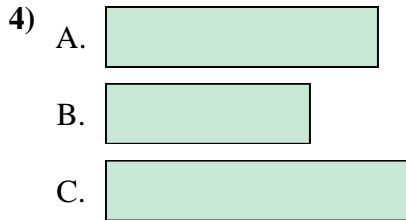
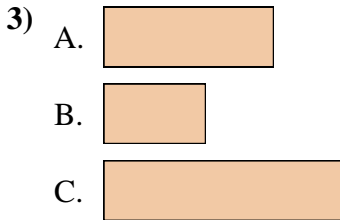
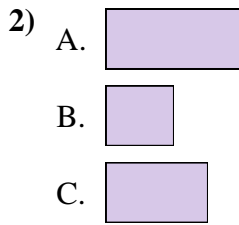
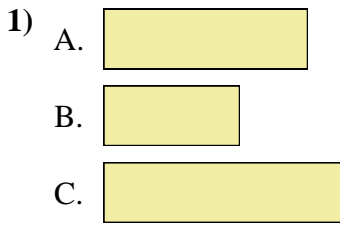


**Réponses**

1. \_\_\_\_\_
2. \_\_\_\_\_
3. \_\_\_\_\_
4. \_\_\_\_\_
5. \_\_\_\_\_
6. \_\_\_\_\_
7. \_\_\_\_\_
8. \_\_\_\_\_
9. \_\_\_\_\_
10. \_\_\_\_\_
11. \_\_\_\_\_
12. \_\_\_\_\_



Classez les barres de la plus petite à la plus grande.



**Réponses**

1. **B, A, C**

2. **B, C, A**

3. **B, A, C**

4. **B, A, C**

5. **C, A, B**

6. **A, C, B**

7. **A, C, B**

8. **C, A, B**

9. **C, A, B**

10. **C, A, B**

11. **B, A, C**

12. **C, A, B**