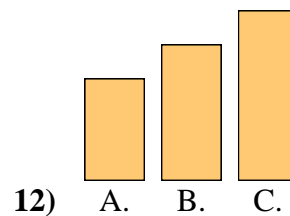
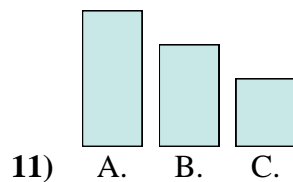
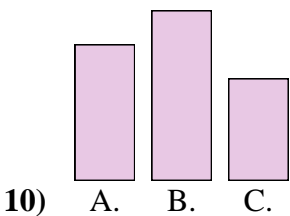
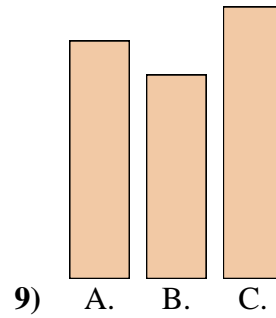
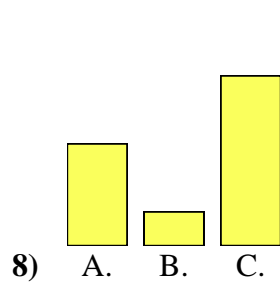
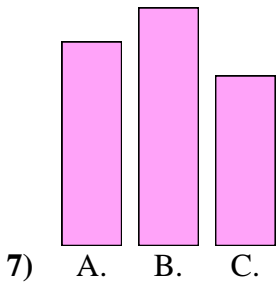
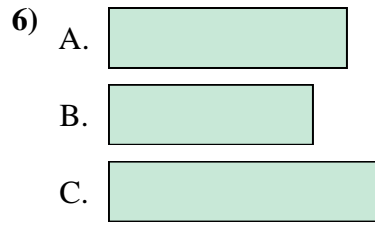
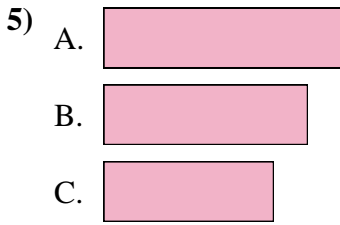
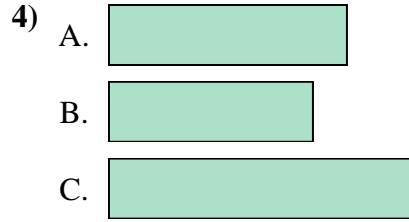
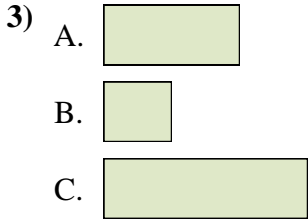
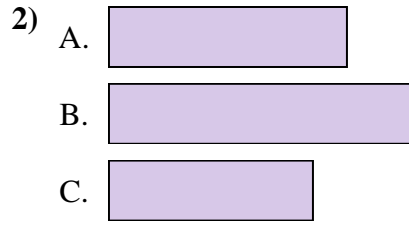
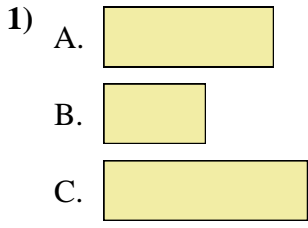




Classez les barres de la plus petite à la plus grande.

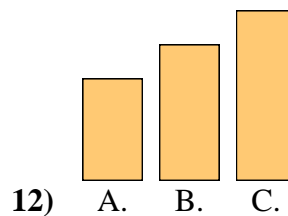
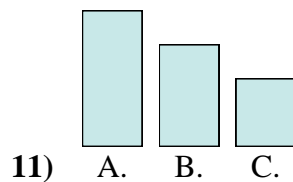
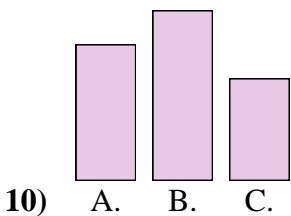
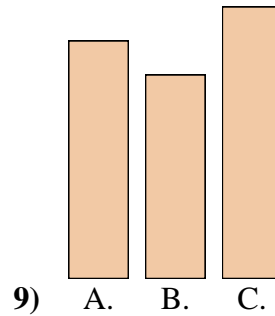
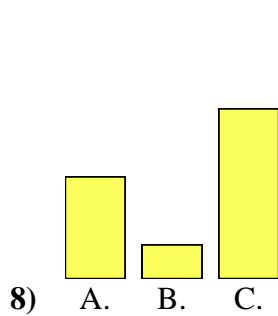
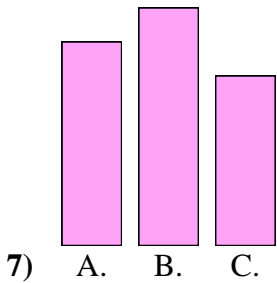
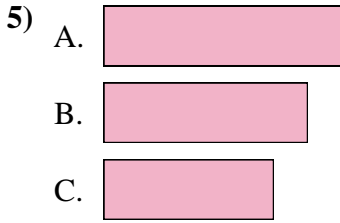
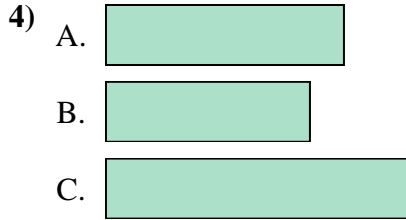
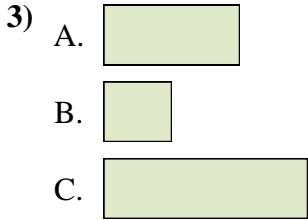
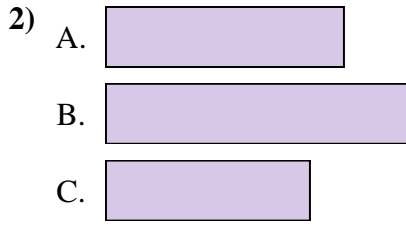
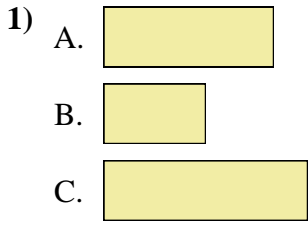


**Réponses**

1. \_\_\_\_\_
2. \_\_\_\_\_
3. \_\_\_\_\_
4. \_\_\_\_\_
5. \_\_\_\_\_
6. \_\_\_\_\_
7. \_\_\_\_\_
8. \_\_\_\_\_
9. \_\_\_\_\_
10. \_\_\_\_\_
11. \_\_\_\_\_
12. \_\_\_\_\_



Classez les barres de la plus petite à la plus grande.



**Réponses**

1. **B, A, C**

2. **C, A, B**

3. **B, A, C**

4. **B, A, C**

5. **C, B, A**

6. **B, A, C**

7. **C, A, B**

8. **B, A, C**

9. **B, A, C**

10. **C, A, B**

11. **C, B, A**

12. **A, B, C**