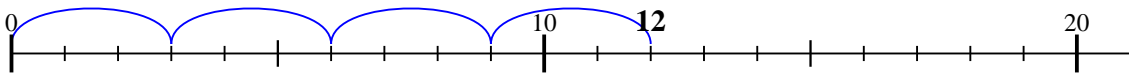




Utilisez la droite numérique pour résoudre chaque problème.

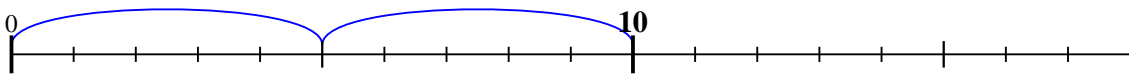
Réponses

1) $12 \div 3 =$



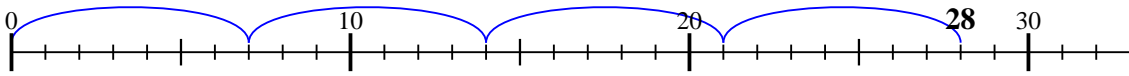
1. 4

2) $10 \div 5 =$



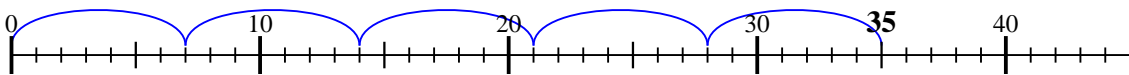
2. 2

3) $28 \div 7 =$



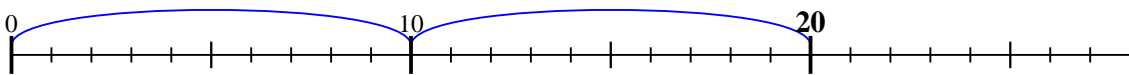
3. 4

4) $35 \div 7 =$



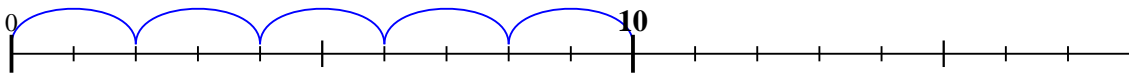
4. 5

5) $20 \div 10 =$



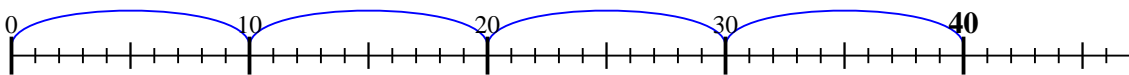
5. 2

6) $10 \div 2 =$



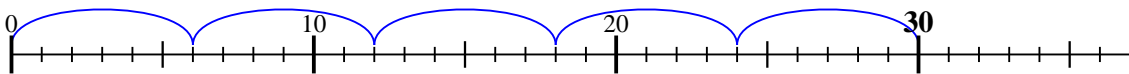
6. 5

7) $40 \div 10 =$



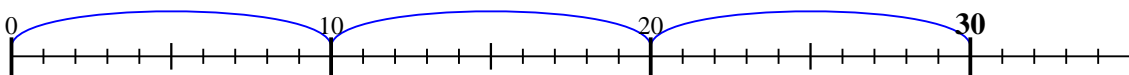
7. 4

8) $30 \div 6 =$



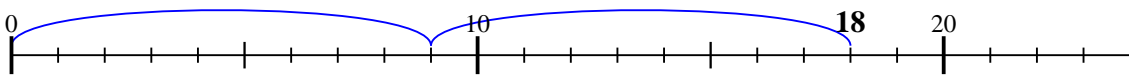
8. 5

9) $30 \div 10 =$



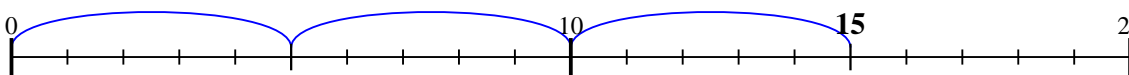
9. 3

10) $18 \div 9 =$



10. 2

11) $15 \div 5 =$



11. 3