

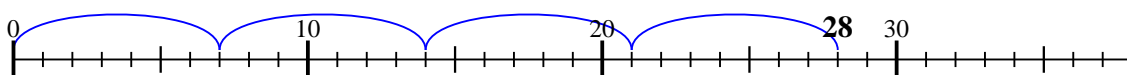




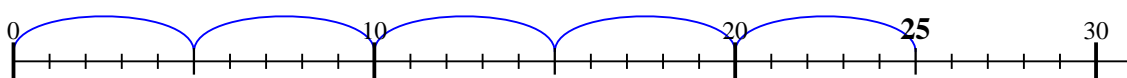
Utilisez la droite numérique pour résoudre chaque problème.

**Réponses**

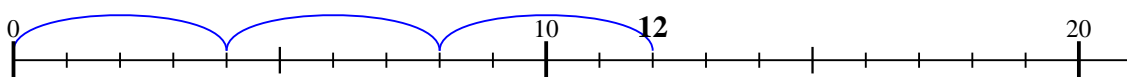
1)  $28 \div 7 =$

1. 4

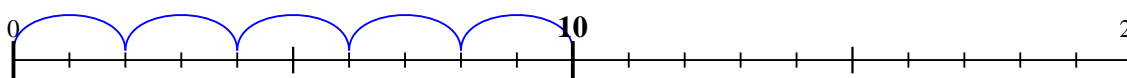
2)  $25 \div 5 =$

2. 5

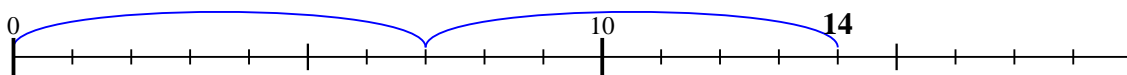
3)  $12 \div 4 =$

3. 3

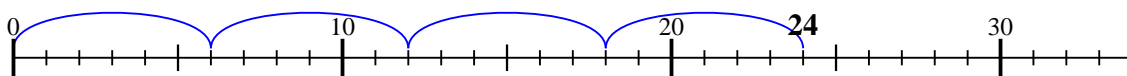
4)  $10 \div 2 =$

4. 5

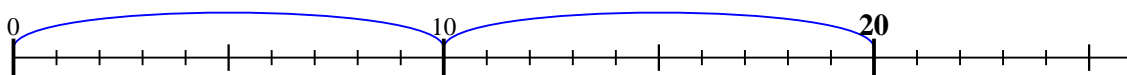
5)  $14 \div 7 =$

5. 2

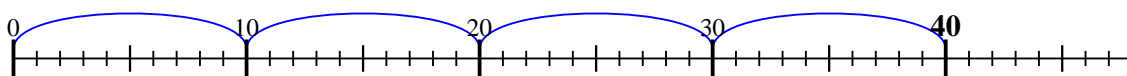
6)  $24 \div 6 =$

6. 4

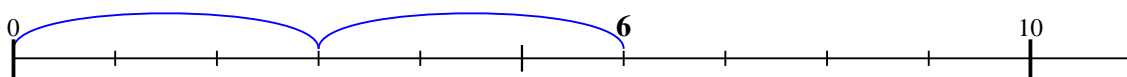
7)  $20 \div 10 =$

7. 2

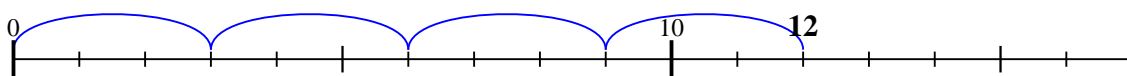
8)  $40 \div 10 =$

8. 4

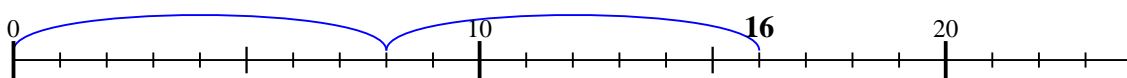
9)  $6 \div 3 =$

9. 2

10)  $12 \div 3 =$

10. 4

11)  $16 \div 8 =$

11. 2