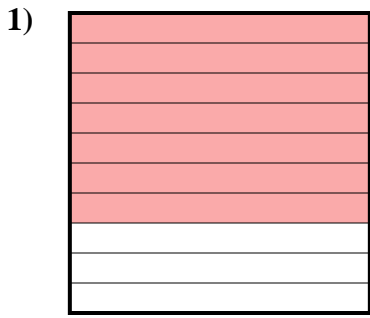


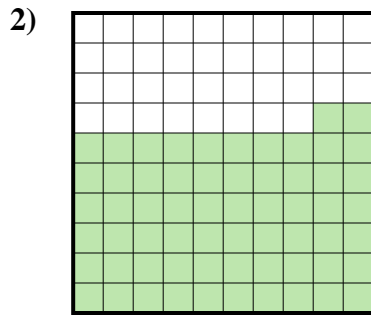


Déterminez quelle lettre représente le mieux la valeur colorée relative à la figure.

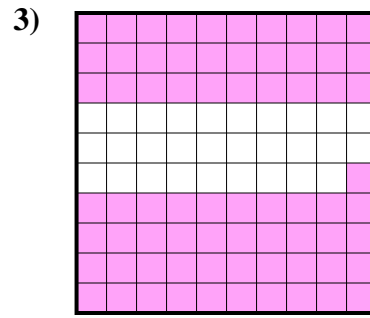
Réponses



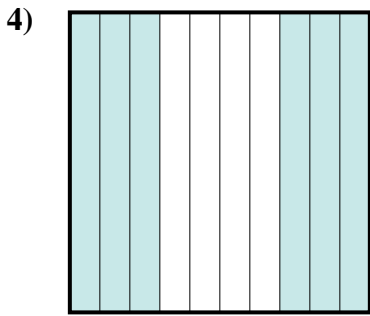
- A. 0,7
- B. 0,07
- C. 7
- D. 70



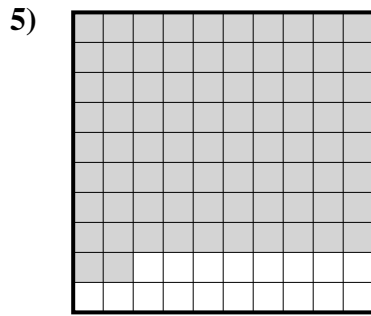
- A. 62
- B. 0,62
- C. 6,2
- D. 620



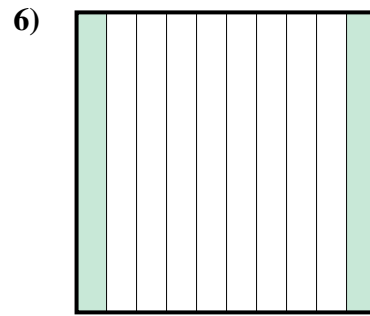
- A. 0,071
- B. 7,1
- C. 71
- D. 0,71



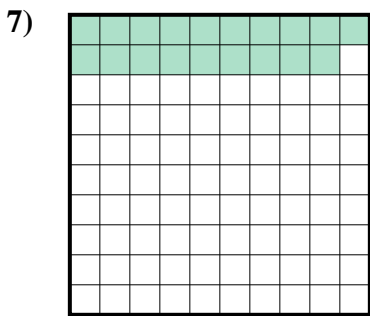
- A. 600
- B. 60
- C. 6
- D. 0,6



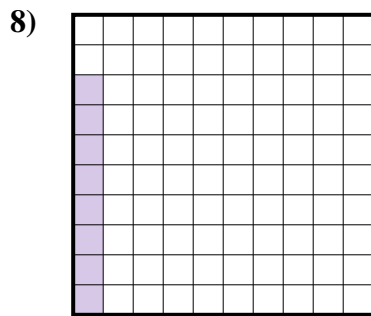
- A. 8,2
- B. 820
- C. 82
- D. 0,82



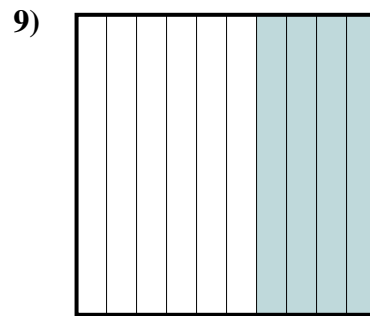
- A. 0,2
- B. 20
- C. 0,02
- D. 200



- A. 19
- B. 0,19
- C. 0,019
- D. 1,9



- A. 0,8
- B. 80
- C. 8
- D. 0,08



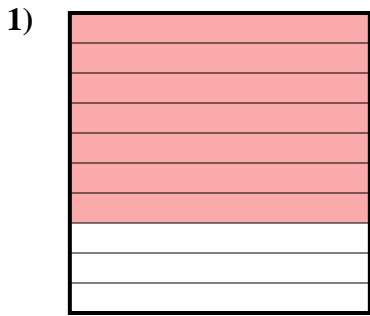
- A. 4
- B. 0,4
- C. 400
- D. 40

- 1. _____
- 2. _____
- 3. _____
- 4. _____
- 5. _____
- 6. _____
- 7. _____
- 8. _____
- 9. _____

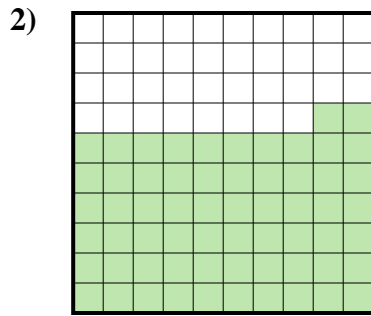


Déterminez quelle lettre représente le mieux la valeur colorée relative à la figure.

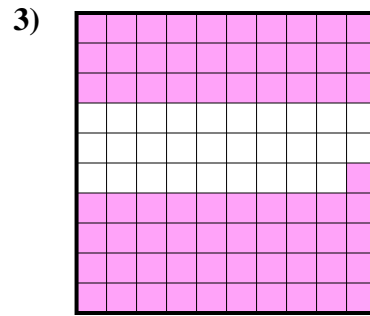
Réponses



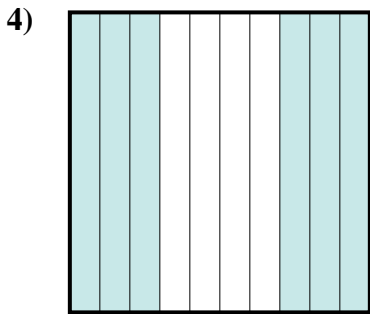
- A. 0,7
- B. 0,07
- C. 7
- D. 70



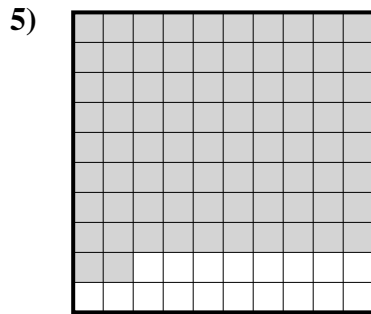
- A. 62
- B. 0,62
- C. 6,2
- D. 620



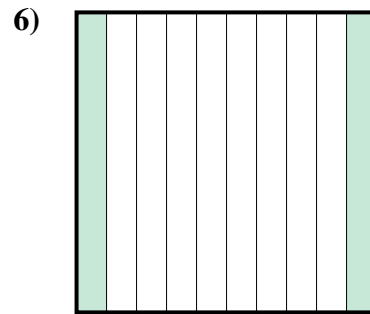
- A. 0,071
- B. 7,1
- C. 71
- D. 0,71



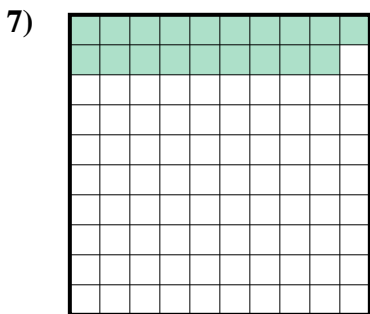
- A. 600
- B. 60
- C. 6
- D. 0,6



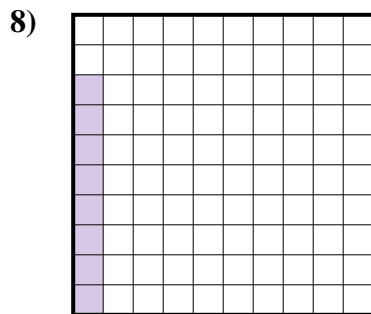
- A. 8,2
- B. 820
- C. 82
- D. 0,82



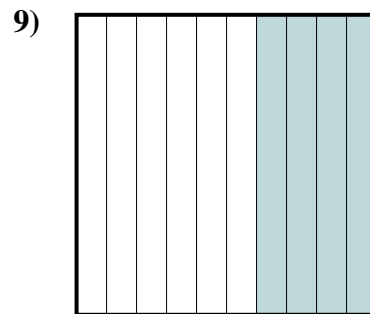
- A. 0,2
- B. 20
- C. 0,02
- D. 200



- A. 19
- B. 0,19
- C. 0,019
- D. 1,9



- A. 0,8
- B. 80
- C. 8
- D. 0,08



- A. 4
- B. 0,4
- C. 400
- D. 40

- 1. **A**
- 2. **B**
- 3. **D**
- 4. **D**
- 5. **D**
- 6. **A**
- 7. **B**
- 8. **D**
- 9. **B**