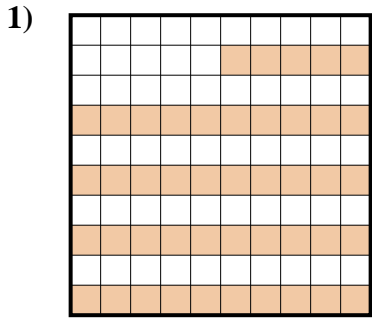


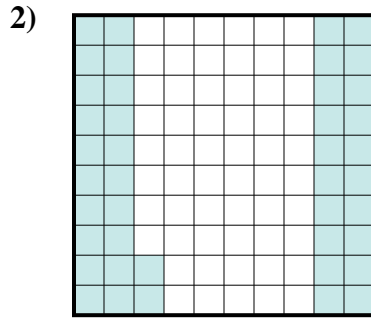


Déterminez quelle lettre représente le mieux la valeur colorée relative à la figure.

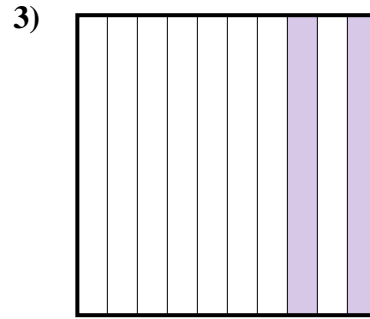
Réponses



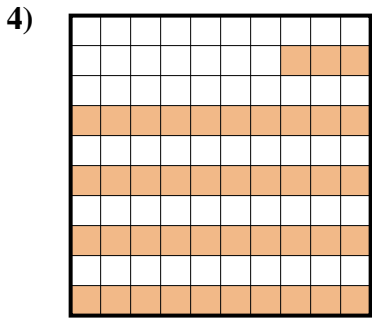
- A. 4,5
- B. 450
- C. 0,45
- D. 45




- A. 4,2
- B. 0,42
- C. 0,042
- D. 42




- A. 0,2
- B. 20
- C. 200
- D. 2



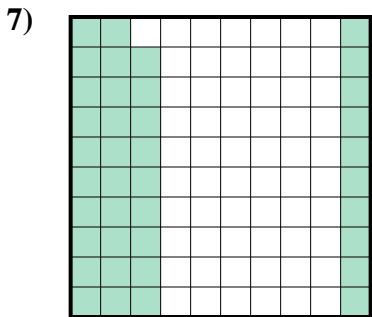
- A. 0,43
- B. 43
- C. 4,3
- D. 0,043



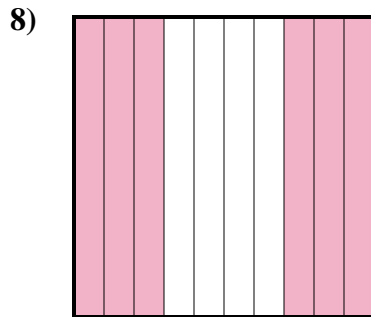
- A. 100
- B. 10
- C. 0,1
- D. 1



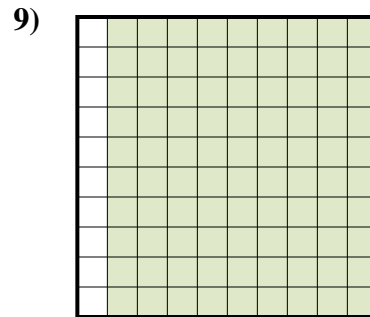
- A. 500
- B. 0,5
- C. 50
- D. 0,05



- A. 3,9
- B. 0,039
- C. 39
- D. 0,39



- A. 60
- B. 6
- C. 600
- D. 0,6

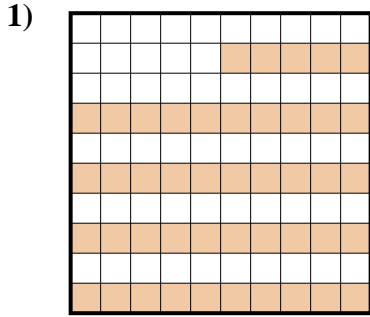


- A. 9
- B. 90
- C. 0,9
- D. 900

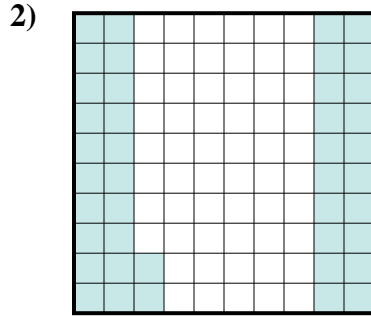
- 1. _____
- 2. _____
- 3. _____
- 4. _____
- 5. _____
- 6. _____
- 7. _____
- 8. _____
- 9. _____



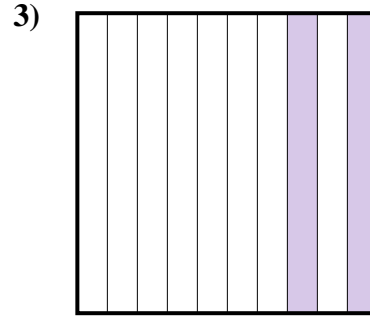
Déterminez quelle lettre représente le mieux la valeur colorée relative à la figure.



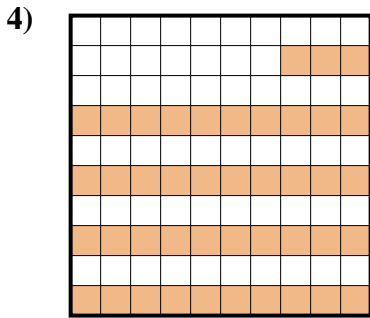
- A. 4,5
- B. 450
- C. 0,45
- D. 45




- A. 4,2
- B. 0,42
- C. 0,042
- D. 42




- A. 0,2
- B. 20
- C. 200
- D. 2



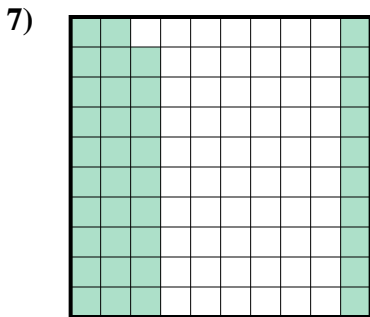
- A. 0,43
- B. 43
- C. 4,3
- D. 0,043



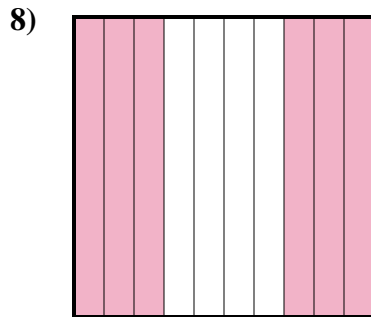
- A. 100
- B. 10
- C. 0,1
- D. 1



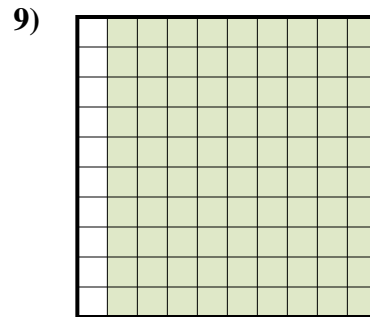
- A. 500
- B. 0,5
- C. 50
- D. 0,05



- A. 3,9
- B. 0,039
- C. 39
- D. 0,39



- A. 60
- B. 6
- C. 600
- D. 0,6



- A. 9
- B. 90
- C. 0,9
- D. 900

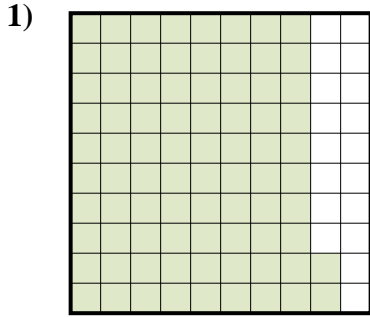
Réponses

- 1. **C**
- 2. **B**
- 3. **A**
- 4. **A**
- 5. **C**
- 6. **B**
- 7. **D**
- 8. **D**
- 9. **C**

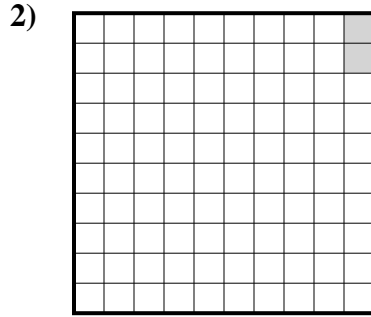


Déterminez quelle lettre représente le mieux la valeur colorée relative à la figure.

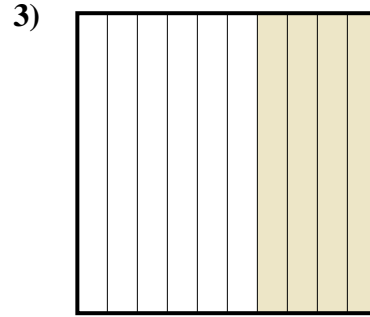
Réponses



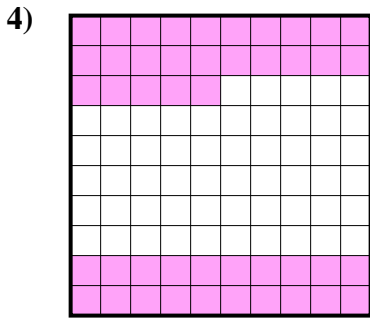
- A. 820
- B. 0,82
- C. 82
- D. 8,2



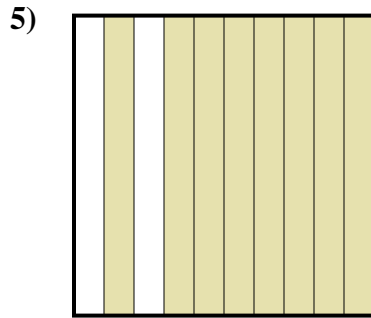
- A. 0,02
- B. 0,002
- C. 0,2
- D. 20



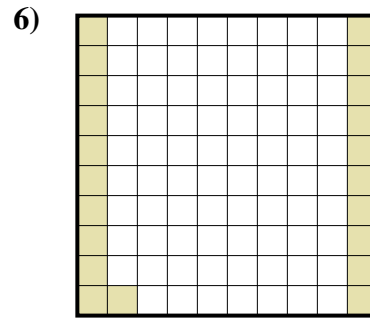
- A. 0,4
- B. 0,04
- C. 400
- D. 40




- A. 450
- B. 0,045
- C. 4,5
- D. 0,45



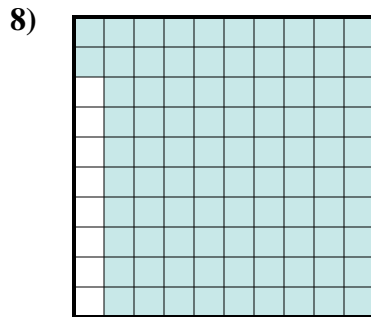
- A. 800
- B. 0,8
- C. 0,08
- D. 80




- A. 2,1
- B. 210
- C. 21
- D. 0,21



- A. 6
- B. 60
- C. 0,6
- D. 0,06



- A. 0,92
- B. 92
- C. 0,092
- D. 9,2

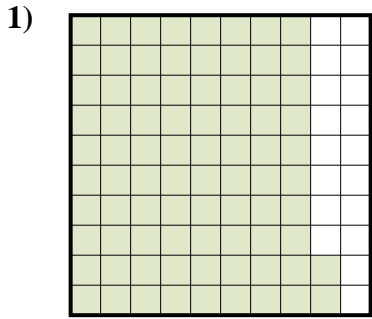


- A. 0,01
- B. 0,1
- C. 10
- D. 100

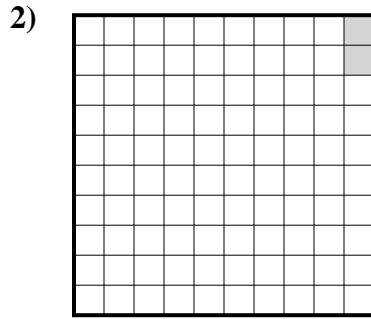
- 1. _____
- 2. _____
- 3. _____
- 4. _____
- 5. _____
- 6. _____
- 7. _____
- 8. _____
- 9. _____



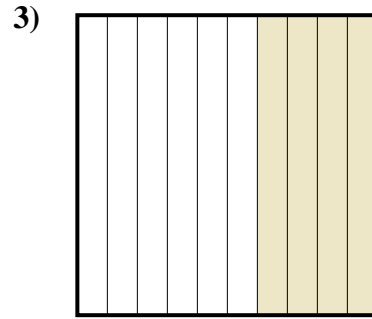
Déterminez quelle lettre représente le mieux la valeur colorée relative à la figure.



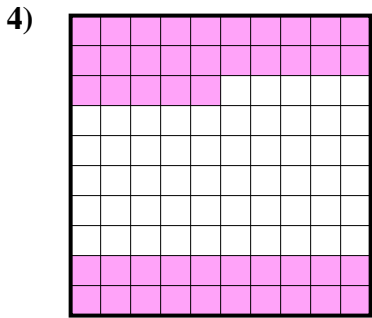
- A. 820
- B. 0,82
- C. 82
- D. 8,2



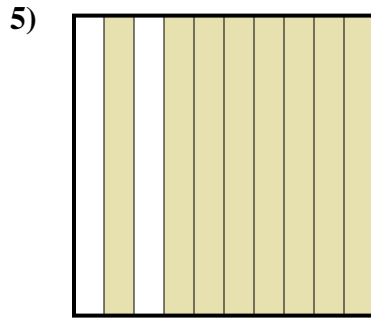
- A. 0,02
- B. 0,002
- C. 0,2
- D. 20



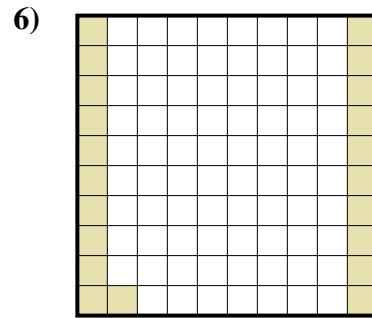
- A. 0,4
- B. 0,04
- C. 400
- D. 40




- A. 450
- B. 0,045
- C. 4,5
- D. 0,45



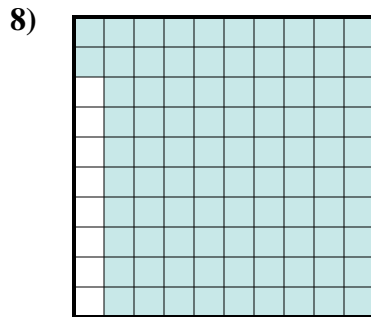
- A. 800
- B. 0,8
- C. 0,08
- D. 80




- A. 2,1
- B. 210
- C. 21
- D. 0,21



- A. 6
- B. 60
- C. 0,6
- D. 0,06



- A. 0,92
- B. 92
- C. 0,092
- D. 9,2



- A. 0,01
- B. 0,1
- C. 10
- D. 100

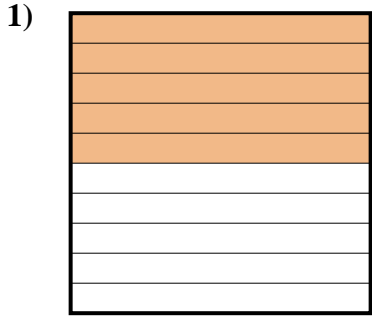
Réponses

- 1. **B**
- 2. **A**
- 3. **A**
- 4. **D**
- 5. **B**
- 6. **D**
- 7. **C**
- 8. **A**
- 9. **B**

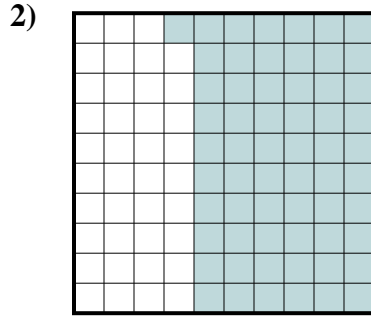


Déterminez quelle lettre représente le mieux la valeur colorée relative à la figure.

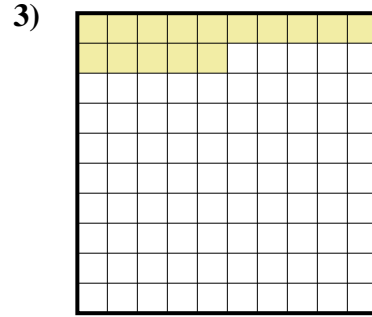
Réponses



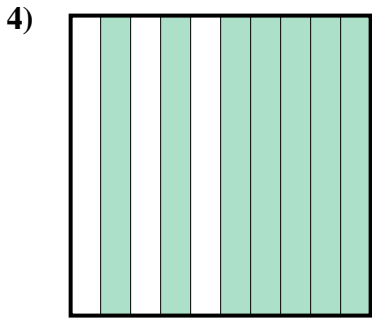
- A. 500
- B. 5
- C. 50
- D. 0,5



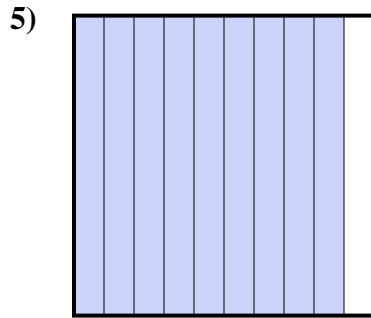
- A. 61
- B. 610
- C. 0,061
- D. 0,61



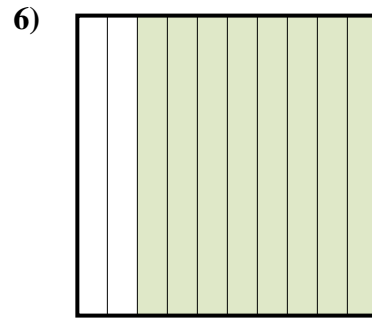
- A. 1,5
- B. 15
- C. 150
- D. 0,15



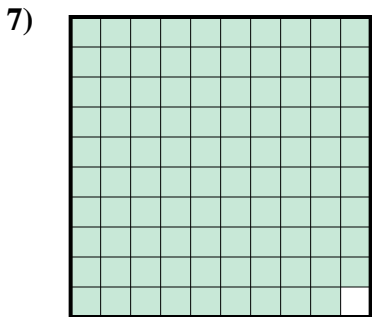
- A. 70
- B. 700
- C. 0,7
- D. 0,07




- A. 0,09
- B. 90
- C. 0,9
- D. 9



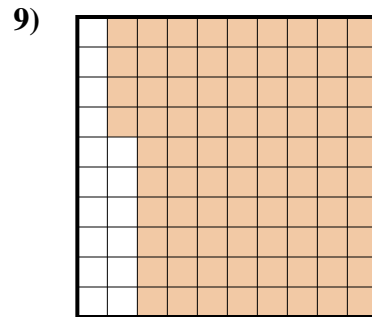
- A. 80
- B. 0,8
- C. 8
- D. 800



- A. 0,99
- B. 990
- C. 99
- D. 0,099



- A. 0,02
- B. 2
- C. 0,2
- D. 20

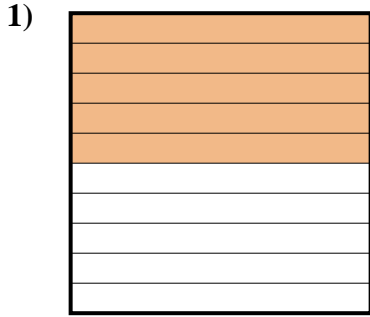


- A. 84
- B. 0,84
- C. 8,4
- D. 840

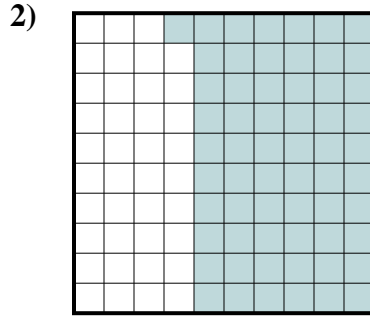
- 1. _____
- 2. _____
- 3. _____
- 4. _____
- 5. _____
- 6. _____
- 7. _____
- 8. _____
- 9. _____



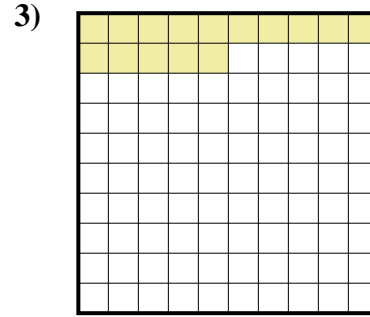
Déterminez quelle lettre représente le mieux la valeur colorée relative à la figure.



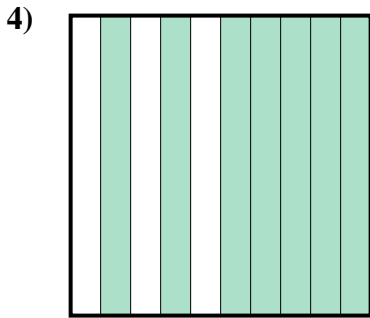
- A. 500
B. 5
C. 50
D. 0,5



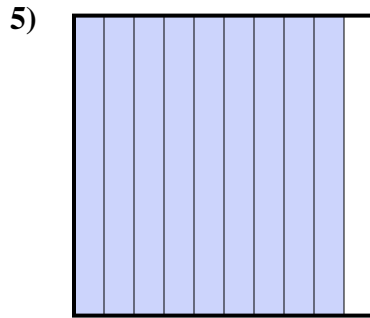
- A. 61
B. 610
C. 0,061
D. 0,61



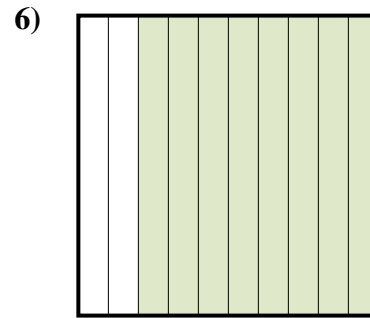
- A. 1,5
B. 15
C. 150
D. 0,15



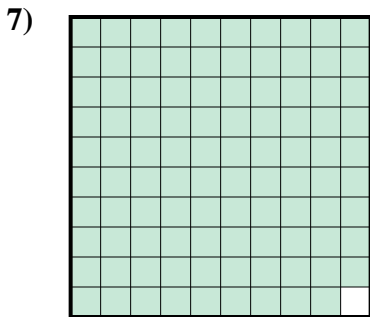
- A. 70
B. 700
C. 0,7
D. 0,07




- A. 0,09
B. 90
C. 0,9
D. 9



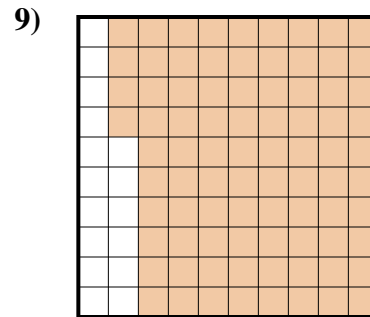
- A. 80
B. 0,8
C. 8
D. 800



- A. 0,99
B. 990
C. 99
D. 0,099



- A. 0,02
B. 2
C. 0,2
D. 20



- A. 84
B. 0,84
C. 8,4
D. 840

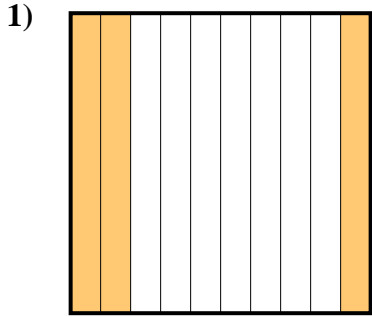
Réponses

1. **D**
2. **D**
3. **D**
4. **C**
5. **C**
6. **B**
7. **A**
8. **C**
9. **B**

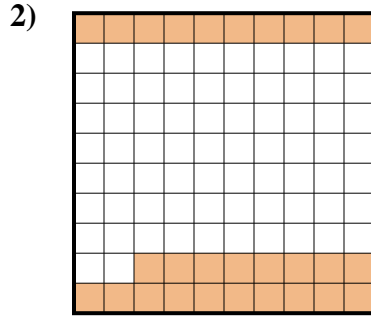


Déterminez quelle lettre représente le mieux la valeur colorée relative à la figure.

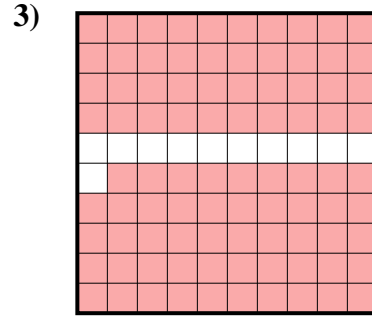
Réponses



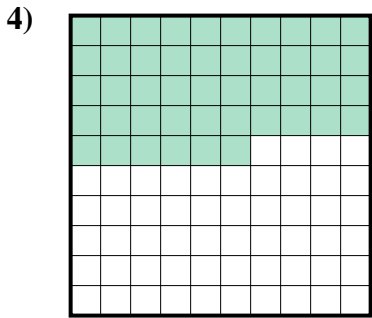
- A. 0,03
- B. 300
- C. 0,3
- D. 3



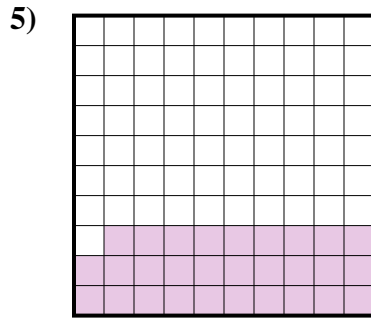
- A. 0,28
- B. 2,8
- C. 28
- D. 280




- A. 89
- B. 0,089
- C. 8,9
- D. 0,89




- A. 460
- B. 0,046
- C. 46
- D. 0,46



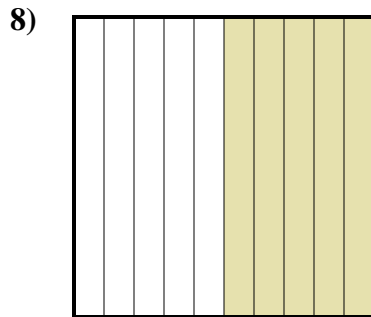
- A. 290
- B. 29
- C. 2,9
- D. 0,29



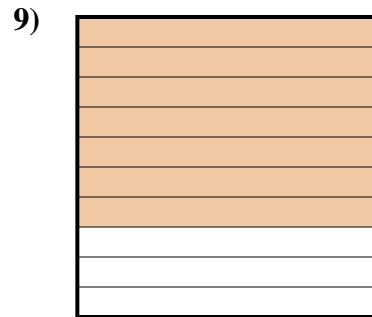
- A. 0,6
- B. 0,06
- C. 6
- D. 600



- A. 800
- B. 8
- C. 0,8
- D. 0,08



- A. 0,5
- B. 0,05
- C. 5
- D. 50



- A. 0,7
- B. 70
- C. 0,07
- D. 700

1. _____

2. _____

3. _____

4. _____

5. _____

6. _____

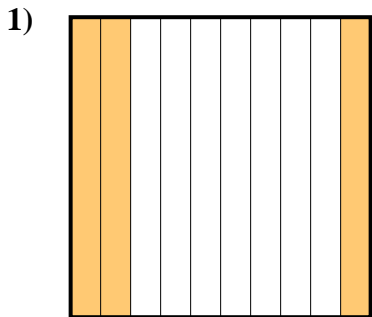
7. _____

8. _____

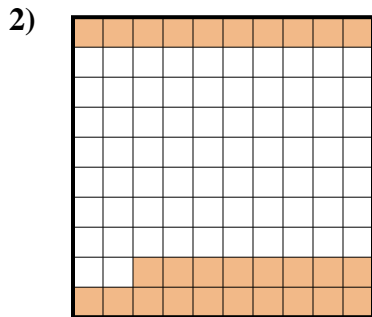
9. _____



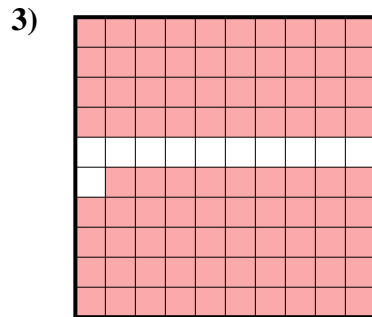
Déterminez quelle lettre représente le mieux la valeur colorée relative à la figure.



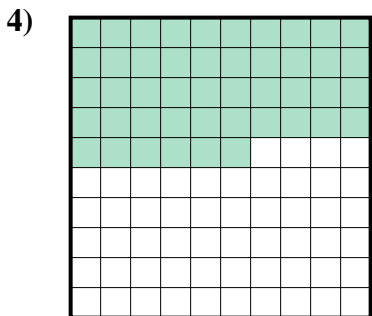
- A. 0,03
- B. 300
- C. 0,3
- D. 3



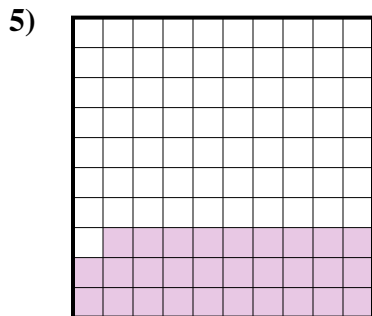
- A. 0,28
- B. 2,8
- C. 28
- D. 280




- A. 89
- B. 0,089
- C. 8,9
- D. 0,89



- A. 460
- B. 0,046
- C. 46
- D. 0,46



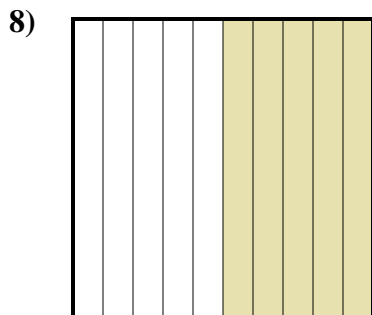
- A. 290
- B. 29
- C. 2,9
- D. 0,29



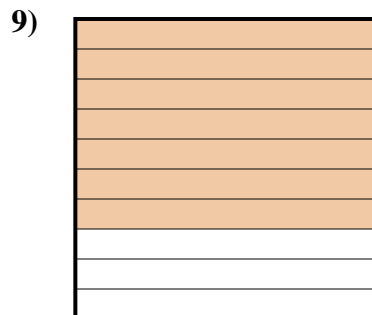
- A. 0,6
- B. 0,06
- C. 6
- D. 600



- A. 800
- B. 8
- C. 0,8
- D. 0,08



- A. 0,5
- B. 0,05
- C. 5
- D. 50



- A. 0,7
- B. 70
- C. 0,07
- D. 700

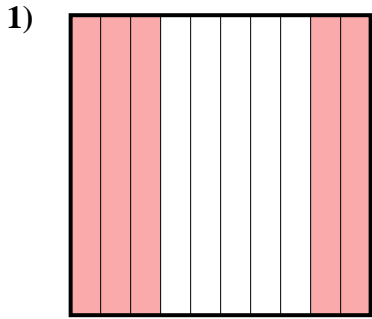
Réponses

- 1. **C**
- 2. **A**
- 3. **D**
- 4. **D**
- 5. **D**
- 6. **A**
- 7. **C**
- 8. **A**
- 9. **A**

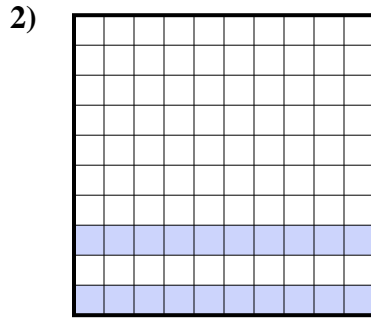


Déterminez quelle lettre représente le mieux la valeur colorée relative à la figure.

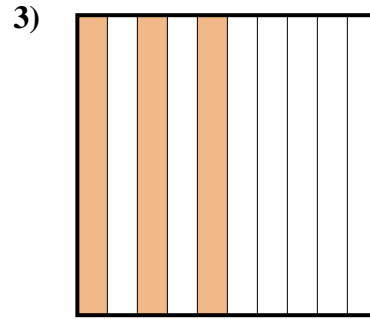
Réponses



- A. 5
- B. 0,5
- C. 0,05
- D. 50



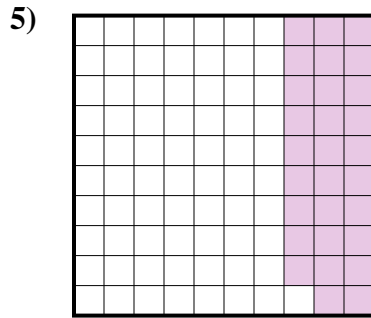
- A. 0,2
- B. 2
- C. 20
- D. 0,02



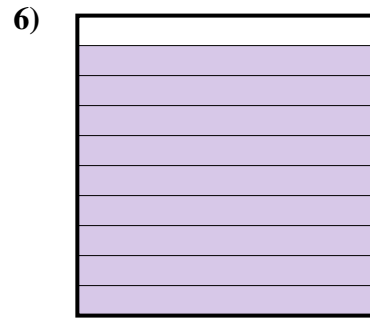
- A. 0,3
- B. 30
- C. 300
- D. 3



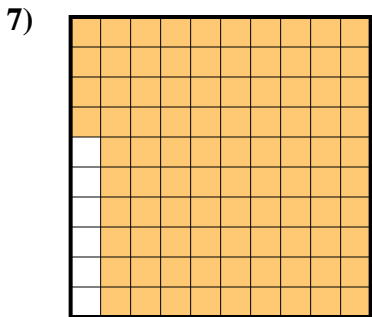
- A. 0,08
- B. 800
- C. 0,8
- D. 80



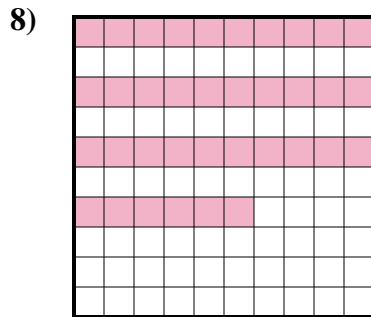
- A. 0,29
- B. 290
- C. 2,9
- D. 29



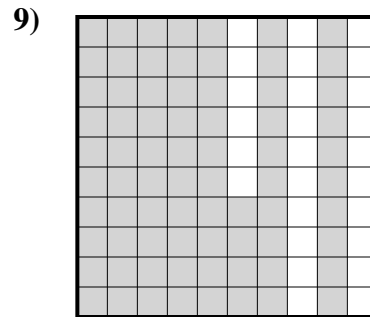
- A. 90
- B. 900
- C. 0,09
- D. 0,9



- A. 0,94
- B. 94
- C. 940
- D. 9,4



- A. 3,6
- B. 0,36
- C. 0,036
- D. 360



- A. 74
- B. 0,74
- C. 7,4
- D. 740

1. _____

2. _____

3. _____

4. _____

5. _____

6. _____

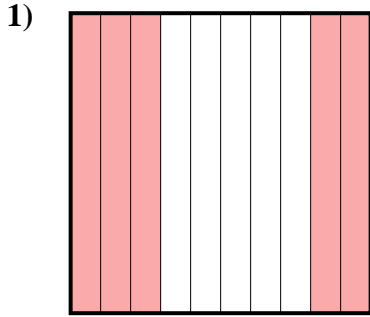
7. _____

8. _____

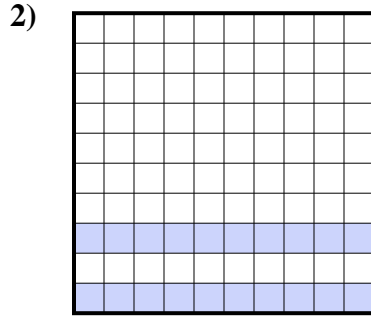
9. _____



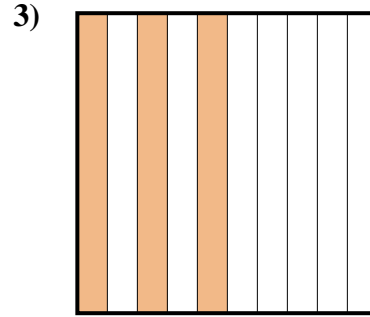
Déterminez quelle lettre représente le mieux la valeur colorée relative à la figure.




- A. 5
- B. 0,5
- C. 0,05
- D. 50



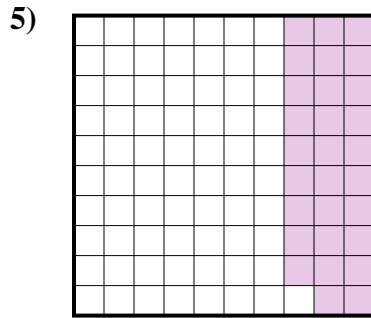
- A. 0,2
- B. 2
- C. 20
- D. 0,02



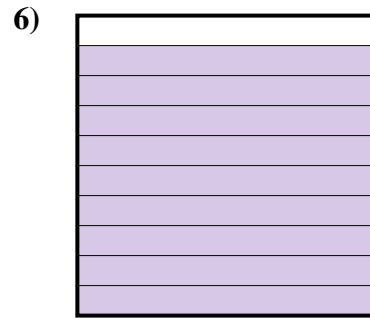
- A. 0,3
- B. 30
- C. 300
- D. 3



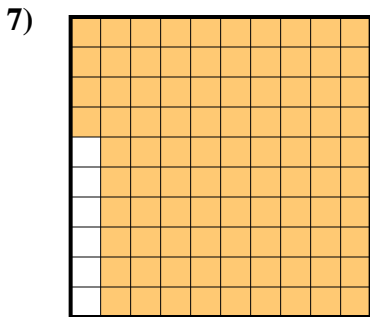
- A. 0,08
- B. 800
- C. 0,8
- D. 80



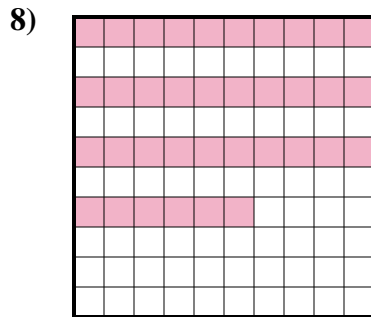
- A. 0,29
- B. 290
- C. 2,9
- D. 29



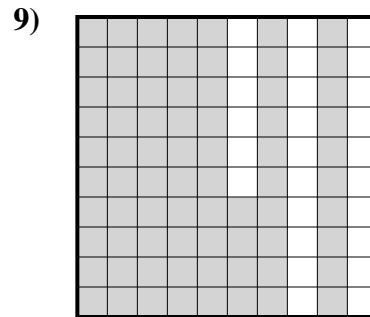
- A. 90
- B. 900
- C. 0,09
- D. 0,9



- A. 0,94
- B. 94
- C. 940
- D. 9,4



- A. 3,6
- B. 0,36
- C. 0,036
- D. 360



- A. 74
- B. 0,74
- C. 7,4
- D. 740


Réponses

- 1. **B**
- 2. **A**
- 3. **A**
- 4. **C**
- 5. **A**
- 6. **D**
- 7. **A**
- 8. **B**
- 9. **B**

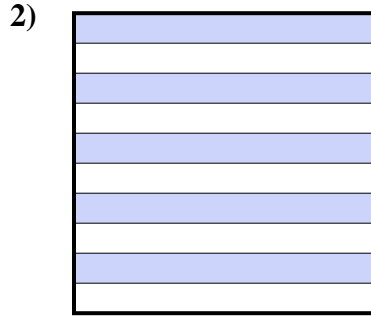


Déterminez quelle lettre représente le mieux la valeur colorée relative à la figure.

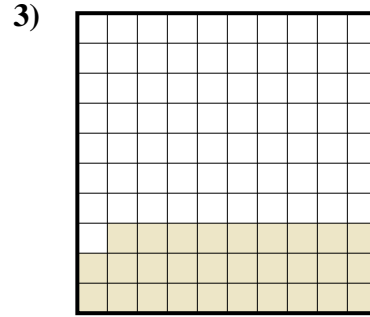
Réponses



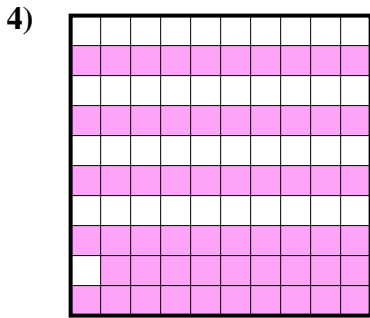
- A. 0,01
- B. 1
- C. 10
- D. 0,1



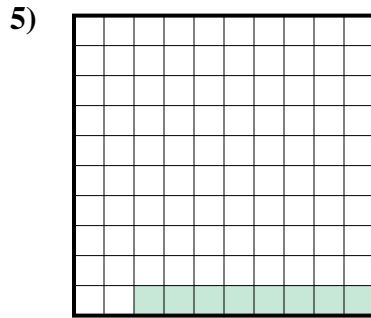
- A. 50
- B. 5
- C. 0,5
- D. 500



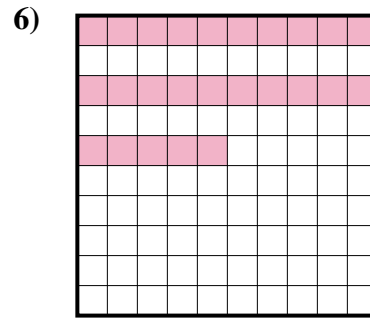
- A. 290
- B. 0,29
- C. 2,9
- D. 29



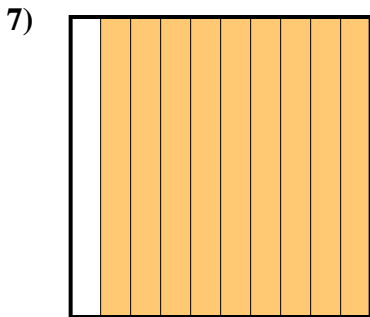
- A. 0,059
- B. 590
- C. 5,9
- D. 0,59




- A. 0,8
- B. 0,008
- C. 8
- D. 0,08



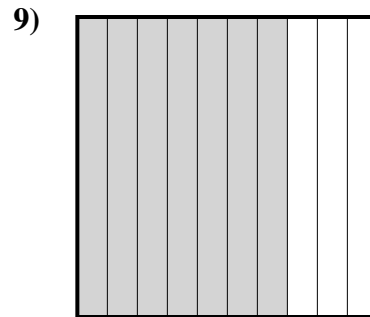
- A. 0,25
- B. 25
- C. 0,025
- D. 250



- A. 900
- B. 9
- C. 0,9
- D. 0,09



- A. 0,04
- B. 400
- C. 4
- D. 0,4




- A. 0,7
- B. 7
- C. 700
- D. 70


- 1. _____
- 2. _____
- 3. _____
- 4. _____
- 5. _____
- 6. _____
- 7. _____
- 8. _____
- 9. _____



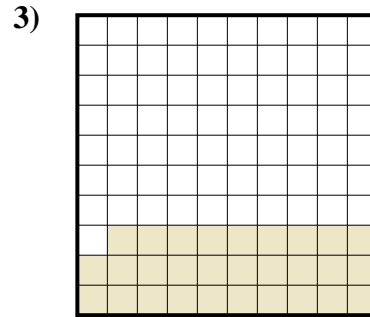
Déterminez quelle lettre représente le mieux la valeur colorée relative à la figure.



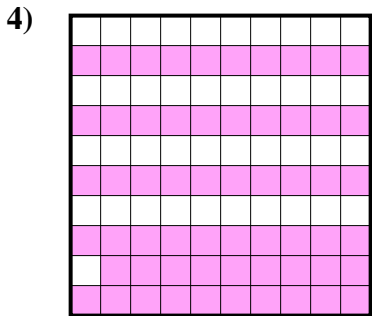
- A. 0,01
- B. 1
- C. 10
- D. 0,1



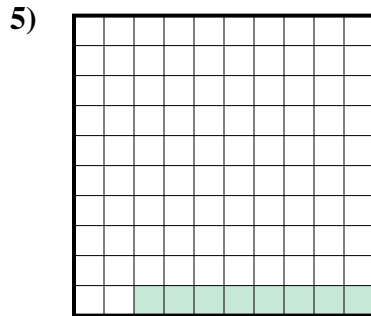
- A. 50
- B. 5
- C. 0,5
- D. 500



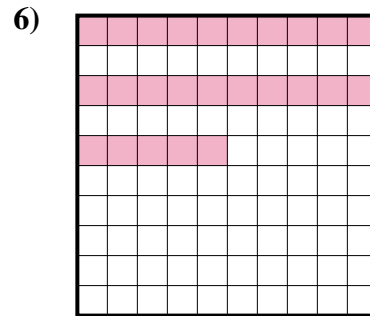
- A. 290
- B. 0,29
- C. 2,9
- D. 29



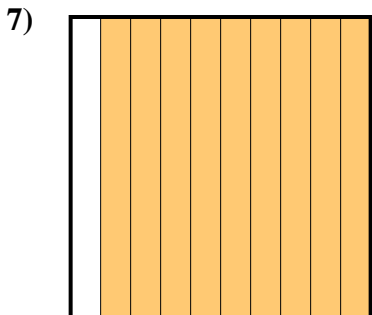
- A. 0,059
- B. 590
- C. 5,9
- D. 0,59




- A. 0,8
- B. 0,008
- C. 8
- D. 0,08



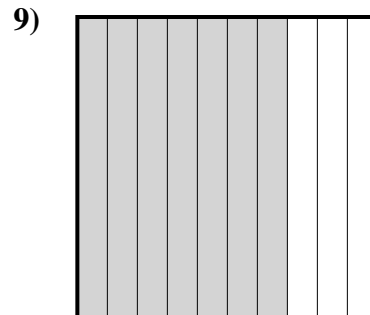
- A. 0,25
- B. 25
- C. 0,025
- D. 250



- A. 900
- B. 9
- C. 0,9
- D. 0,09



- A. 0,04
- B. 400
- C. 4
- D. 0,4



- A. 0,7
- B. 7
- C. 700
- D. 70

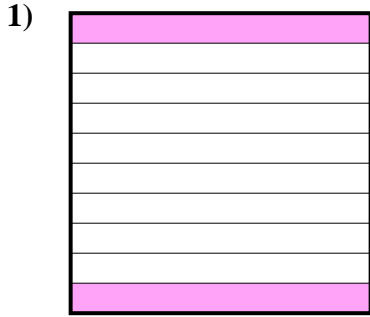
Réponses

- 1. **D**
- 2. **C**
- 3. **B**
- 4. **D**
- 5. **D**
- 6. **A**
- 7. **C**
- 8. **D**
- 9. **A**

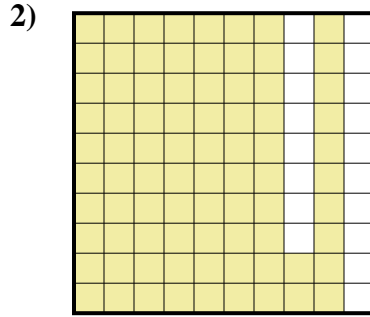


Déterminez quelle lettre représente le mieux la valeur colorée relative à la figure.

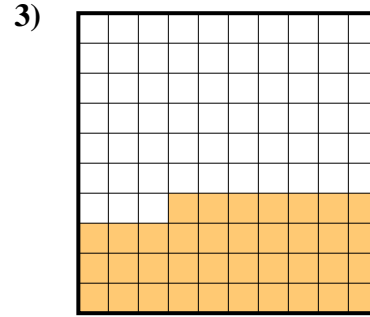
Réponses



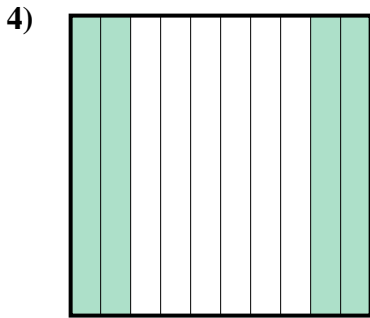
- A. 200
- B. 0,02
- C. 20
- D. 0,2



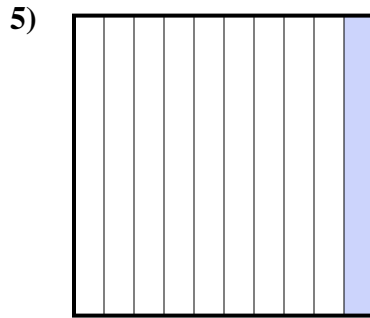
- A. 0,82
- B. 8,2
- C. 0,082
- D. 820



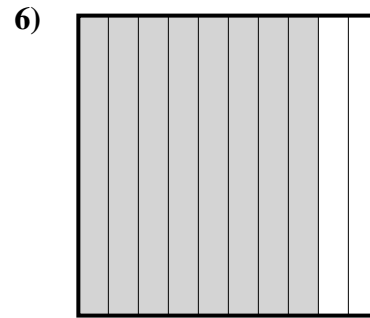
- A. 0,37
- B. 37
- C. 3,7
- D. 370



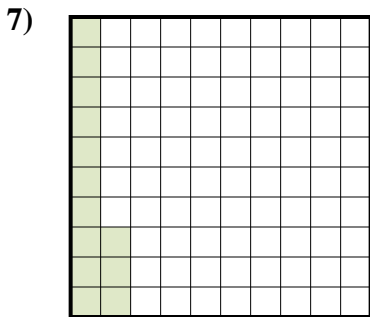
- A. 400
- B. 0,4
- C. 4
- D. 40



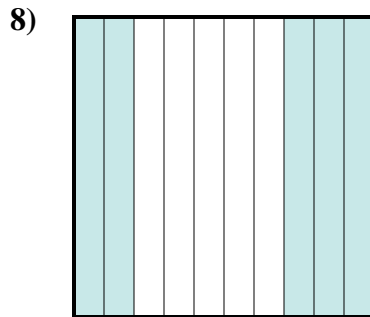
- A. 100
- B. 0,1
- C. 10
- D. 1



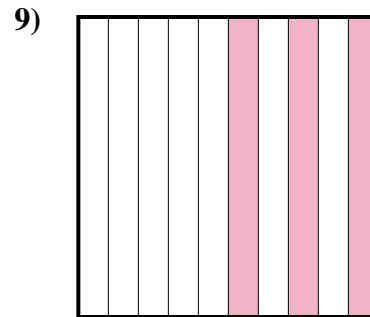
- A. 80
- B. 0,8
- C. 800
- D. 8



- A. 0,013
- B. 0,13
- C. 1,3
- D. 130



- A. 5
- B. 50
- C. 0,5
- D. 0,05

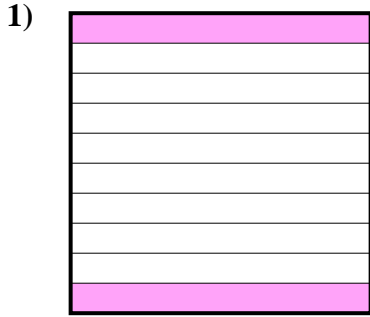


- A. 0,03
- B. 30
- C. 0,3
- D. 3

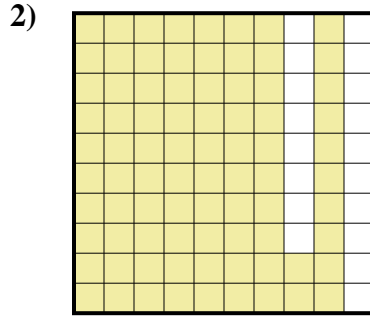
- 1. _____
- 2. _____
- 3. _____
- 4. _____
- 5. _____
- 6. _____
- 7. _____
- 8. _____
- 9. _____



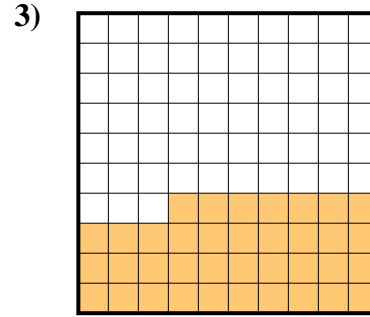
Déterminez quelle lettre représente le mieux la valeur colorée relative à la figure.



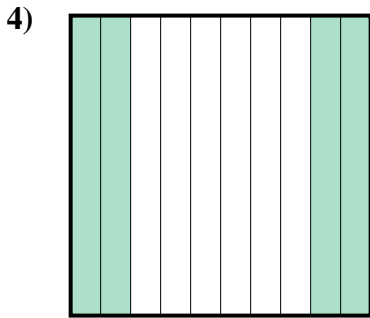
- A. 200
- B. 0,02
- C. 20
- D. 0,2



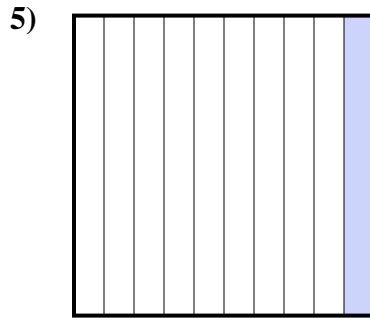
- A. 0,82
- B. 8,2
- C. 0,082
- D. 820



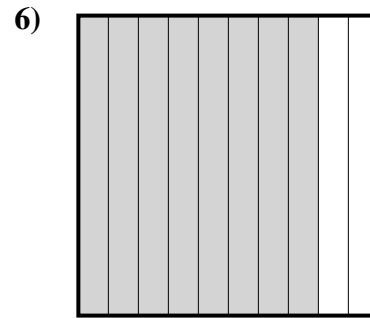
- A. 0,37
- B. 37
- C. 3,7
- D. 370



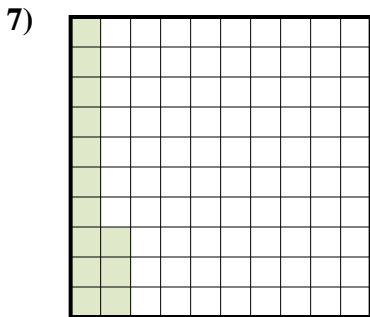
- A. 400
- B. 0,4
- C. 4
- D. 40



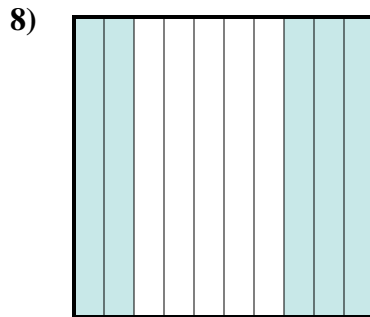
- A. 100
- B. 0,1
- C. 10
- D. 1



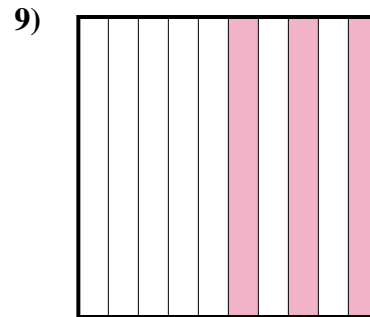
- A. 80
- B. 0,8
- C. 800
- D. 8



- A. 0,013
- B. 0,13
- C. 1,3
- D. 130



- A. 5
- B. 50
- C. 0,5
- D. 0,05



- A. 0,03
- B. 30
- C. 0,3
- D. 3

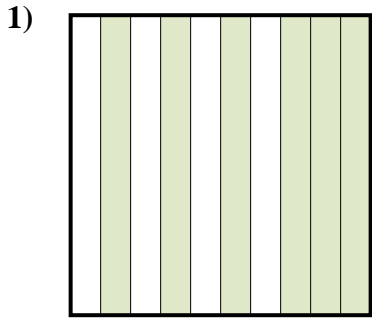
Réponses

- 1. **D**
- 2. **A**
- 3. **A**
- 4. **B**
- 5. **B**
- 6. **B**
- 7. **B**
- 8. **C**
- 9. **C**

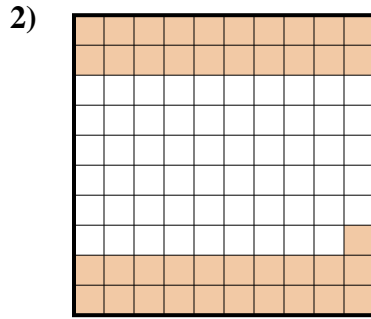


Déterminez quelle lettre représente le mieux la valeur colorée relative à la figure.

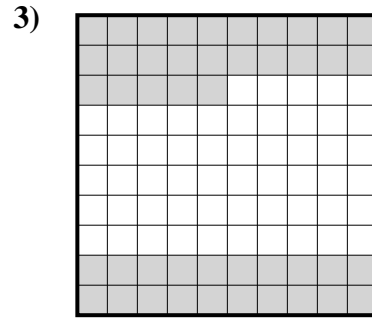
Réponses



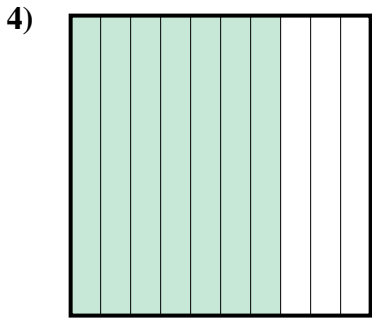
- A. 60
- B. 0,6
- C. 600
- D. 6




- A. 410
- B. 0,41
- C. 41
- D. 4,1



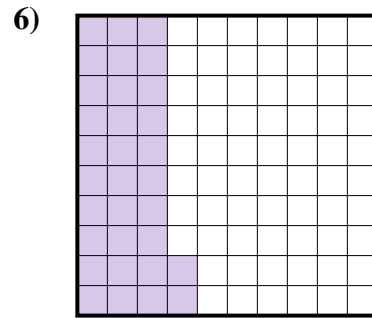
- A. 4,5
- B. 0,045
- C. 0,45
- D. 45



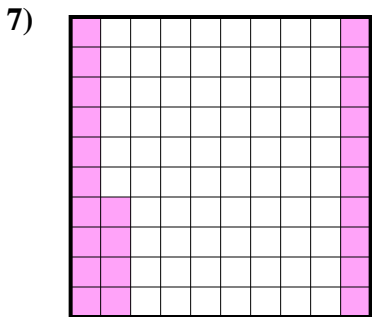
- A. 7
- B. 0,7
- C. 700
- D. 0,07



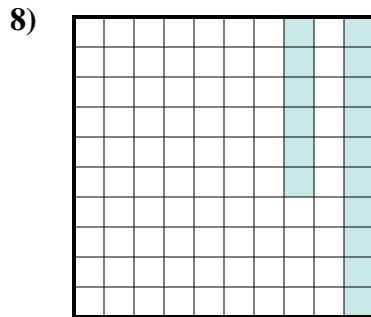
- A. 90
- B. 0,9
- C. 0,09
- D. 9



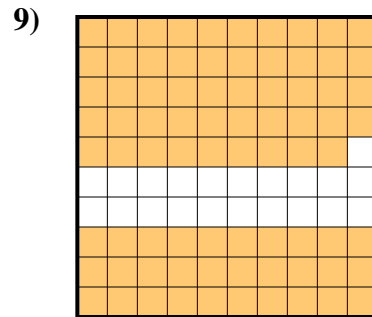
- A. 3,2
- B. 0,032
- C. 320
- D. 0,32



- A. 240
- B. 24
- C. 0,024
- D. 0,24



- A. 0,016
- B. 160
- C. 0,16
- D. 16

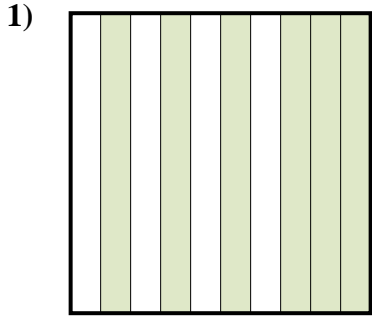


- A. 79
- B. 0,79
- C. 0,079
- D. 7,9

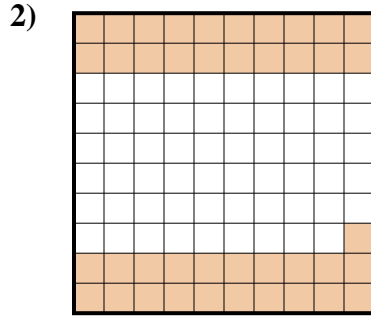
- 1. _____
- 2. _____
- 3. _____
- 4. _____
- 5. _____
- 6. _____
- 7. _____
- 8. _____
- 9. _____



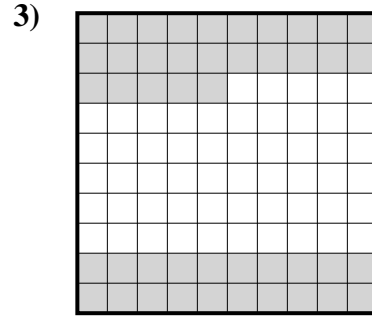
Déterminez quelle lettre représente le mieux la valeur colorée relative à la figure.



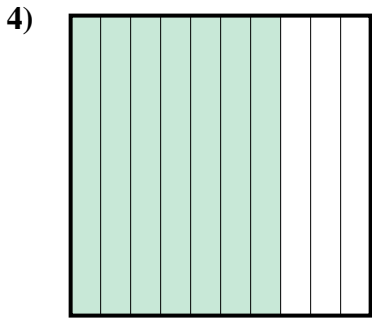
- A. 60
- B. 0,6
- C. 600
- D. 6




- A. 410
- B. 0,41
- C. 41
- D. 4,1



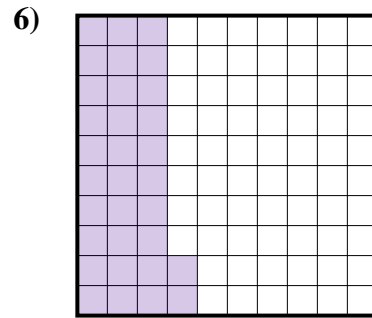
- A. 4,5
- B. 0,045
- C. 0,45
- D. 45



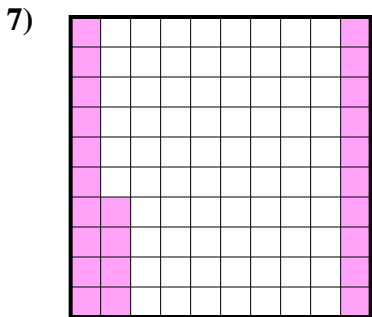
- A. 7
- B. 0,7
- C. 700
- D. 0,07



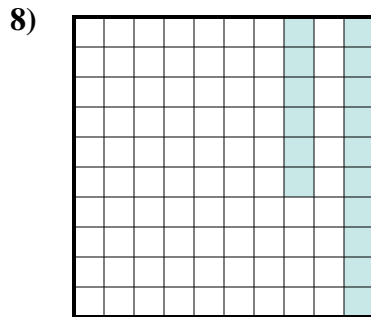
- A. 90
- B. 0,9
- C. 0,09
- D. 9



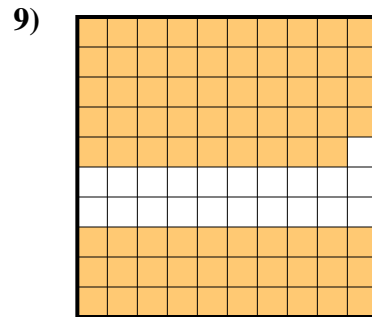
- A. 3,2
- B. 0,032
- C. 320
- D. 0,32



- A. 240
- B. 24
- C. 0,024
- D. 0,24



- A. 0,016
- B. 160
- C. 0,16
- D. 16



- A. 79
- B. 0,79
- C. 0,079
- D. 7,9

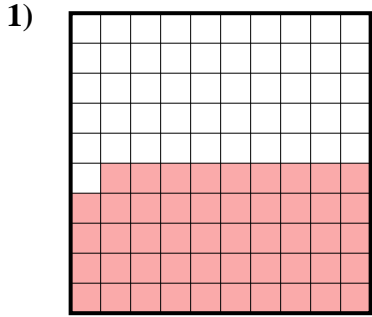
Réponses

- 1. **B**
- 2. **B**
- 3. **C**
- 4. **B**
- 5. **B**
- 6. **D**
- 7. **D**
- 8. **C**
- 9. **B**




Déterminez quelle lettre représente le mieux la valeur colorée relative à la figure.

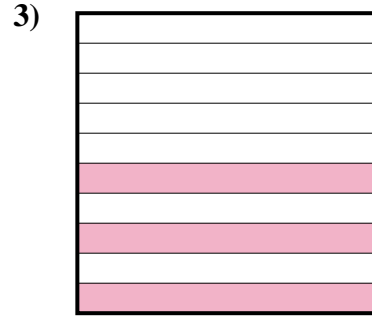
Réponses



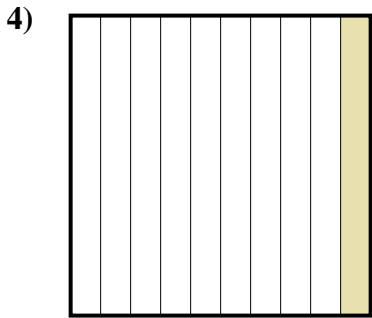
- A. 0,49
- B. 4,9
- C. 0,049
- D. 490



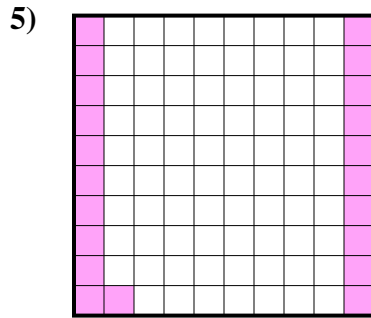
- A. 800
- B. 0,8
- C. 80
- D. 0,08



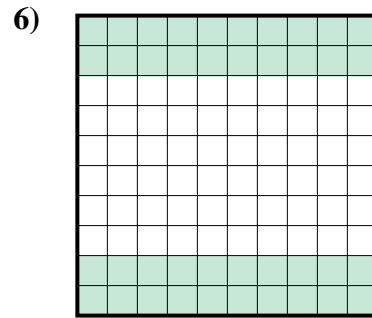
- A. 0,03
- B. 300
- C. 0,3
- D. 3



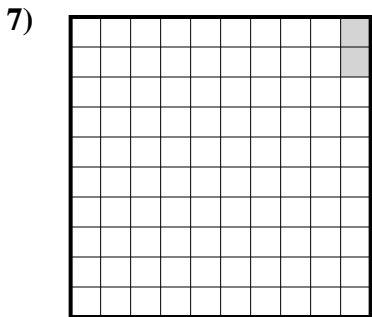
- A. 10
- B. 100
- C. 1
- D. 0,1



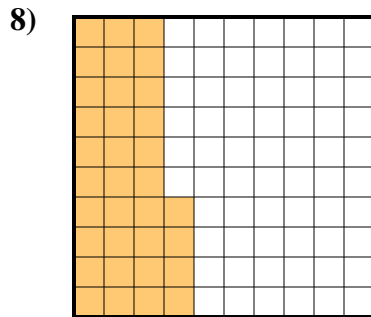
- A. 21
- B. 210
- C. 0,21
- D. 0,021



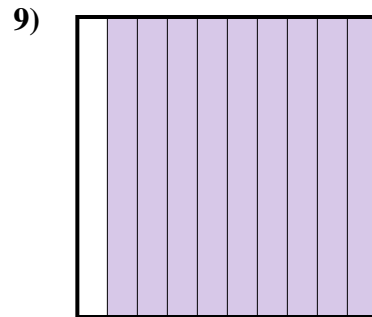
- A. 0,4
- B. 0,04
- C. 400
- D. 40



- A. 0,2
- B. 20
- C. 0,02
- D. 0,002



- A. 0,034
- B. 0,34
- C. 34
- D. 340

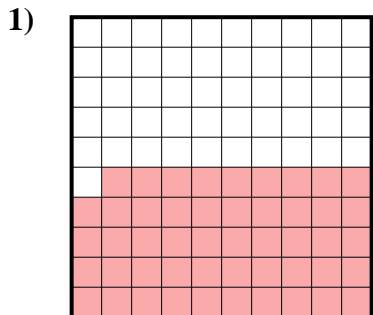


- A. 0,09
- B. 0,9
- C. 900
- D. 9


- 1. _____
- 2. _____
- 3. _____
- 4. _____
- 5. _____
- 6. _____
- 7. _____
- 8. _____
- 9. _____




Déterminez quelle lettre représente le mieux la valeur colorée relative à la figure.



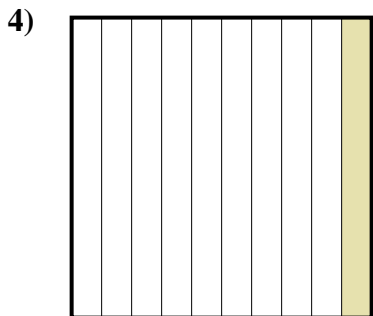
- A. 0,49
- B. 4,9
- C. 0,049
- D. 490



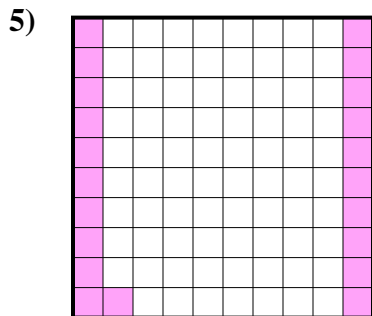
- A. 800
- B. 0,8
- C. 80
- D. 0,08



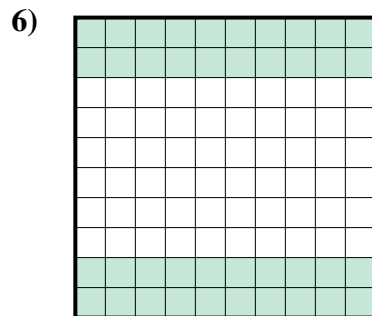
- A. 0,03
- B. 300
- C. 0,3
- D. 3



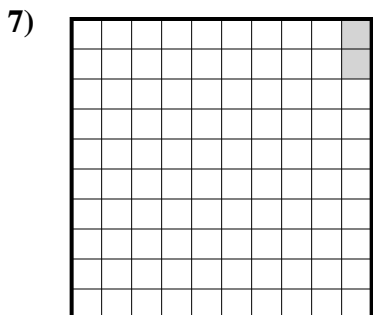
- A. 10
- B. 100
- C. 1
- D. 0,1



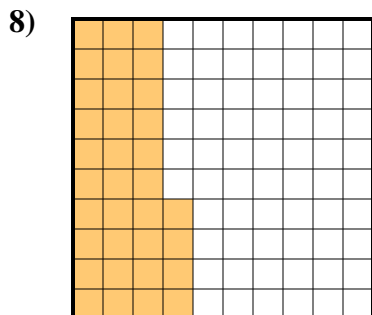
- A. 21
- B. 210
- C. 0,21
- D. 0,021



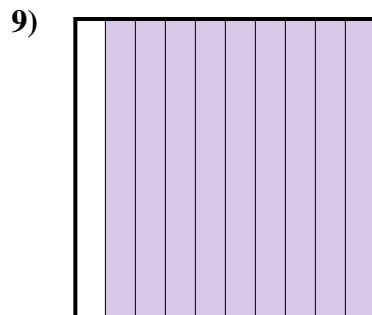
- A. 0,4
- B. 0,04
- C. 400
- D. 40



- A. 0,2
- B. 20
- C. 0,02
- D. 0,002



- A. 0,034
- B. 0,34
- C. 34
- D. 340



- A. 0,09
- B. 0,9
- C. 900
- D. 9

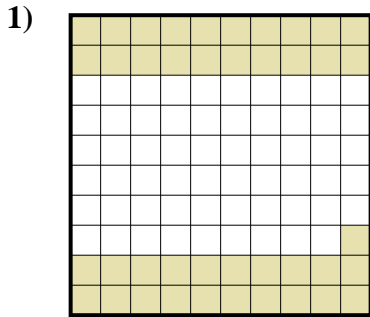
Réponses

- 1. **A**
- 2. **B**
- 3. **C**
- 4. **D**
- 5. **C**
- 6. **A**
- 7. **C**
- 8. **B**
- 9. **B**

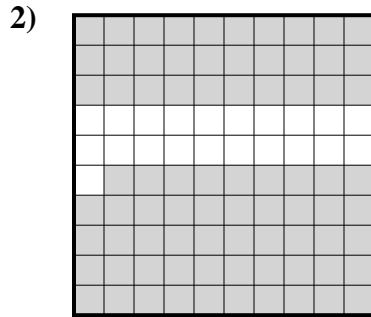


Déterminez quelle lettre représente le mieux la valeur colorée relative à la figure.

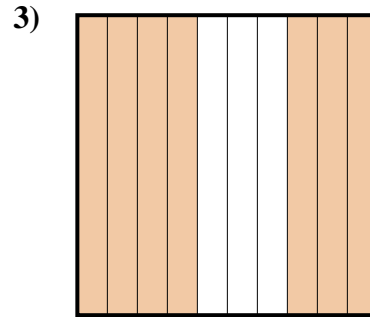
Réponses



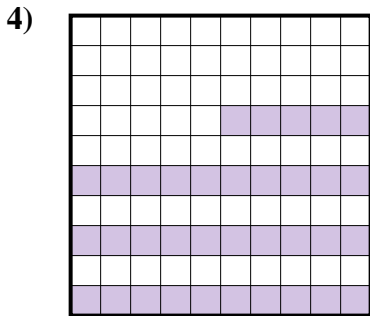
- A. 0,41
- B. 4,1
- C. 410
- D. 0,041



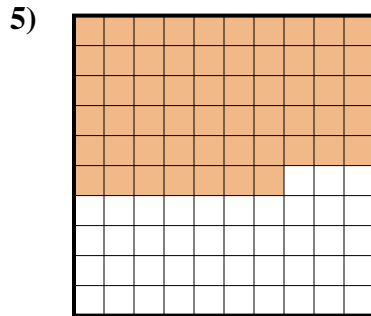
- A. 0,79
- B. 7,9
- C. 79
- D. 0,079



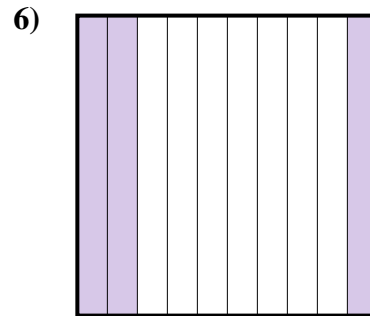
- A. 0,7
- B. 70
- C. 7
- D. 0,07



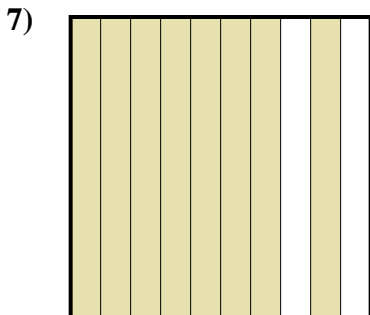
- A. 3,5
- B. 350
- C. 0,35
- D. 0,035



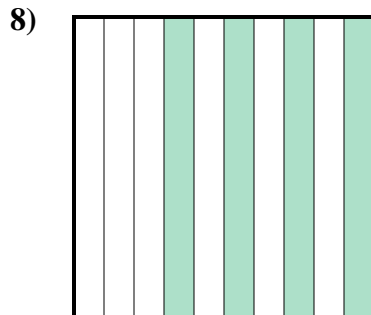
- A. 5,7
- B. 0,057
- C. 0,57
- D. 57



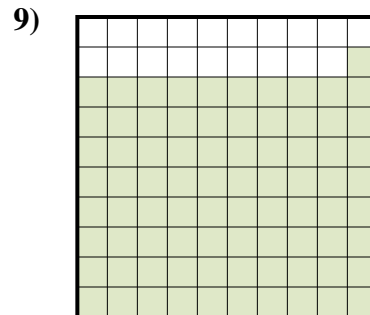
- A. 30
- B. 0,03
- C. 300
- D. 0,3



- A. 80
- B. 0,08
- C. 8
- D. 0,8



- A. 40
- B. 400
- C. 0,4
- D. 0,04



- A. 0,81
- B. 810
- C. 0,081
- D. 8,1

1. _____

2. _____

3. _____

4. _____

5. _____

6. _____

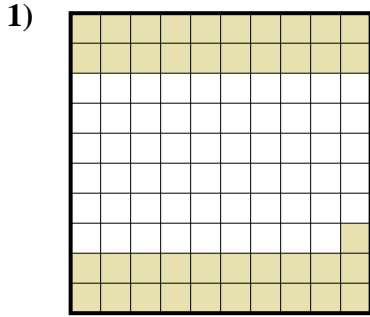
7. _____

8. _____

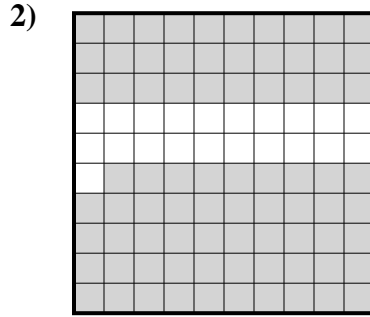
9. _____



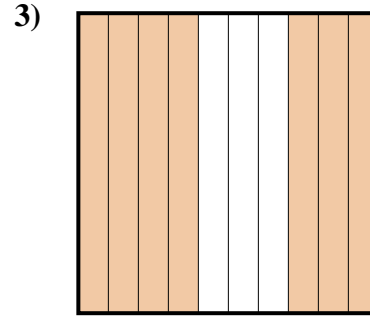
Déterminez quelle lettre représente le mieux la valeur colorée relative à la figure.



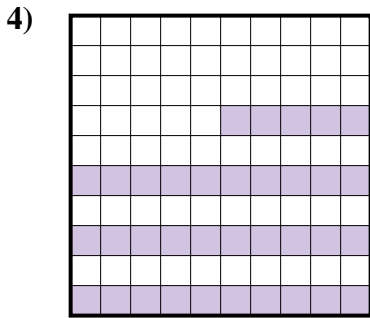
- A. 0,41
- B. 4,1
- C. 410
- D. 0,041



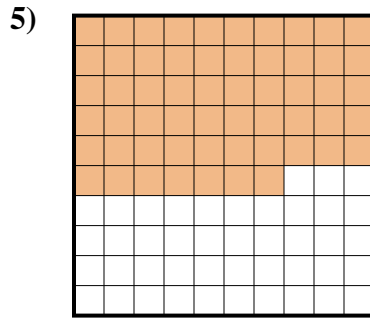
- A. 0,79
- B. 7,9
- C. 79
- D. 0,079



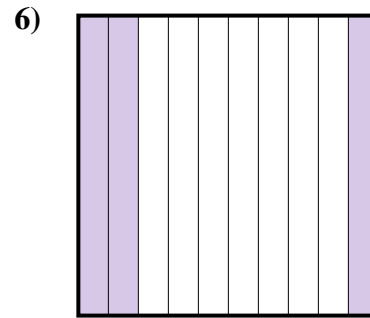
- A. 0,7
- B. 70
- C. 7
- D. 0,07



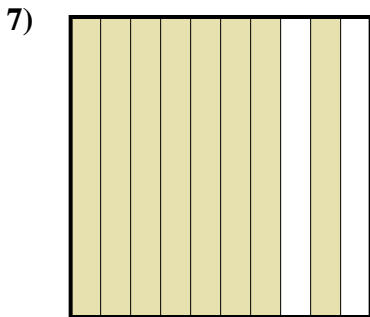
- A. 3,5
- B. 350
- C. 0,35
- D. 0,035



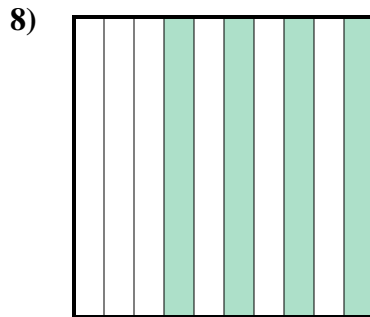
- A. 5,7
- B. 0,057
- C. 0,57
- D. 57



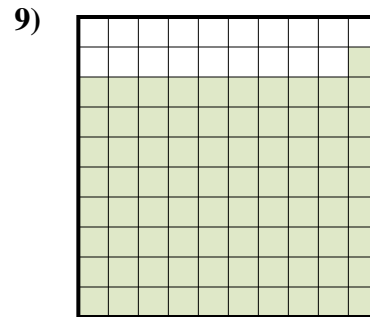
- A. 30
- B. 0,03
- C. 300
- D. 0,3



- A. 80
- B. 0,08
- C. 8
- D. 0,8



- A. 40
- B. 400
- C. 0,4
- D. 0,04



- A. 0,81
- B. 810
- C. 0,081
- D. 8,1

Réponses

- 1. **A**
- 2. **A**
- 3. **A**
- 4. **C**
- 5. **C**
- 6. **D**
- 7. **D**
- 8. **C**
- 9. **A**