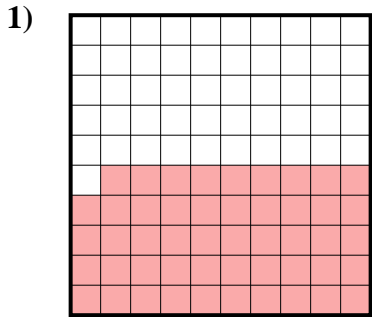





Déterminez quelle lettre représente le mieux la valeur colorée relative à la figure.


**Réponses**



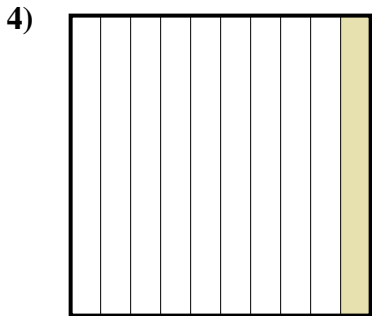
- A. 0,49
- B. 4,9
- C. 0,049
- D. 490



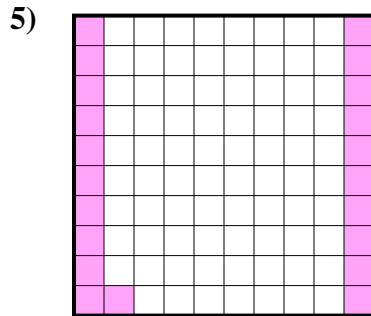
- A. 800
- B. 0,8
- C. 80
- D. 0,08



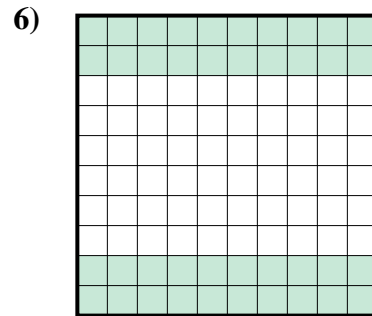
- A. 0,03
- B. 300
- C. 0,3
- D. 3




- A. 10
- B. 100
- C. 1
- D. 0,1



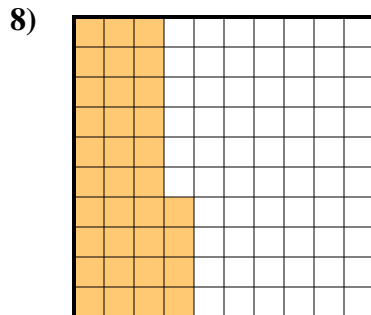
- A. 21
- B. 210
- C. 0,21
- D. 0,021



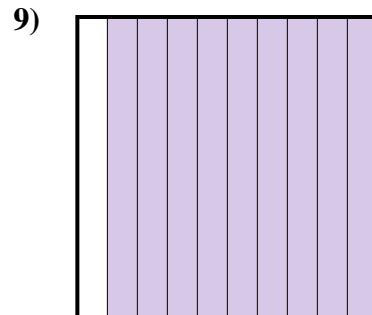
- A. 0,4
- B. 0,04
- C. 400
- D. 40



- A. 0,2
- B. 20
- C. 0,02
- D. 0,002



- A. 0,034
- B. 0,34
- C. 34
- D. 340



- A. 0,09
- B. 0,9
- C. 900
- D. 9

1. \_\_\_\_\_

2. \_\_\_\_\_

3. \_\_\_\_\_

4. \_\_\_\_\_

5. \_\_\_\_\_

6. \_\_\_\_\_

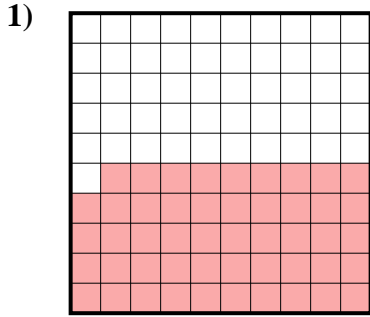
7. \_\_\_\_\_

8. \_\_\_\_\_


9. \_\_\_\_\_



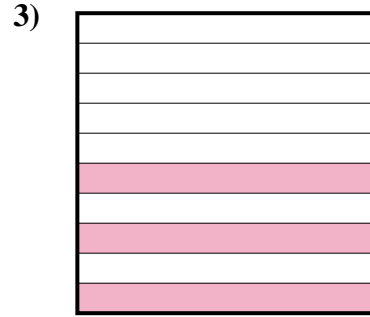
Déterminez quelle lettre représente le mieux la valeur colorée relative à la figure.



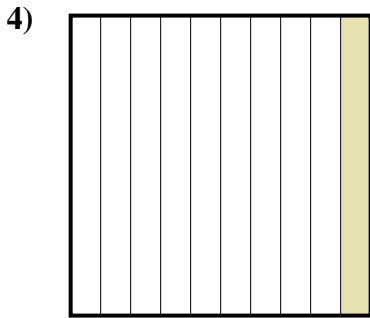
- A. 0,49
- B. 4,9
- C. 0,049
- D. 490



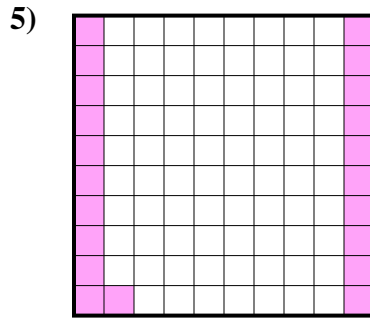
- A. 800
- B. 0,8
- C. 80
- D. 0,08



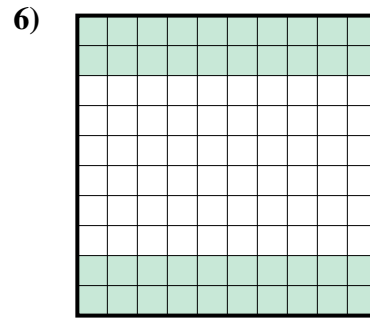
- A. 0,03
- B. 300
- C. 0,3
- D. 3



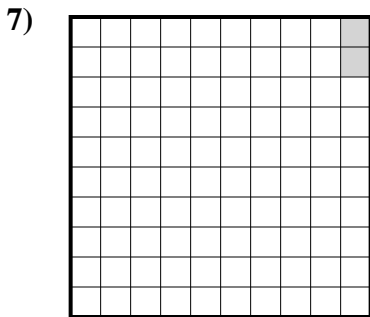
- A. 10
- B. 100
- C. 1
- D. 0,1



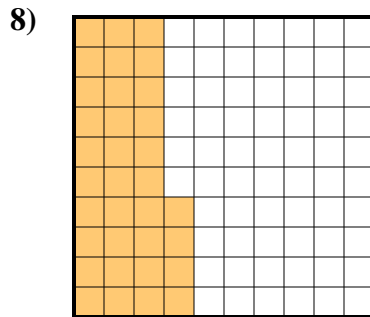
- A. 21
- B. 210
- C. 0,21
- D. 0,021



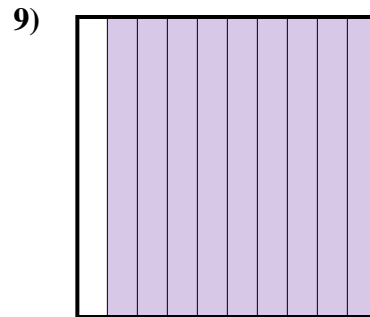
- A. 0,4
- B. 0,04
- C. 400
- D. 40



- A. 0,2
- B. 20
- C. 0,02
- D. 0,002



- A. 0,034
- B. 0,34
- C. 34
- D. 340



- A. 0,09
- B. 0,9
- C. 900
- D. 9

**Réponses**

- 1.     **A**
- 2.     **B**
- 3.     **C**
- 4.     **D**
- 5.     **C**
- 6.     **A**
- 7.     **C**
- 8.     **B**
- 9.     **B**