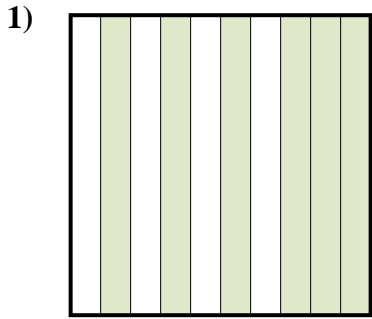


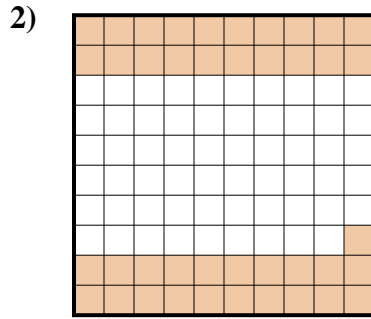


Déterminez quelle lettre représente le mieux la valeur colorée relative à la figure.

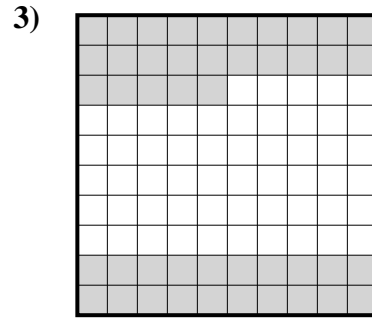
Réponses



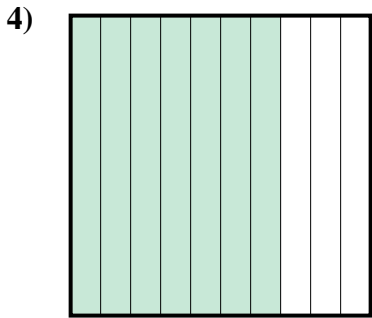
- A. 60
- B. 0,6
- C. 600
- D. 6




- A. 410
- B. 0,41
- C. 41
- D. 4,1



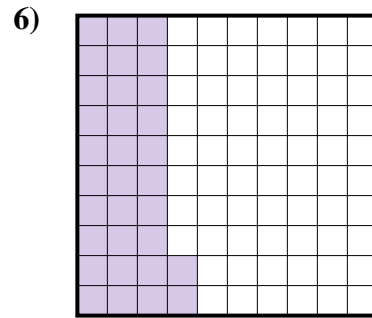
- A. 4,5
- B. 0,045
- C. 0,45
- D. 45



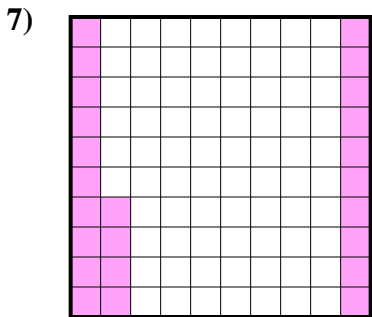
- A. 7
- B. 0,7
- C. 700
- D. 0,07



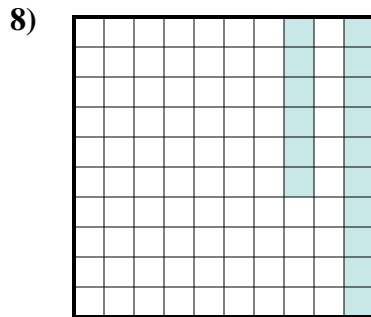
- A. 90
- B. 0,9
- C. 0,09
- D. 9



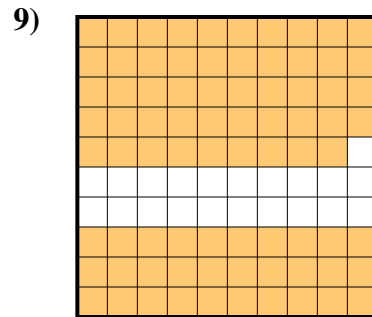
- A. 3,2
- B. 0,032
- C. 320
- D. 0,32



- A. 240
- B. 24
- C. 0,024
- D. 0,24



- A. 0,016
- B. 160
- C. 0,16
- D. 16

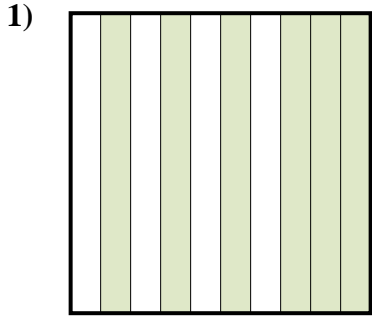


- A. 79
- B. 0,79
- C. 0,079
- D. 7,9

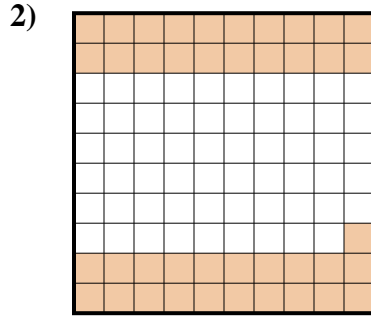
- 1. _____
- 2. _____
- 3. _____
- 4. _____
- 5. _____
- 6. _____
- 7. _____
- 8. _____
- 9. _____



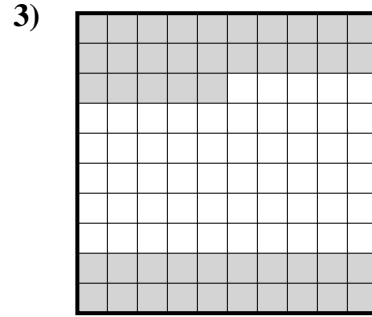
Déterminez quelle lettre représente le mieux la valeur colorée relative à la figure.



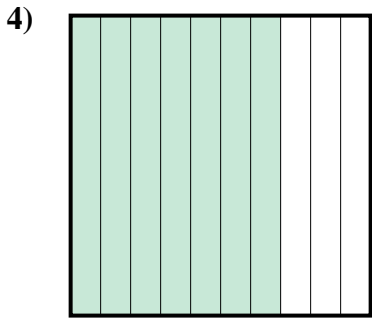
- A. 60
- B. 0,6
- C. 600
- D. 6




- A. 410
- B. 0,41
- C. 41
- D. 4,1



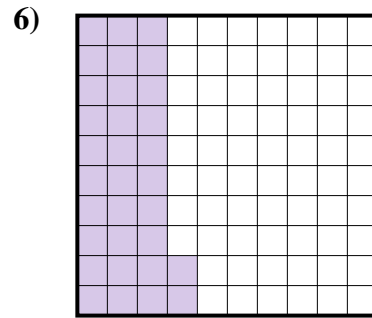
- A. 4,5
- B. 0,045
- C. 0,45
- D. 45



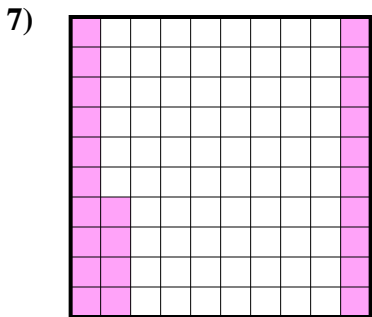
- A. 7
- B. 0,7
- C. 700
- D. 0,07



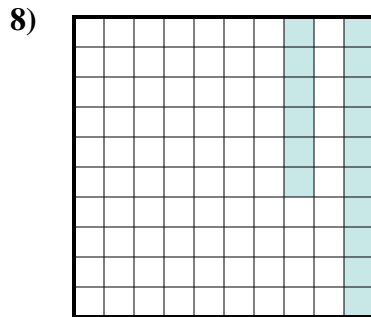
- A. 90
- B. 0,9
- C. 0,09
- D. 9



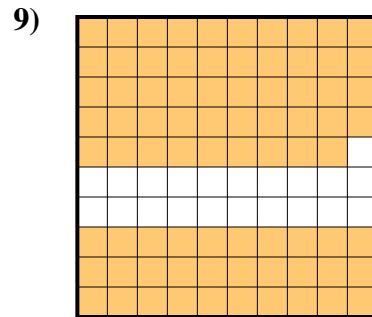
- A. 3,2
- B. 0,032
- C. 320
- D. 0,32



- A. 240
- B. 24
- C. 0,024
- D. 0,24



- A. 0,016
- B. 160
- C. 0,16
- D. 16



- A. 79
- B. 0,79
- C. 0,079
- D. 7,9

Réponses

- 1. **B**
- 2. **B**
- 3. **C**
- 4. **B**
- 5. **B**
- 6. **D**
- 7. **D**
- 8. **C**
- 9. **B**