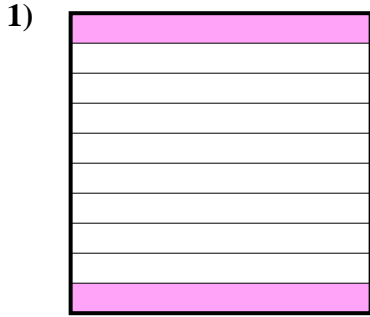


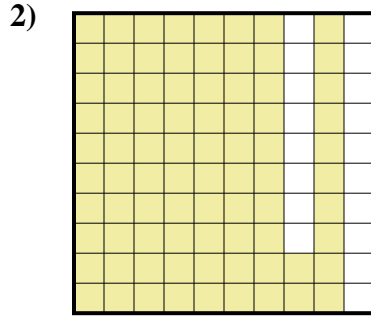


Déterminez quelle lettre représente le mieux la valeur colorée relative à la figure.

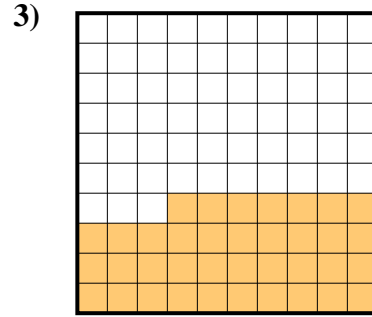
Réponses



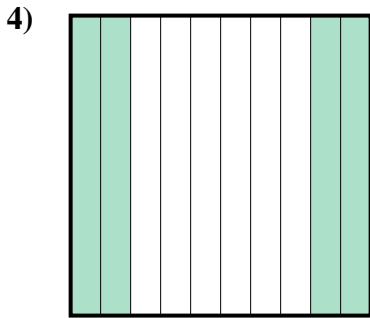
- A. 200
- B. 0,02
- C. 20
- D. 0,2



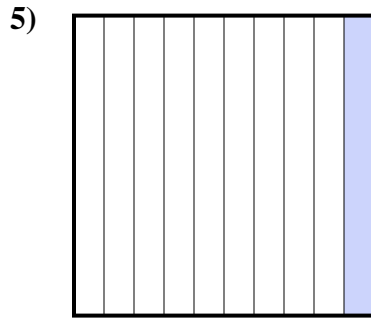
- A. 0,82
- B. 8,2
- C. 0,082
- D. 820



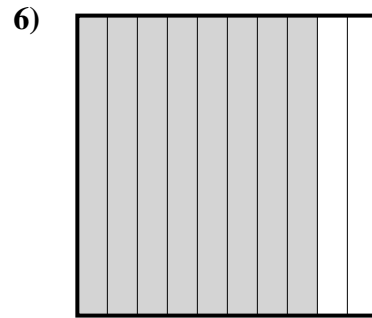
- A. 0,37
- B. 37
- C. 3,7
- D. 370



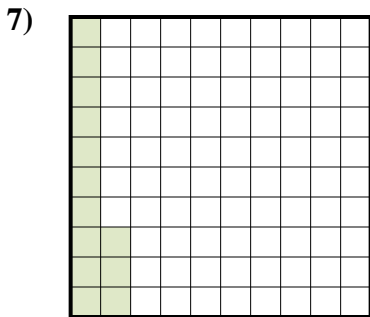
- A. 400
- B. 0,4
- C. 4
- D. 40



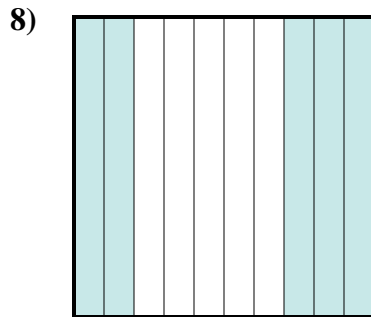
- A. 100
- B. 0,1
- C. 10
- D. 1



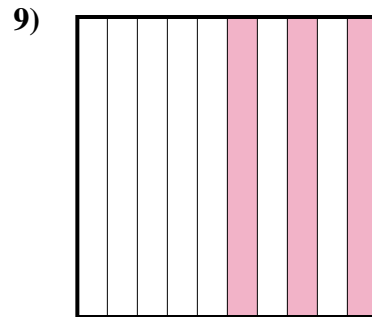
- A. 80
- B. 0,8
- C. 800
- D. 8



- A. 0,013
- B. 0,13
- C. 1,3
- D. 130



- A. 5
- B. 50
- C. 0,5
- D. 0,05




- A. 0,03
- B. 30
- C. 0,3
- D. 3

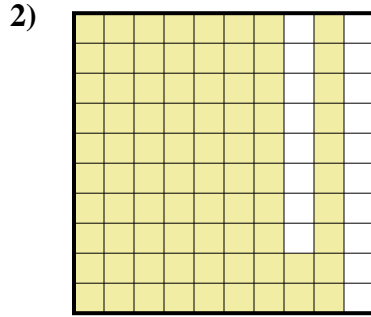
- 1. _____
- 2. _____
- 3. _____
- 4. _____
- 5. _____
- 6. _____
- 7. _____
- 8. _____
- 9. _____



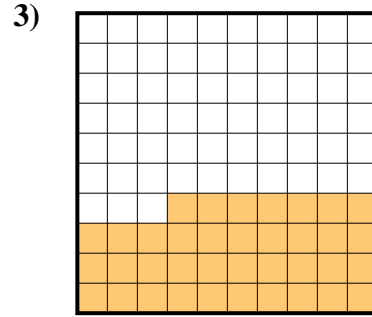
Déterminez quelle lettre représente le mieux la valeur colorée relative à la figure.



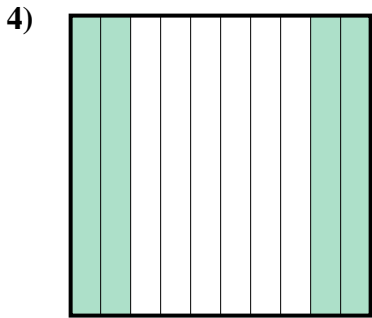
- A. 200
- B. 0,02
- C. 20
- D. 0,2



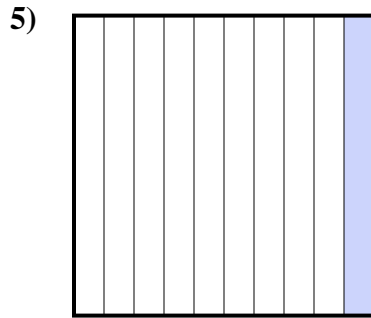
- A. 0,82
- B. 8,2
- C. 0,082
- D. 820



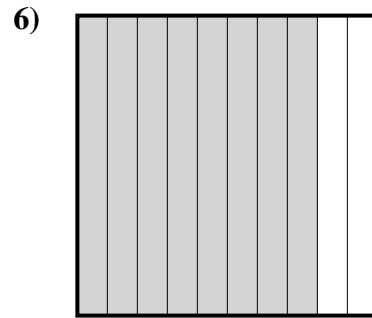
- A. 0,37
- B. 37
- C. 3,7
- D. 370



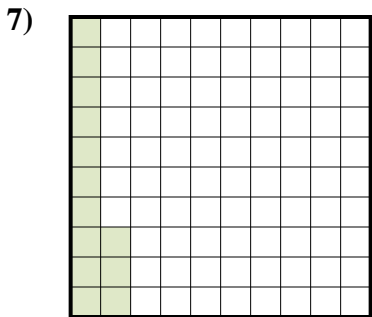
- A. 400
- B. 0,4
- C. 4
- D. 40



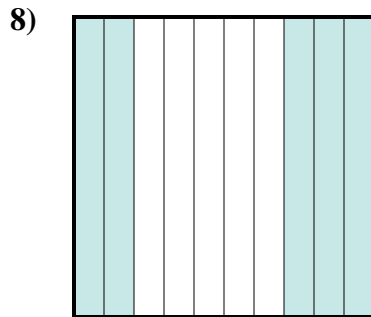
- A. 100
- B. 0,1
- C. 10
- D. 1



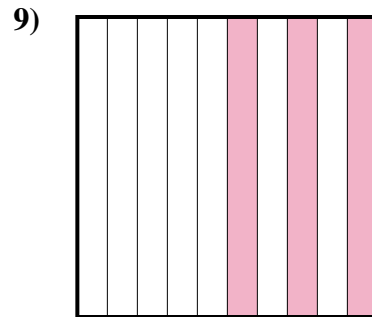
- A. 80
- B. 0,8
- C. 800
- D. 8



- A. 0,013
- B. 0,13
- C. 1,3
- D. 130



- A. 5
- B. 50
- C. 0,5
- D. 0,05



- A. 0,03
- B. 30
- C. 0,3
- D. 3

Réponses

- 1. **D**
- 2. **A**
- 3. **A**
- 4. **B**
- 5. **B**
- 6. **B**
- 7. **B**
- 8. **C**
- 9. **C**