





Déterminez quelle lettre représente le mieux la valeur colorée relative à la figure.

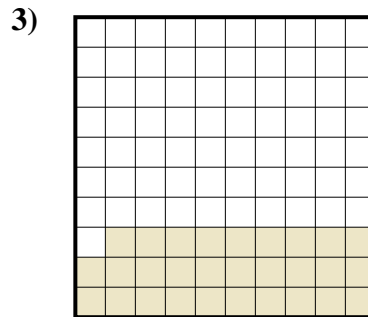
Réponses



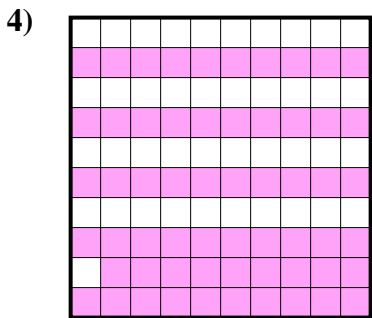
- A. 0,01
- B. 1
- C. 10
- D. 0,1



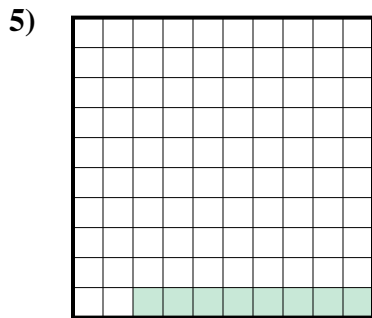
- A. 50
- B. 5
- C. 0,5
- D. 500



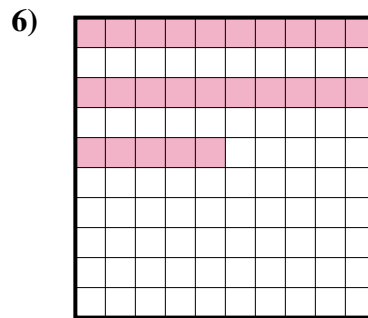
- A. 290
- B. 0,29
- C. 2,9
- D. 29



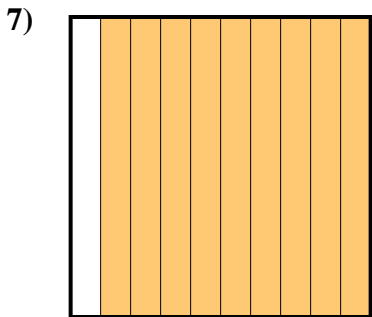
- A. 0,059
- B. 590
- C. 5,9
- D. 0,59




- A. 0,8
- B. 0,008
- C. 8
- D. 0,08



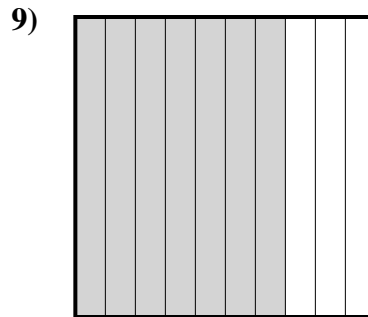
- A. 0,25
- B. 25
- C. 0,025
- D. 250



- A. 900
- B. 9
- C. 0,9
- D. 0,09



- A. 0,04
- B. 400
- C. 4
- D. 0,4




- A. 0,7
- B. 7
- C. 700
- D. 70

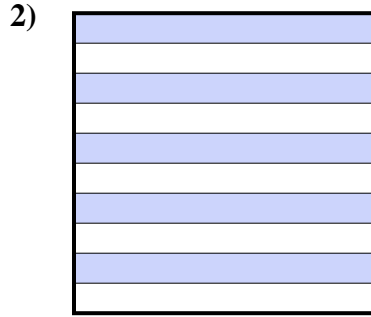
- 1. _____
- 2. _____
- 3. _____
- 4. _____
- 5. _____
- 6. _____
- 7. _____
- 8. _____
- 9. _____



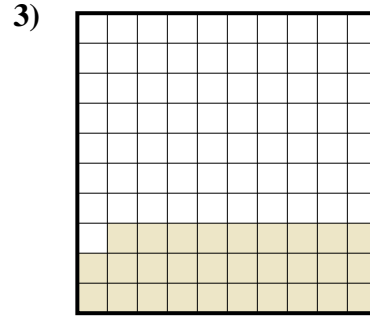
Déterminez quelle lettre représente le mieux la valeur colorée relative à la figure.



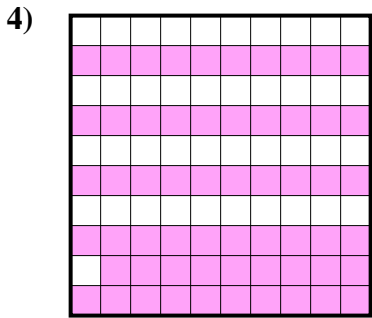
- A. 0,01
- B. 1
- C. 10
- D. 0,1



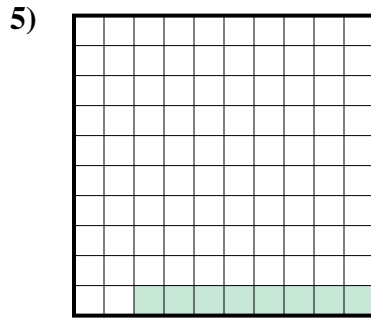
- A. 50
- B. 5
- C. 0,5
- D. 500



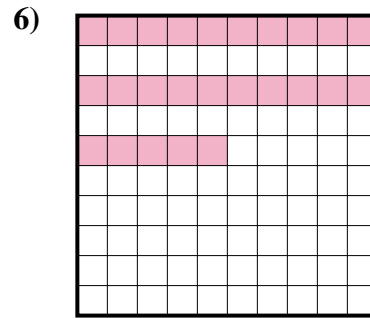
- A. 290
- B. 0,29
- C. 2,9
- D. 29



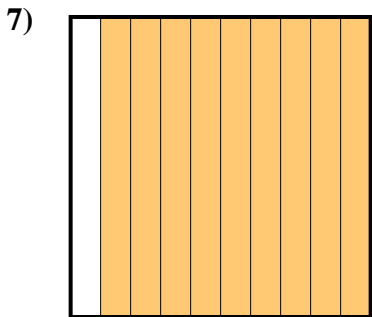
- A. 0,059
- B. 590
- C. 5,9
- D. 0,59




- A. 0,8
- B. 0,008
- C. 8
- D. 0,08



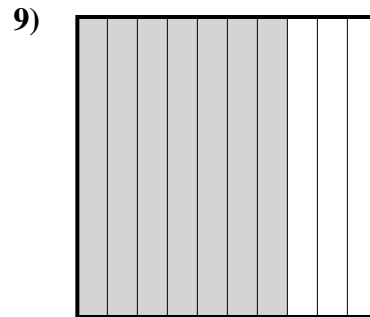
- A. 0,25
- B. 25
- C. 0,025
- D. 250



- A. 900
- B. 9
- C. 0,9
- D. 0,09



- A. 0,04
- B. 400
- C. 4
- D. 0,4



- A. 0,7
- B. 7
- C. 700
- D. 70

Réponses

- 1. **D**
- 2. **C**
- 3. **B**
- 4. **D**
- 5. **D**
- 6. **A**
- 7. **C**
- 8. **D**
- 9. **A**