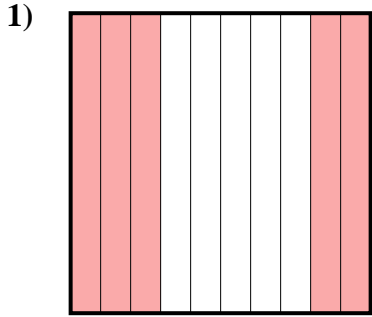


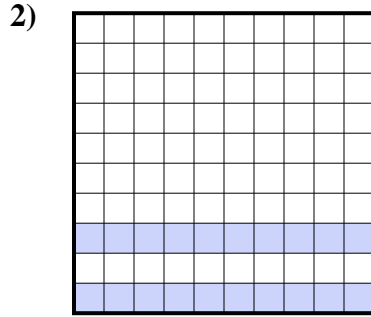


Déterminez quelle lettre représente le mieux la valeur colorée relative à la figure.

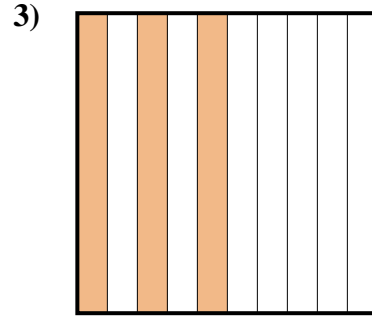
Réponses



- A. 5
- B. 0,5
- C. 0,05
- D. 50



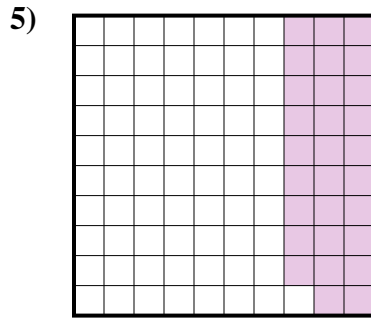
- A. 0,2
- B. 2
- C. 20
- D. 0,02



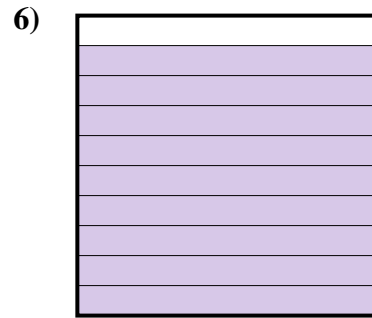
- A. 0,3
- B. 30
- C. 300
- D. 3



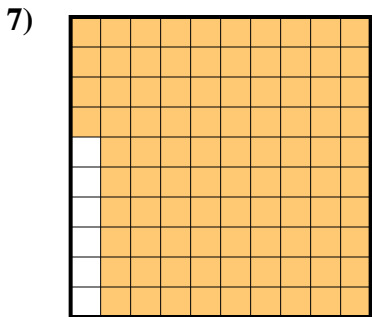
- A. 0,08
- B. 800
- C. 0,8
- D. 80



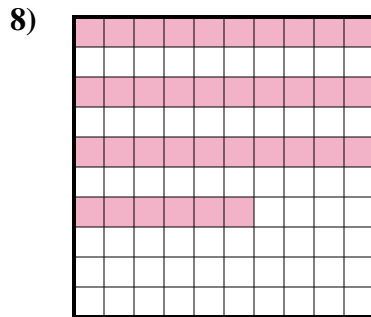
- A. 0,29
- B. 290
- C. 2,9
- D. 29



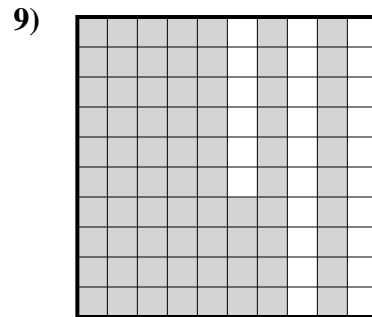
- A. 90
- B. 900
- C. 0,09
- D. 0,9



- A. 0,94
- B. 94
- C. 940
- D. 9,4



- A. 3,6
- B. 0,36
- C. 0,036
- D. 360

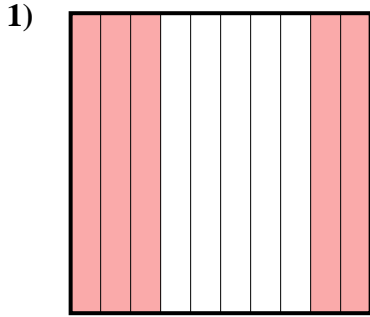


- A. 74
- B. 0,74
- C. 7,4
- D. 740

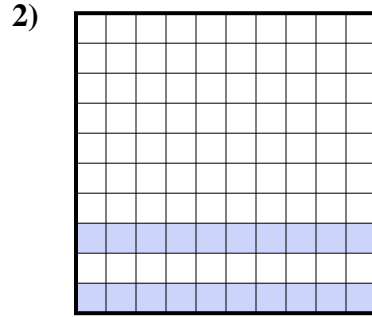
- 1. _____
- 2. _____
- 3. _____
- 4. _____
- 5. _____
- 6. _____
- 7. _____
- 8. _____
- 9. _____



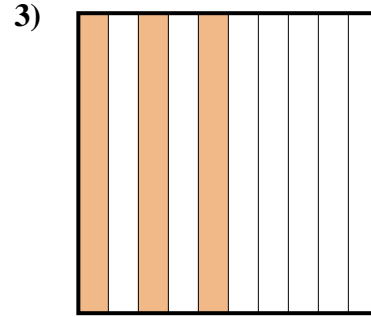
Déterminez quelle lettre représente le mieux la valeur colorée relative à la figure.




- A. 5
B. 0,5
C. 0,05
D. 50



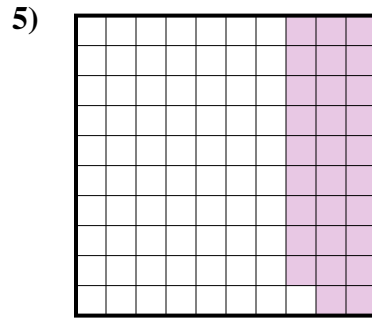
- A. 0,2
B. 2
C. 20
D. 0,02



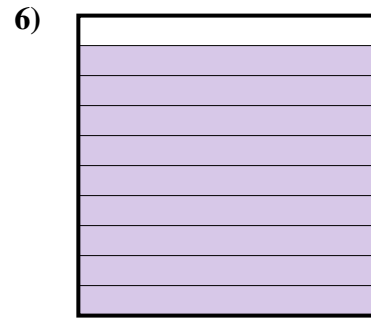
- A. 0,3
B. 30
C. 300
D. 3



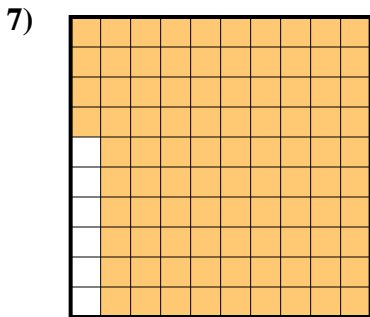
- A. 0,08
B. 800
C. 0,8
D. 80



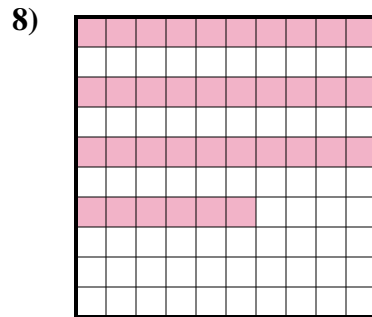
- A. 0,29
B. 290
C. 2,9
D. 29



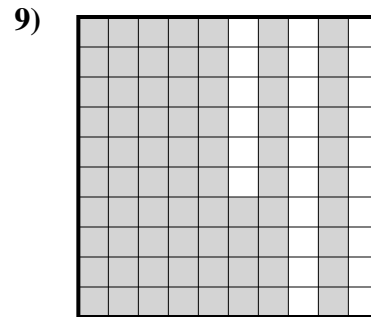
- A. 90
B. 900
C. 0,09
D. 0,9



- A. 0,94
B. 94
C. 940
D. 9,4



- A. 3,6
B. 0,36
C. 0,036
D. 360



- A. 74
B. 0,74
C. 7,4
D. 740

Réponses

1. **B**
2. **A**
3. **A**
4. **C**
5. **A**
6. **D**
7. **A**
8. **B**
9. **B**