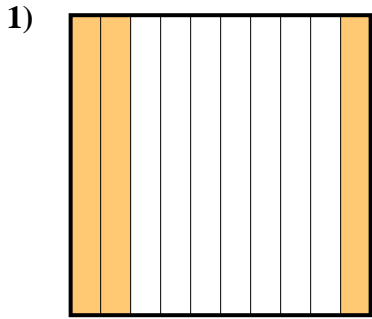


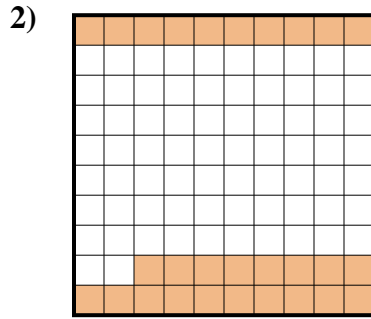


Déterminez quelle lettre représente le mieux la valeur colorée relative à la figure.

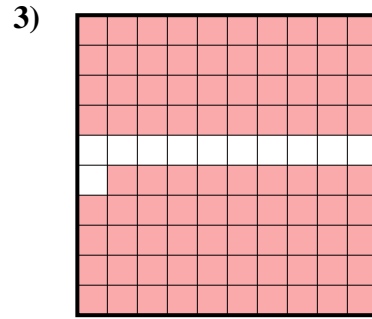
Réponses



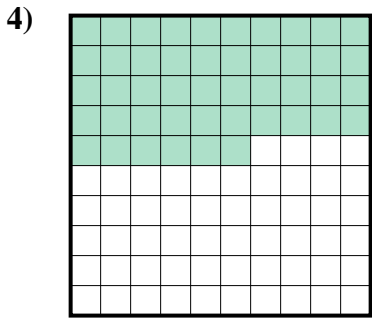
- A. 0,03
- B. 300
- C. 0,3
- D. 3



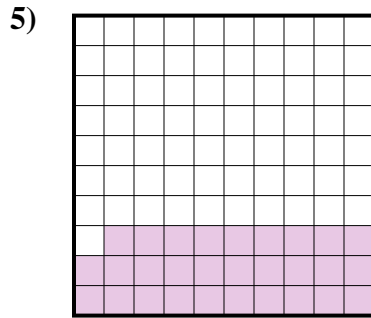
- A. 0,28
- B. 2,8
- C. 28
- D. 280




- A. 89
- B. 0,089
- C. 8,9
- D. 0,89



- A. 460
- B. 0,046
- C. 46
- D. 0,46



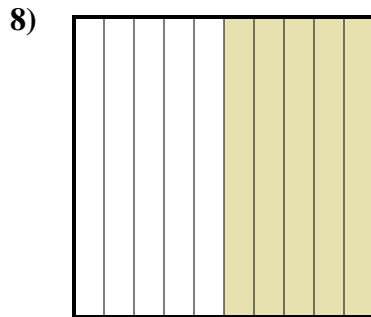
- A. 290
- B. 29
- C. 2,9
- D. 0,29



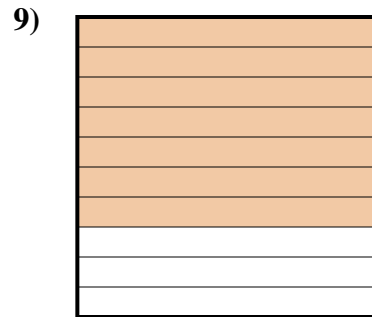
- A. 0,6
- B. 0,06
- C. 6
- D. 600



- A. 800
- B. 8
- C. 0,8
- D. 0,08



- A. 0,5
- B. 0,05
- C. 5
- D. 50



- A. 0,7
- B. 70
- C. 0,07
- D. 700

1. _____

2. _____

3. _____

4. _____

5. _____

6. _____

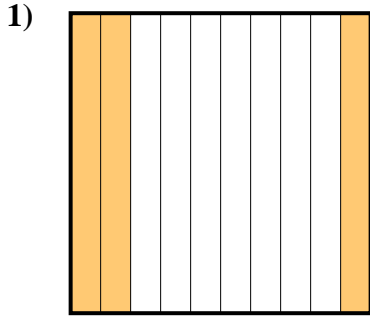
7. _____

8. _____

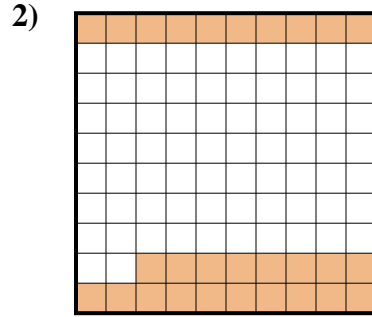
9. _____



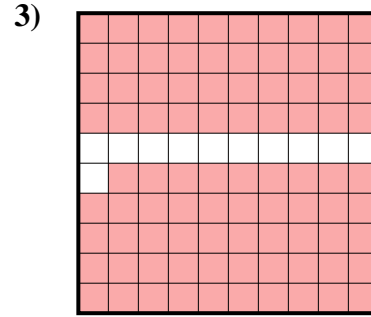
Déterminez quelle lettre représente le mieux la valeur colorée relative à la figure.



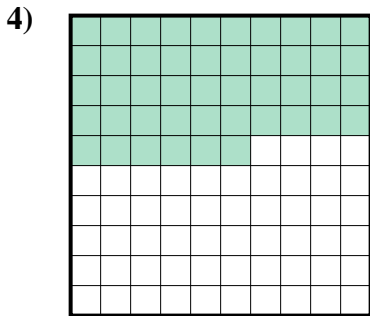
- A. 0,03
B. 300
C. 0,3
D. 3



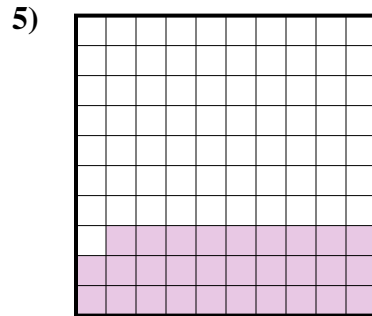
- A. 0,28
B. 2,8
C. 28
D. 280



- A. 89
B. 0,089
C. 8,9
D. 0,89



- A. 460
B. 0,046
C. 46
D. 0,46



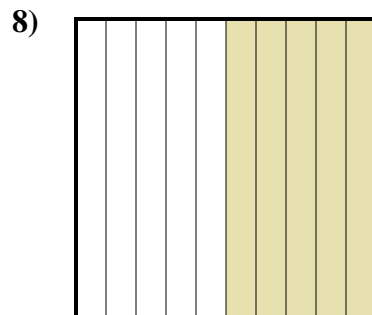
- A. 290
B. 29
C. 2,9
D. 0,29



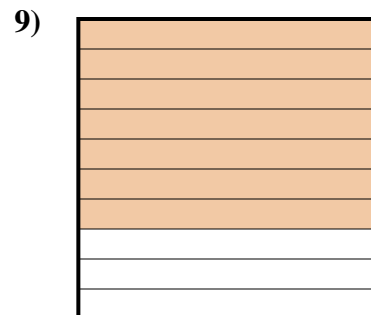
- A. 0,6
B. 0,06
C. 6
D. 600



- A. 800
B. 8
C. 0,8
D. 0,08



- A. 0,5
B. 0,05
C. 5
D. 50



- A. 0,7
B. 70
C. 0,07
D. 700

Réponses

1. **C**
2. **A**
3. **D**
4. **D**
5. **D**
6. **A**
7. **C**
8. **A**
9. **A**