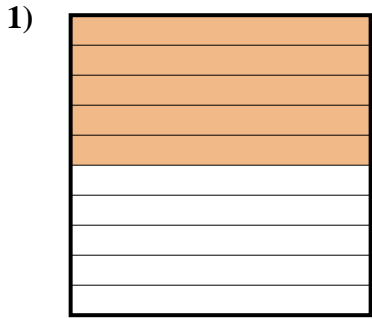


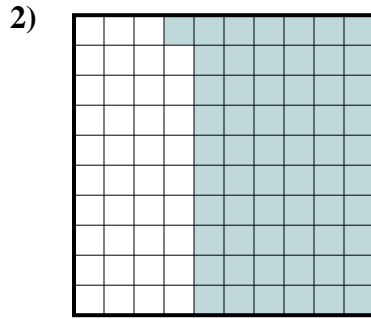


Déterminez quelle lettre représente le mieux la valeur colorée relative à la figure.

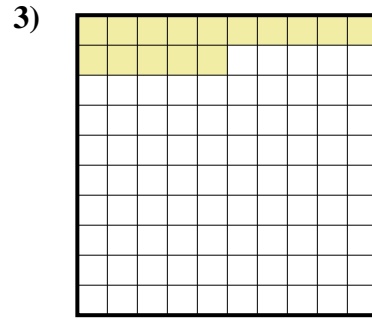
Réponses



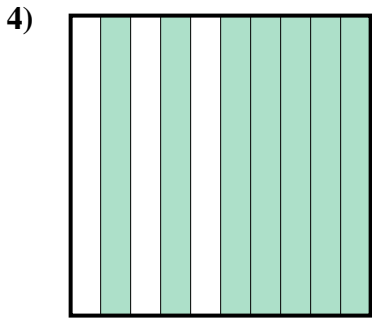
- A. 500
- B. 5
- C. 50
- D. 0,5



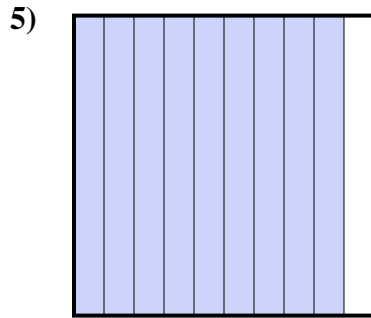
- A. 61
- B. 610
- C. 0,061
- D. 0,61



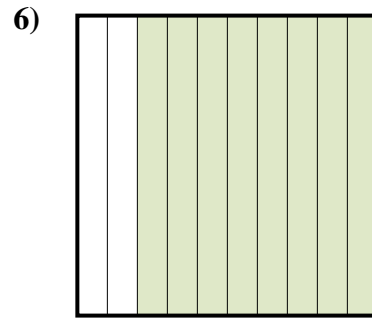
- A. 1,5
- B. 15
- C. 150
- D. 0,15



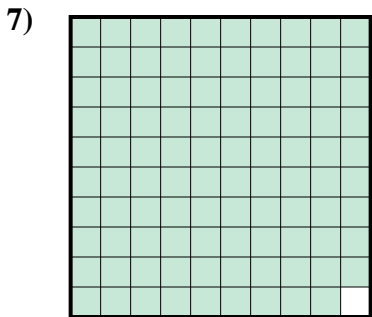
- A. 70
- B. 700
- C. 0,7
- D. 0,07




- A. 0,09
- B. 90
- C. 0,9
- D. 9



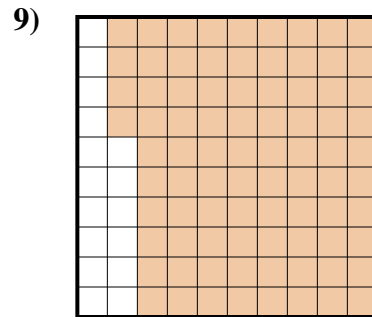
- A. 80
- B. 0,8
- C. 8
- D. 800



- A. 0,99
- B. 990
- C. 99
- D. 0,099



- A. 0,02
- B. 2
- C. 0,2
- D. 20



- A. 84
- B. 0,84
- C. 8,4
- D. 840

1. _____

2. _____

3. _____

4. _____

5. _____

6. _____

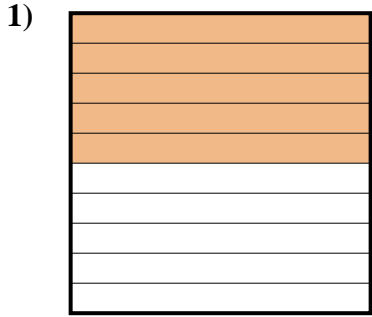
7. _____

8. _____

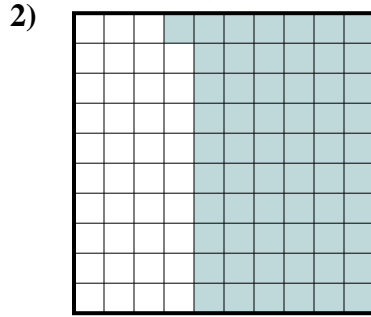
9. _____



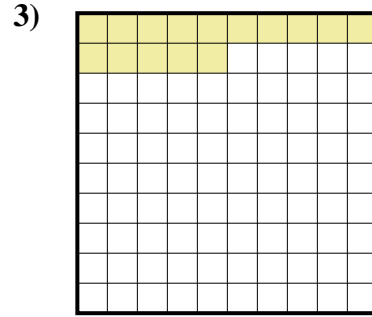
Déterminez quelle lettre représente le mieux la valeur colorée relative à la figure.



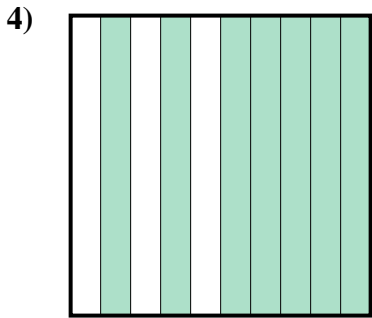
- A. 500
- B. 5
- C. 50
- D. 0,5



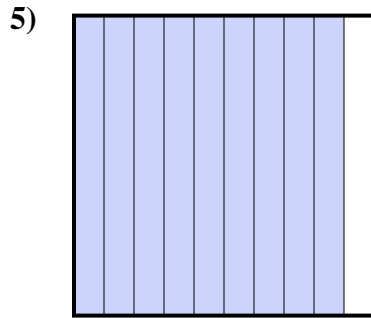
- A. 61
- B. 610
- C. 0,061
- D. 0,61



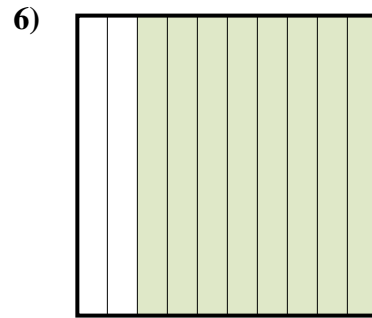
- A. 1,5
- B. 15
- C. 150
- D. 0,15



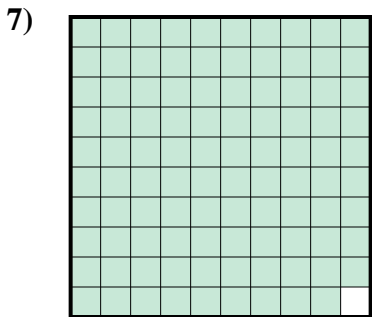
- A. 70
- B. 700
- C. 0,7
- D. 0,07




- A. 0,09
- B. 90
- C. 0,9
- D. 9



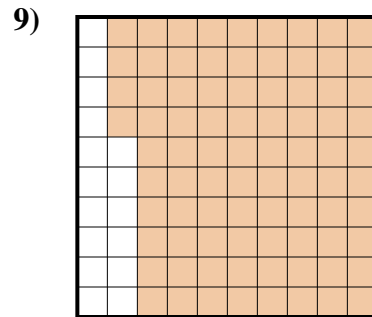
- A. 80
- B. 0,8
- C. 8
- D. 800



- A. 0,99
- B. 990
- C. 99
- D. 0,099



- A. 0,02
- B. 2
- C. 0,2
- D. 20



- A. 84
- B. 0,84
- C. 8,4
- D. 840

Réponses

- 1. **D**
- 2. **D**
- 3. **D**
- 4. **C**
- 5. **C**
- 6. **B**
- 7. **A**
- 8. **C**
- 9. **B**