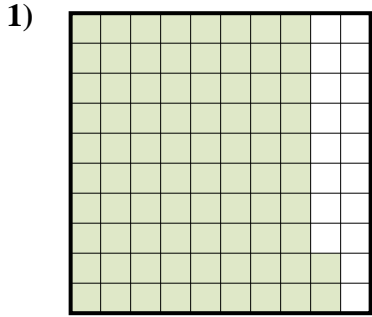


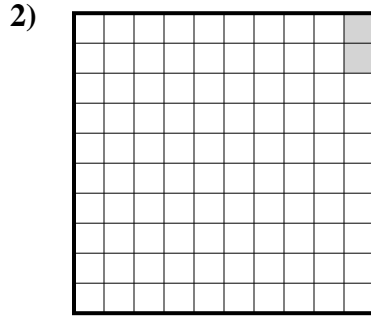


Déterminez quelle lettre représente le mieux la valeur colorée relative à la figure.

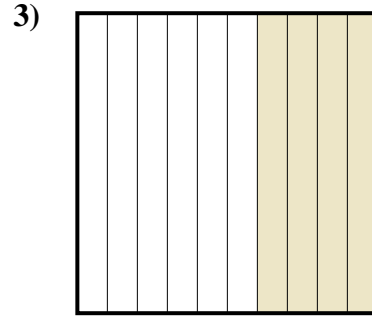
Réponses



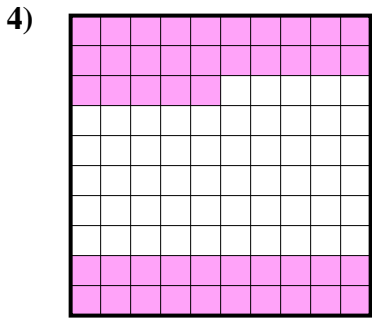
- A. 820
- B. 0,82
- C. 82
- D. 8,2



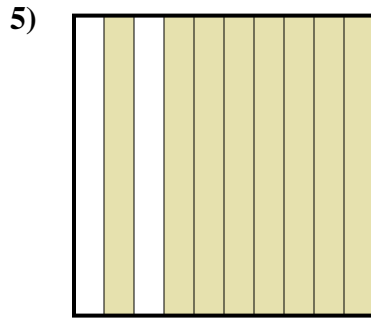
- A. 0,02
- B. 0,002
- C. 0,2
- D. 20



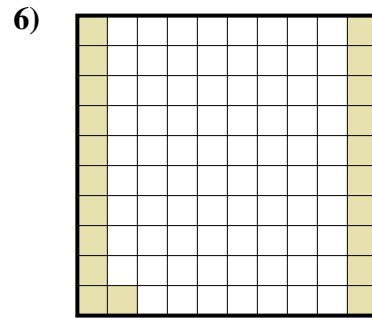
- A. 0,4
- B. 0,04
- C. 400
- D. 40




- A. 450
- B. 0,045
- C. 4,5
- D. 0,45



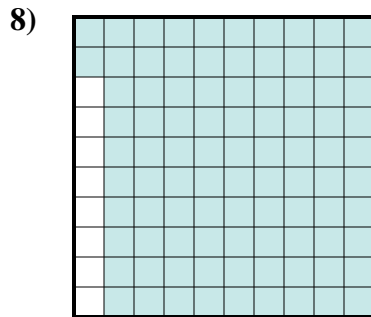
- A. 800
- B. 0,8
- C. 0,08
- D. 80




- A. 2,1
- B. 210
- C. 21
- D. 0,21



- A. 6
- B. 60
- C. 0,6
- D. 0,06



- A. 0,92
- B. 92
- C. 0,092
- D. 9,2

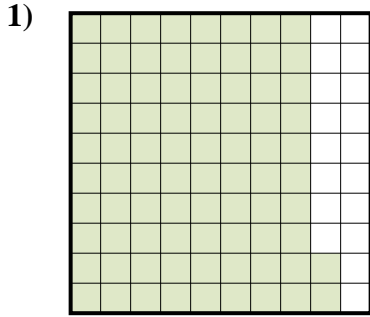


- A. 0,01
- B. 0,1
- C. 10
- D. 100

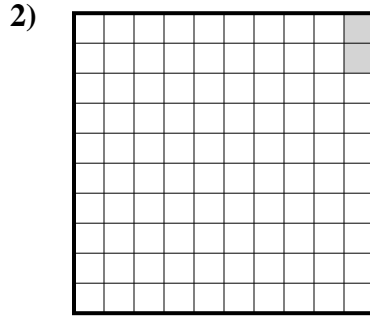
- 1. _____
- 2. _____
- 3. _____
- 4. _____
- 5. _____
- 6. _____
- 7. _____
- 8. _____
- 9. _____



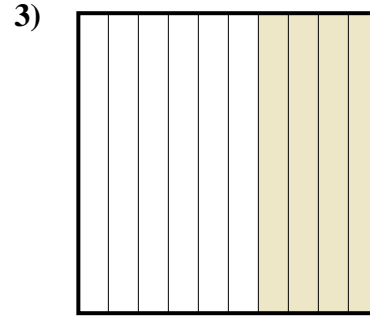
Déterminez quelle lettre représente le mieux la valeur colorée relative à la figure.



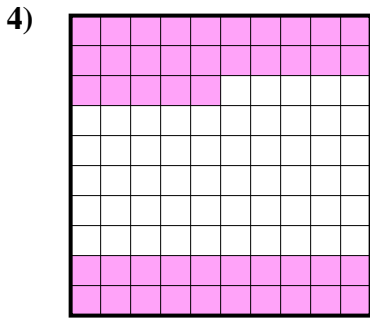
- A. 820
- B. 0,82
- C. 82
- D. 8,2



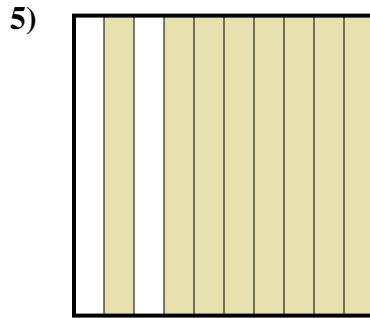
- A. 0,02
- B. 0,002
- C. 0,2
- D. 20



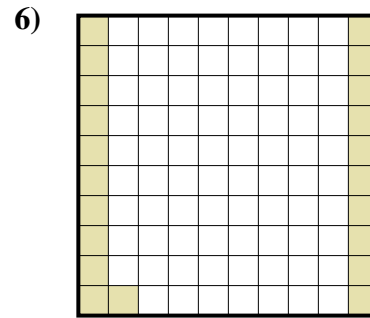
- A. 0,4
- B. 0,04
- C. 400
- D. 40




- A. 450
- B. 0,045
- C. 4,5
- D. 0,45



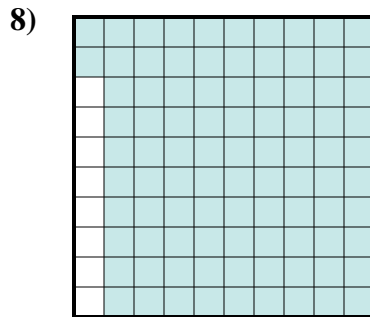
- A. 800
- B. 0,8
- C. 0,08
- D. 80




- A. 2,1
- B. 210
- C. 21
- D. 0,21



- A. 6
- B. 60
- C. 0,6
- D. 0,06



- A. 0,92
- B. 92
- C. 0,092
- D. 9,2



- A. 0,01
- B. 0,1
- C. 10
- D. 100

Réponses

- 1. **B**
- 2. **A**
- 3. **A**
- 4. **D**
- 5. **B**
- 6. **D**
- 7. **C**
- 8. **A**
- 9. **B**