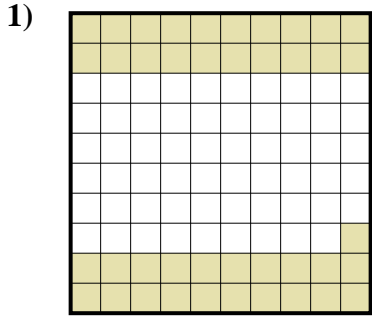


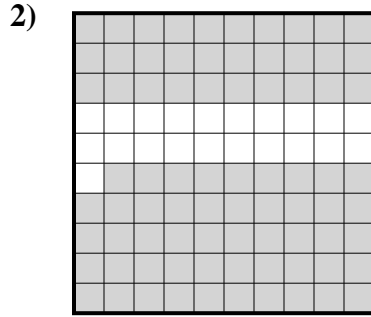


Déterminez quelle lettre représente le mieux la valeur colorée relative à la figure.

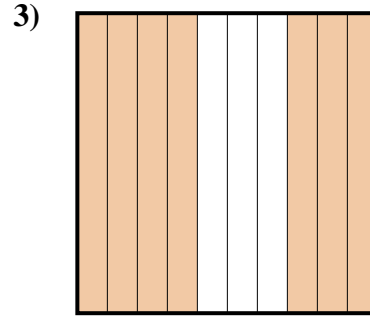
Réponses



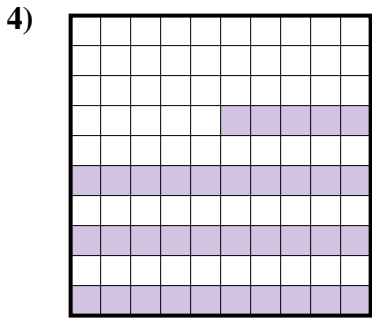
- A. 0,41
- B. 4,1
- C. 410
- D. 0,041



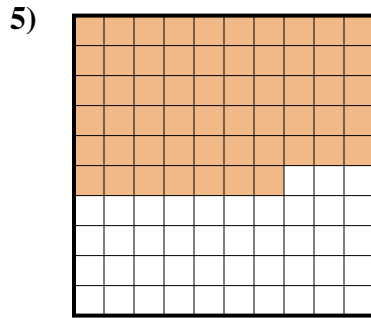
- A. 0,79
- B. 7,9
- C. 79
- D. 0,079



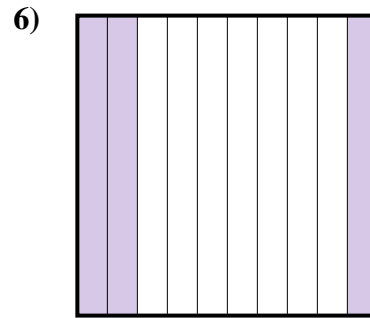
- A. 0,7
- B. 70
- C. 7
- D. 0,07



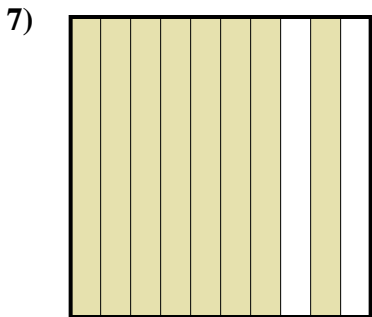
- A. 3,5
- B. 350
- C. 0,35
- D. 0,035



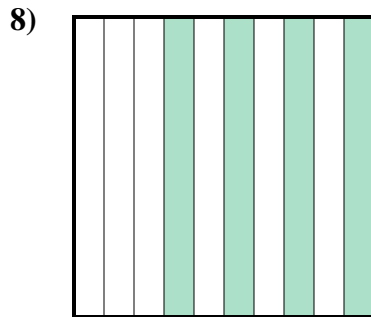
- A. 5,7
- B. 0,057
- C. 0,57
- D. 57



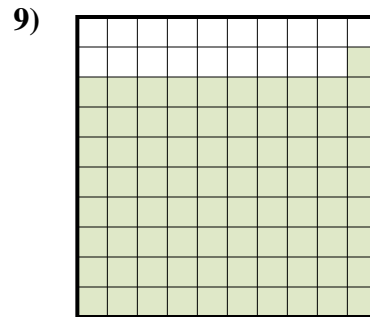
- A. 30
- B. 0,03
- C. 300
- D. 0,3



- A. 80
- B. 0,08
- C. 8
- D. 0,8



- A. 40
- B. 400
- C. 0,4
- D. 0,04

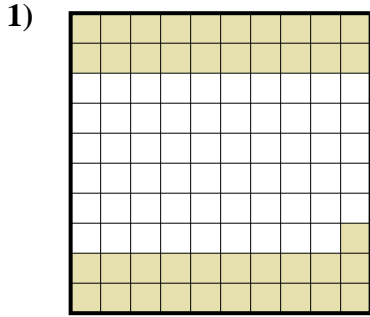


- A. 0,81
- B. 810
- C. 0,081
- D. 8,1

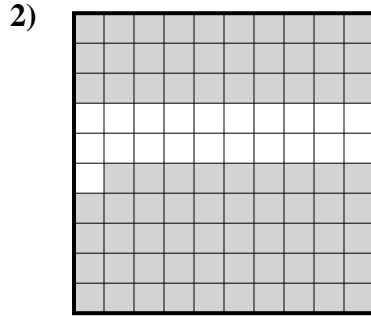
- 1. _____
- 2. _____
- 3. _____
- 4. _____
- 5. _____
- 6. _____
- 7. _____
- 8. _____
- 9. _____



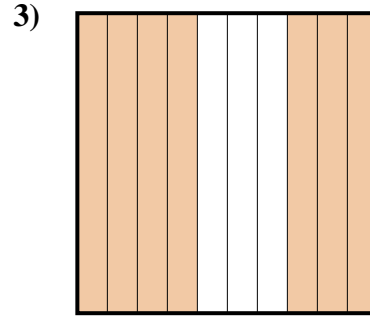
Déterminez quelle lettre représente le mieux la valeur colorée relative à la figure.



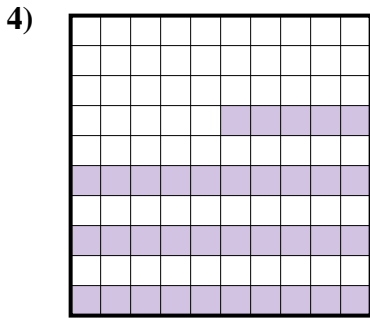
- A. 0,41
- B. 4,1
- C. 410
- D. 0,041



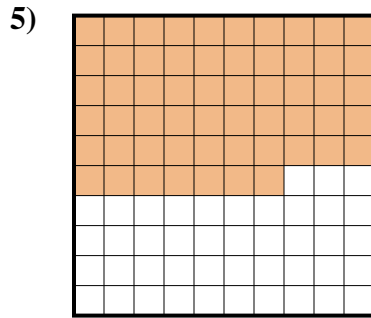
- A. 0,79
- B. 7,9
- C. 79
- D. 0,079



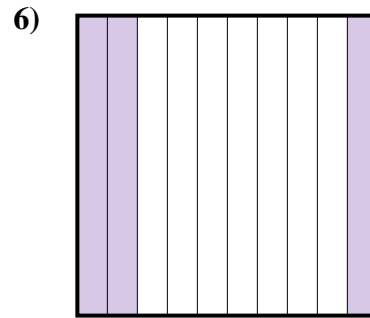
- A. 0,7
- B. 70
- C. 7
- D. 0,07



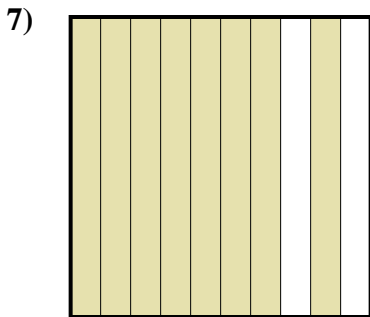
- A. 3,5
- B. 350
- C. 0,35
- D. 0,035



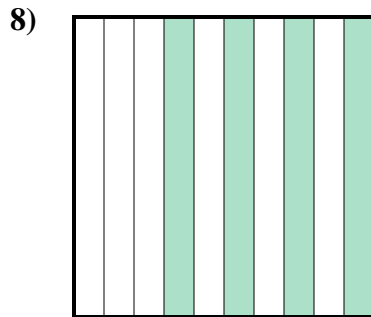
- A. 5,7
- B. 0,057
- C. 0,57
- D. 57



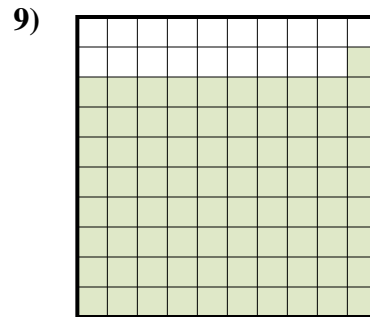
- A. 30
- B. 0,03
- C. 300
- D. 0,3



- A. 80
- B. 0,08
- C. 8
- D. 0,8



- A. 40
- B. 400
- C. 0,4
- D. 0,04



- A. 0,81
- B. 810
- C. 0,081
- D. 8,1

Réponses

- 1. **A**
- 2. **A**
- 3. **A**
- 4. **C**
- 5. **C**
- 6. **D**
- 7. **D**
- 8. **C**
- 9. **A**