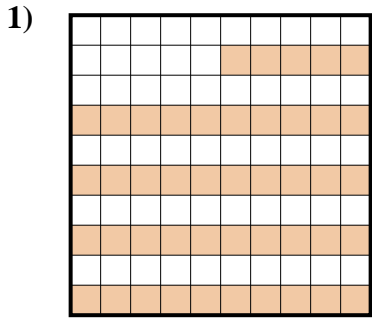


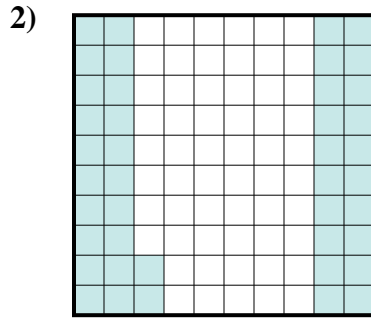


Déterminez quelle lettre représente le mieux la valeur colorée relative à la figure.

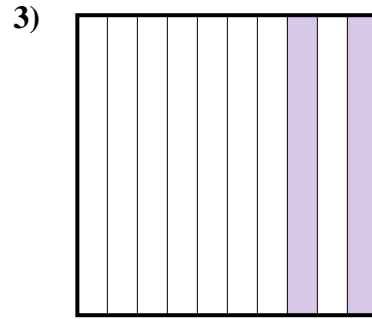
**Réponses**



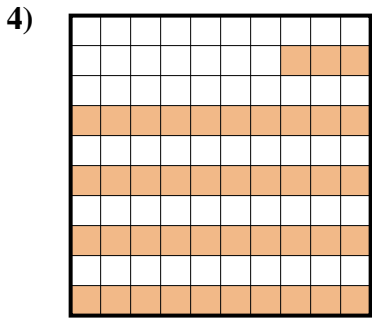
- A. 4,5
- B. 450
- C. 0,45
- D. 45




- A. 4,2
- B. 0,42
- C. 0,042
- D. 42




- A. 0,2
- B. 20
- C. 200
- D. 2



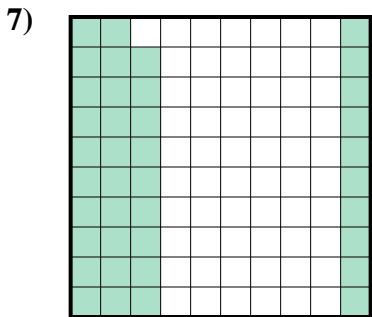
- A. 0,43
- B. 43
- C. 4,3
- D. 0,043



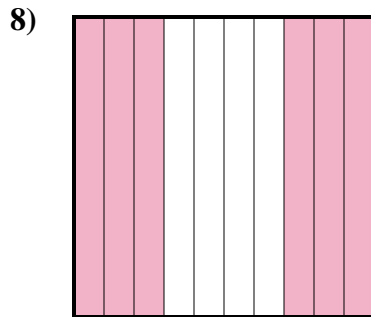
- A. 100
- B. 10
- C. 0,1
- D. 1



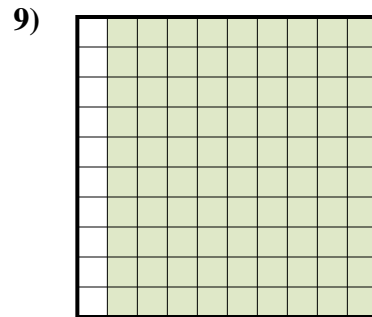
- A. 500
- B. 0,5
- C. 50
- D. 0,05



- A. 3,9
- B. 0,039
- C. 39
- D. 0,39



- A. 60
- B. 6
- C. 600
- D. 0,6

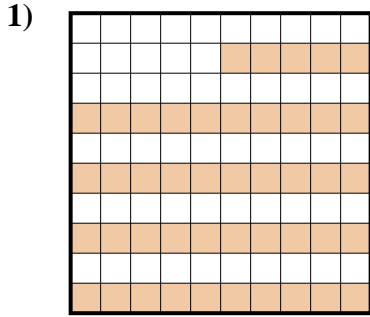


- A. 9
- B. 90
- C. 0,9
- D. 900

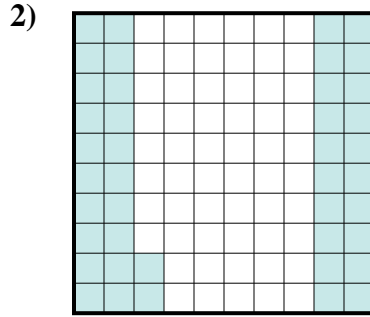
- 1. \_\_\_\_\_
- 2. \_\_\_\_\_
- 3. \_\_\_\_\_
- 4. \_\_\_\_\_
- 5. \_\_\_\_\_
- 6. \_\_\_\_\_
- 7. \_\_\_\_\_
- 8. \_\_\_\_\_
- 9. \_\_\_\_\_



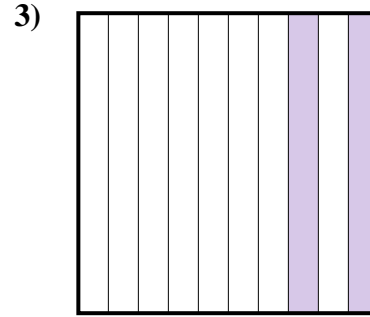
Déterminez quelle lettre représente le mieux la valeur colorée relative à la figure.



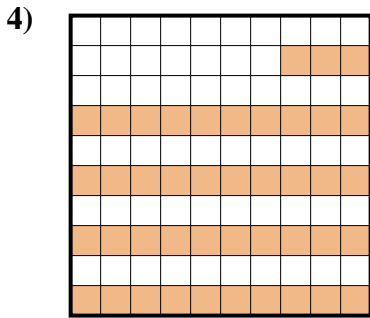
- A. 4,5  
B. 450  
C. 0,45  
D. 45




- A. 4,2  
B. 0,42  
C. 0,042  
D. 42




- A. 0,2  
B. 20  
C. 200  
D. 2



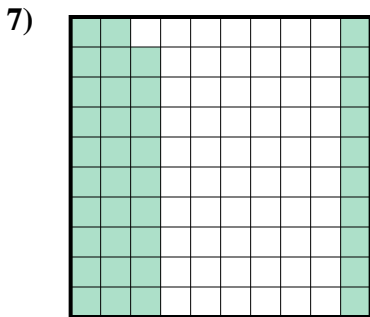
- A. 0,43  
B. 43  
C. 4,3  
D. 0,043



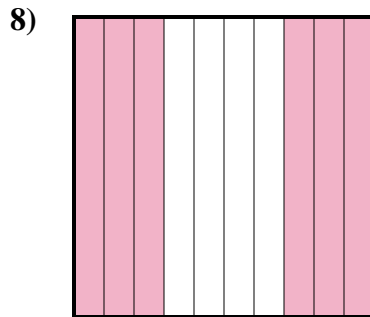
- A. 100  
B. 10  
C. 0,1  
D. 1



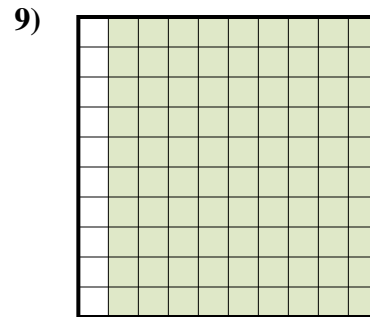
- A. 500  
B. 0,5  
C. 50  
D. 0,05



- A. 3,9  
B. 0,039  
C. 39  
D. 0,39



- A. 60  
B. 6  
C. 600  
D. 0,6



- A. 9  
B. 90  
C. 0,9  
D. 900

**Réponses**

1.           **C**            
2.           **B**            
3.           **A**            
4.           **A**            
5.           **C**            
6.           **B**            
7.           **D**            
8.           **D**            
9.           **C**