
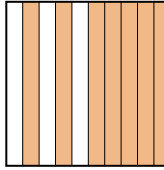
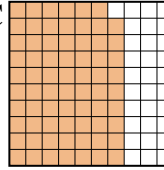
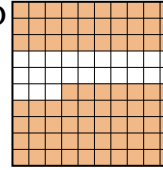




Classer les grilles, en fonction des zones colorées, de la plus petite à la plus grande.



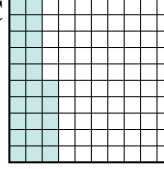
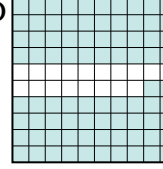
**Réponses**

Ex) A  B  C  D 



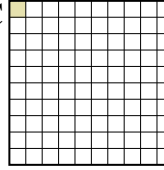
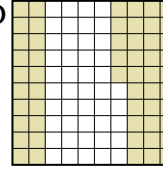
petite  $0,1 - A$   
 $0,69 - C$   
 $0,7 - B$   
 grande  $0,77 - D$

Ex. **A,C,B,D**

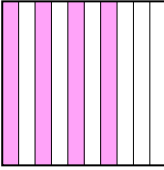
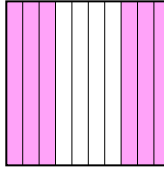
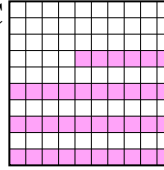
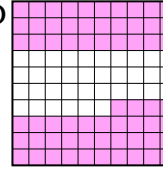
1. \_\_\_\_\_
2. \_\_\_\_\_
3. \_\_\_\_\_
4. \_\_\_\_\_
5. \_\_\_\_\_
6. \_\_\_\_\_
7. \_\_\_\_\_
8. \_\_\_\_\_

1) A  B  C  D 


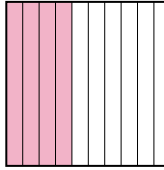
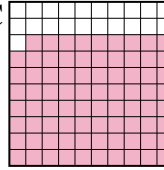
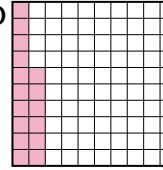
petite \_\_\_\_\_  
 grande \_\_\_\_\_

2) A  B  C  D 

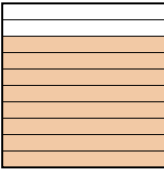
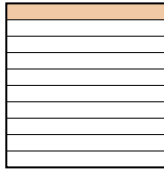
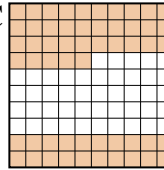
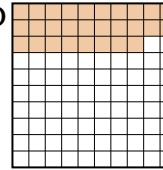
petite \_\_\_\_\_  
 grande \_\_\_\_\_

3) A  B  C  D 

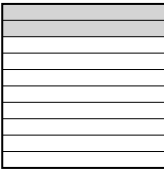
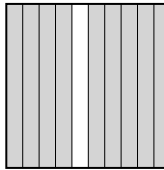


petite \_\_\_\_\_  
 grande \_\_\_\_\_

4) A  B  C  D 

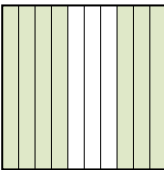

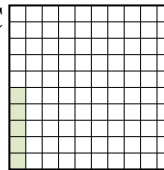
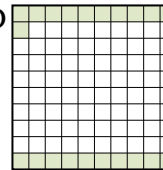
petite \_\_\_\_\_  
 grande \_\_\_\_\_

5) A  B  C  D 

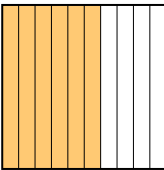

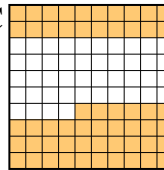
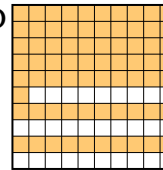
petite \_\_\_\_\_  
 grande \_\_\_\_\_

6) A  B  C  D 

petite \_\_\_\_\_  
 grande \_\_\_\_\_

7) A  B  C  D 

petite \_\_\_\_\_  
 grande \_\_\_\_\_

8) A  B  C  D 

petite \_\_\_\_\_  
 grande \_\_\_\_\_



Classer les grilles, en fonction des zones colorées, de la plus petite à la plus grande.

Ex)	A	B	C	D	petite $\frac{0,1 - A}{0,69 - C}$ $\frac{0,7 - B}{0,77 - D}$
1)	A	B	C	D	petite $\frac{0,25 - C}{0,5 - B}$ $\frac{0,82 - D}{0,9 - A}$
2)	A	B	C	D	petite $\frac{0,01 - C}{0,2 - B}$ $\frac{0,3 - A}{0,55 - D}$
3)	A	B	C	D	petite $\frac{0,36 - C}{0,4 - A}$ $\frac{0,6 - B}{0,64 - D}$
4)	A	B	C	D	petite $\frac{0,16 - D}{0,4 - B}$ $\frac{0,5 - A}{0,79 - C}$
5)	A	B	C	D	petite $\frac{0,1 - B}{0,28 - D}$ $\frac{0,55 - C}{0,8 - A}$
6)	A	B	C	D	petite $\frac{0,2 - A}{0,32 - D}$ $\frac{0,44 - C}{0,9 - B}$
7)	A	B	C	D	petite $\frac{0,05 - C}{0,21 - D}$ $\frac{0,7 - A}{0,9 - B}$
8)	A	B	C	D	petite $\frac{0,56 - C}{0,6 - A}$ $\frac{0,7 - B}{0,71 - D}$

**Réponses**

- Ex. A,C,B,D
1. C,B,D,A
2. C,B,A,D
3. C,A,B,D
4. D,B,A,C
5. B,D,C,A
6. A,D,C,B
7. C,D,A,B
8. C,A,B,D